



Determine which pictograph best represents the information in the chart.

Answers

1)

Name	Medals Earned
Haley	4
Bianca	10
Tom	8
Dave	6
Luke	18

2)

Name	Medals Earned
Haley	14
Bianca	10
Tom	20
Dave	4
Luke	16

3)

Name	Medals Earned
Haley	12
Bianca	8
Tom	16
Dave	4
Luke	6

4)

Name	Medals Earned
Haley	6
Bianca	2
Tom	16
Dave	8
Luke	14

5)

Name	Medals Earned
Haley	16
Bianca	6
Tom	2
Dave	8
Luke	14

6)

Name	Medals Earned
Haley	18
Bianca	16
Tom	6
Dave	20
Luke	4

1. _____

2. _____

3. _____


4. _____

5. _____





6. _____


A.

Name	Medals Earned
Haley	
Bianca	
Tom	
Dave	
Luke	

Each  = 2 medal


B.

Name	Medals Earned
Haley	
Bianca	
Tom	
Dave	
Luke	


Each  = 2 medal


C.

Name	Medals Earned
Haley	
Bianca	
Tom	
Dave	
Luke	





Each  = 2 medal


D.

Name	Medals Earned
Haley	
Bianca	
Tom	
Dave	
Luke	






Each  = 2 medal


E.

Name	Medals Earned
Haley	
Bianca	
Tom	
Dave	
Luke	

Each  = 2 medal

F.

Name	Medals Earned
Haley	
Bianca	
Tom	
Dave	
Luke	

Each  = 2 medal



Determine which pictograph best represents the information in the chart.

1)

Name	Medals Earned
Haley	4
Bianca	10
Tom	8
Dave	6
Luke	18

2)

Name	Medals Earned
Haley	14
Bianca	10
Tom	20
Dave	4
Luke	16

3)

Name	Medals Earned
Haley	12
Bianca	8
Tom	16
Dave	4
Luke	6

4)

Name	Medals Earned
Haley	6
Bianca	2
Tom	16
Dave	8
Luke	14

5)

Name	Medals Earned
Haley	16
Bianca	6
Tom	2
Dave	8
Luke	14

6)


Name	Medals Earned
Haley	18
Bianca	16
Tom	6
Dave	20
Luke	4

Answers




















- E**
- D**
- B**
- F**
- A**
- C**


A.

Name	Medals Earned
Haley	       
Bianca	  
Tom	
Dave	   
Luke	       

















Each  = 2 medal


B.

Name	Medals Earned
Haley	    
Bianca	  
Tom	     
Dave	 
Luke	  


























Each  = 2 medal


C.

Name	Medals Earned
Haley	       
Bianca	     
Tom	  
Dave	       
Luke	 





Each  = 2 medal


D.

Name	Medals Earned
Haley	     
Bianca	   
Tom	      
Dave	 
Luke	     




















Each  = 2 medal


E.

Name	Medals Earned
Haley	 
Bianca	    
Tom	   
Dave	  
Luke	       

Each  = 2 medal

F.

Name	Medals Earned
Haley	  
Bianca	
Tom	     
Dave	  
Luke	     

Each  = 2 medal