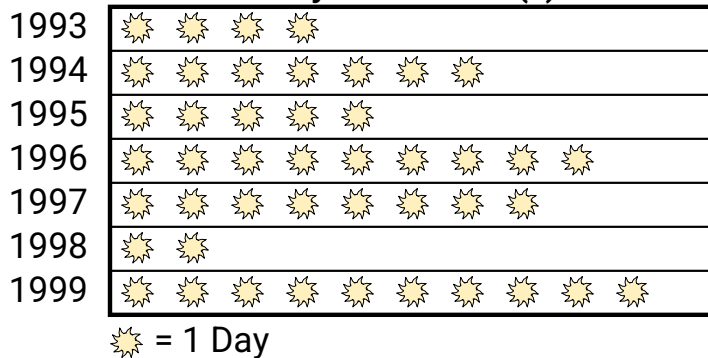





A weatherman was recording the number of days where the temperature was over 90°. He recorded the information in the pictograph below.

Answers**Days over 90°(f)**

- 1) Which year had the most days where the temperature was over 90°?
- 2) How many days was the temperature over 90° in 1995?
- 3) Which year had exactly 9 days over 90°?
- 4) Which year had the fewest days where the temperature was over 90°?
- 5) Which year had more days over 90°, 1993 or 1994?

1. _____
2. _____
3. _____
4. _____
5. _____
6. _____
7. _____
8. _____
9. _____
10. _____

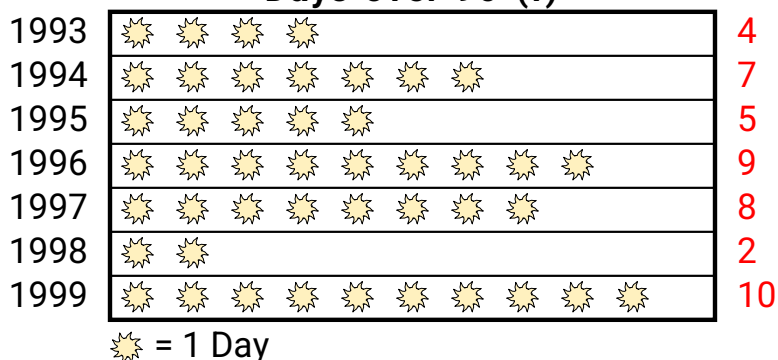
Victor and his friends were trying to see who could catch the most bugs in a day. They recorded their information in the pictograph below.

Bug Catching Contest

- 6) How many bugs did George catch?
- 7) Who caught more bugs, Billy or Luke?
- 8) Who caught the fewest number of bugs?
- 9) Who caught the greatest number of bugs?
- 10) Who caught exactly 48 bugs?




A weatherman was recording the number of days where the temperature was over 90°. He recorded the information in the pictograph below.

Answers**Days over 90° (f)**

- 1) Which year had the most days where the temperature was over 90°?
- 2) How many days was the temperature over 90° in 1995?
- 3) Which year had exactly 9 days over 90°?
- 4) Which year had the fewest days where the temperature was over 90°?
- 5) Which year had more days over 90°, 1993 or 1994?

1. **1999**
2. **5**
3. **1996**
4. **1998**
5. **1994**
6. **30**
7. **Luke**
8. **Paul**
9. **John**
10. **Will**

Victor and his friends were trying to see who could catch the most bugs in a day. They recorded their information in the pictograph below.

Bug Catching Contest

- 6) How many bugs did George catch?
- 7) Who caught more bugs, Billy or Luke?
- 8) Who caught the fewest number of bugs?
- 9) Who caught the greatest number of bugs?
- 10) Who caught exactly 48 bugs?