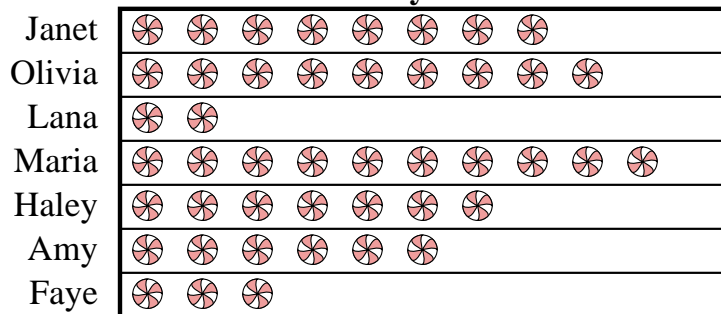





Faye and her friends were comparing the amount of candy they received on Halloween. They recorded their information in the pictograph below.

Candy Haul

 = 3 kilograms of candy

- 1) How many kilograms of candy did Lana get?
- 2) Who got the most candy?
- 3) Who got exactly 30 kilograms of candy?
- 4) Who got more candy, Janet or Olivia?
- 5) Who got the least amount of candy?

Dave was recording how many slam dunks his favorite teams scored. He organized the information in the pictograph below.

Slam Dunks

 = 4 slam dunks

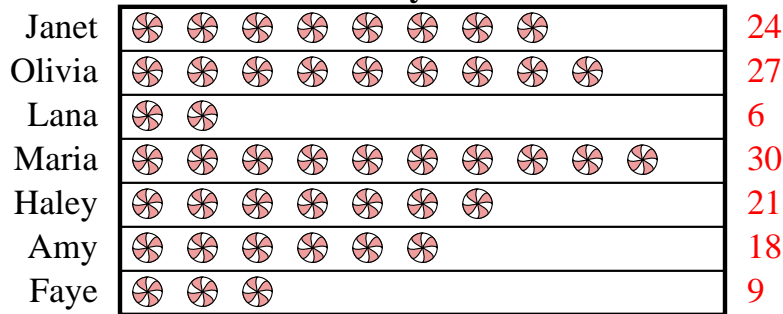
- 6) Which team had the largest number of slam dunks?
- 7) Which team had more slam dunks, Warriors or Hawks?
- 8) Which team had the fewest number of slam dunks?
- 9) Which team scored exactly 32 slam dunks?
- 10) How many slam dunks did the Bulls make?

Answers

1. _____
2. _____
3. _____
4. _____
5. _____
6. _____
7. _____
8. _____
9. _____
10. _____




Faye and her friends were comparing the amount of candy they received on Halloween. They recorded their information in the pictograph below.

Candy Haul

 = 3 kilograms of candy

- 1) How many kilograms of candy did Lana get?
- 2) Who got the most candy?
- 3) Who got exactly 30 kilograms of candy?
- 4) Who got more candy, Janet or Olivia?
- 5) Who got the least amount of candy?

Dave was recording how many slam dunks his favorite teams scored. He organized the information in the pictograph below.

Slam Dunks

 = 4 slam dunks

- 6) Which team had the largest number of slam dunks?
- 7) Which team had more slam dunks, Warriors or Hawks?
- 8) Which team had the fewest number of slam dunks?
- 9) Which team scored exactly 32 slam dunks?
- 10) How many slam dunks did the Bulls make?

Answers

1. **6**
2. **Maria**
3. **Maria**
4. **Olivia**
5. **Lana**
6. **Warriors**
7. **Warriors**
8. **Rockets**
9. **Celtics**
10. **12**