




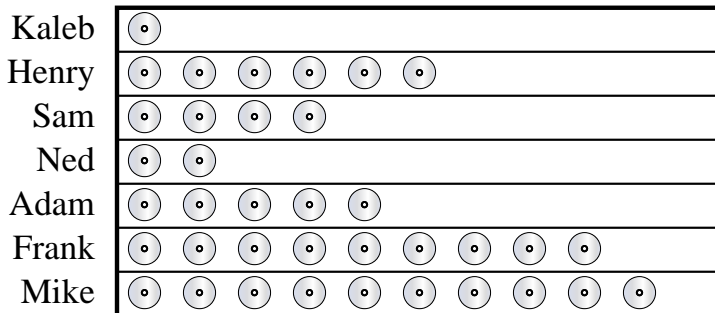


Tom and his friends were trying to see who could catch the most bugs in a day. They recorded their information in the pictograph below.

Bug Catching Contest = 8 Bugs

- 1) Who caught the greatest number of bugs?
- 2) Who caught more bugs, Frank or Mike?
- 3) Who caught exactly 56 bugs?
- 4) Who caught the fewest number of bugs?
- 5) How many bugs did Adam catch?

Henry and his friends were comparing the number of movies they owned. They organized the information in the pictograph below.

DVDs owned = 5 DVDs



- 6) Who owned the fewest DVDs?
- 7) Who owned exactly 10 DVDs?
- 8) Who had more DVDs, Kaleb or Henry?
- 9) Who owned the largest number of DVDs?
- 10) How many DVDs did Sam own?

Answers

1. _____
2. _____
3. _____
4. _____
5. _____
6. _____
7. _____
8. _____
9. _____
10. _____


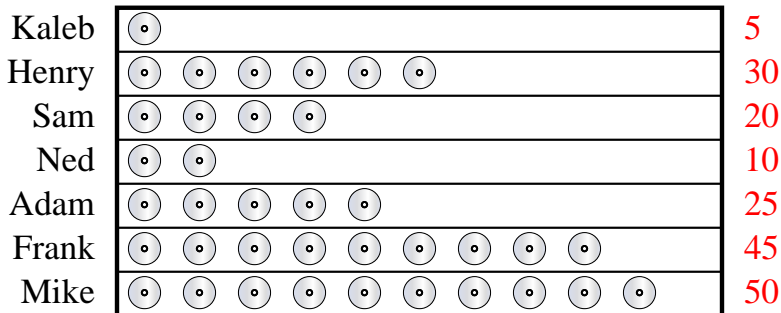


Tom and his friends were trying to see who could catch the most bugs in a day. They recorded their information in the pictograph below.

Bug Catching Contest = 8 Bugs

- 1) Who caught the greatest number of bugs?
- 2) Who caught more bugs, Frank or Mike?
- 3) Who caught exactly 56 bugs?
- 4) Who caught the fewest number of bugs?
- 5) How many bugs did Adam catch?

Henry and his friends were comparing the number of movies they owned. They organized the information in the pictograph below.

DVDs owned = 5 DVDs

- 6) Who owned the fewest DVDs?
- 7) Who owned exactly 10 DVDs?
- 8) Who had more DVDs, Kaleb or Henry?
- 9) Who owned the largest number of DVDs?
- 10) How many DVDs did Sam own?

Answers

1. **Henry**
2. **Mike**
3. **Henry**
4. **Frank**
5. **24**
6. **Kaleb**
7. **Ned**
8. **Henry**
9. **Mike**
10. **20**