

**Solve each problem.****Answers**

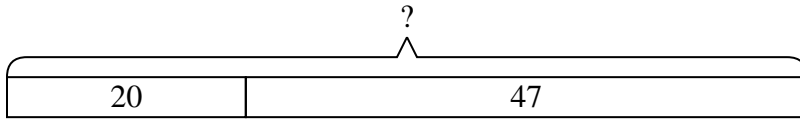
- 1) A restaurant sold 20 sodas in the morning and 47 in the afternoon. How many sodas did they sell total?
- 2) While playing a game Jerry had 11 points. If he scored another 47 points, how many points would he have total?
- 3) There were 41 people in line at lunch when 10 more got in line. How many people were there total in line?
- 4) A farmer planted 26 seeds on Wednesday and another 18 seeds on Thursday. How many seeds did he plant total?
- 5) Emily went to the movies 29 times last year and 47 times this year. How many times did Emily go to the movies total?
- 6) Kristine had \$27 and Tiffany had \$11. If they combined their money, how much would they have?
- 7) Amy has 11 Playstation games and 38 Xbox games. How many games does she have total?

1. _____
2. _____
3. _____
4. _____
5. _____
6. _____
7. _____

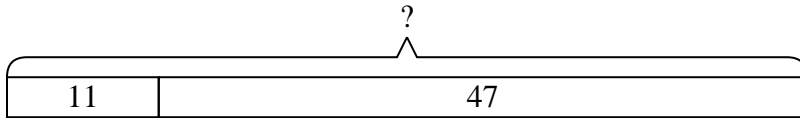


Solve each problem.

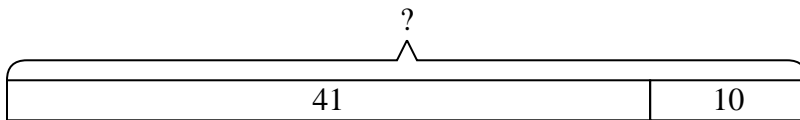
- 1) A restaurant sold 20 sodas in the morning and 47 in the afternoon. How many sodas did they sell total?



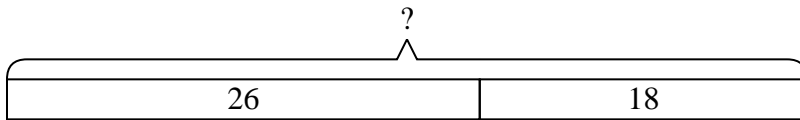
- 2) While playing a game Jerry had 11 points. If he scored another 47 points, how many points would he have total?



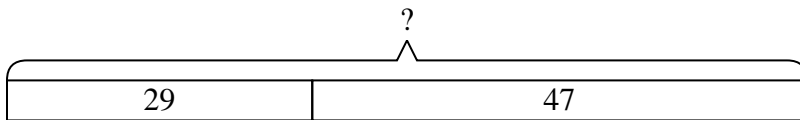
- 3) There were 41 people in line at lunch when 10 more got in line. How many people were there total in line?



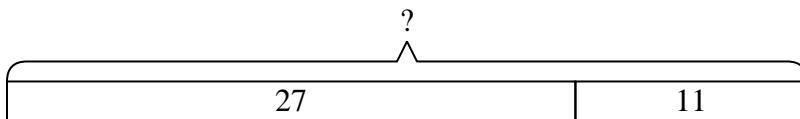
- 4) A farmer planted 26 seeds on Wednesday and another 18 seeds on Thursday. How many seeds did he plant total?



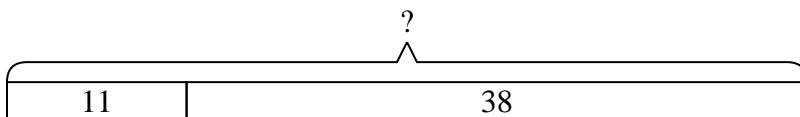
- 5) Emily went to the movies 29 times last year and 47 times this year. How many times did Emily go to the movies total?



- 6) Kristine had \$27 and Tiffany had \$11. If they combined their money, how much would they have?



- 7) Amy has 11 Playstation games and 38 Xbox games. How many games does she have total?

**Answers**

1. **67**
2. **58**
3. **51**
4. **44**
5. **76**
6. **38**
7. **49**