

**Solve each problem.****Answers**

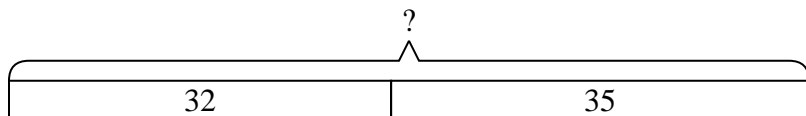
- 1) A pet store had 32 kittens. If they got another 35 kittens, how many would they have total?
- 2) Lana received 37 text messages before noon and another 19 after noon. How many text messages did Lana receive total?
- 3) Bianca has 44 Playstation games and 41 Xbox games. How many games does she have total?
- 4) Emily spent 39 minutes drawing at school and 43 minutes drawing at home. How many minutes total did she spend drawing?
- 5) A store sold 16 cold drinks and 27 hot drinks. How many drinks did they sell total?
- 6) A clown gave away 31 balloons to girls and 40 balloons to boys. How many balloons did he give away total?
- 7) A baker already had 46 cakes but made 45 extra. How many cakes did the baker have total?

1. \_\_\_\_\_
2. \_\_\_\_\_
3. \_\_\_\_\_
4. \_\_\_\_\_
5. \_\_\_\_\_
6. \_\_\_\_\_
7. \_\_\_\_\_

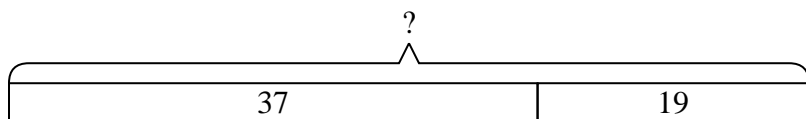


Solve each problem.

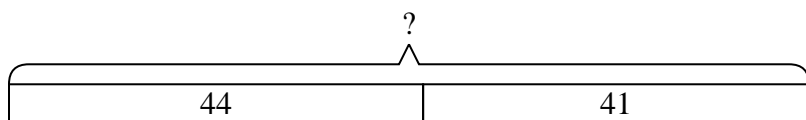
- 1) A pet store had 32 kittens. If they got another 35 kittens, how many would they have total?



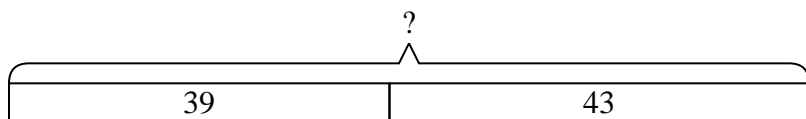
- 2) Lana received 37 text messages before noon and another 19 after noon. How many text messages did Lana receive total?



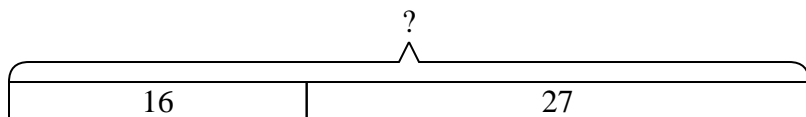
- 3) Bianca has 44 Playstation games and 41 Xbox games. How many games does she have total?



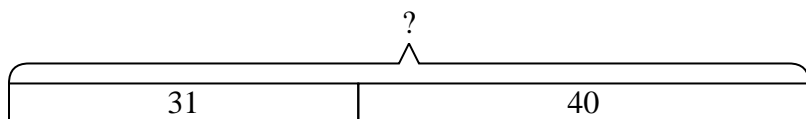
- 4) Emily spent 39 minutes drawing at school and 43 minutes drawing at home. How many minutes total did she spend drawing?



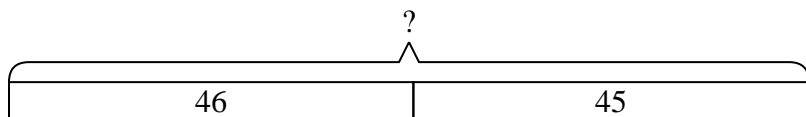
- 5) A store sold 16 cold drinks and 27 hot drinks. How many drinks did they sell total?



- 6) A clown gave away 31 balloons to girls and 40 balloons to boys. How many balloons did he give away total?



- 7) A baker already had 46 cakes but made 45 extra. How many cakes did the baker have total?

**Answers**

1. **67**  
2. **56**  
3. **85**  
4. **82**  
5. **43**  
6. **71**  
7. **91**