

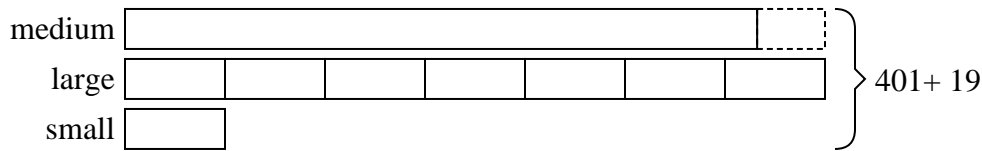




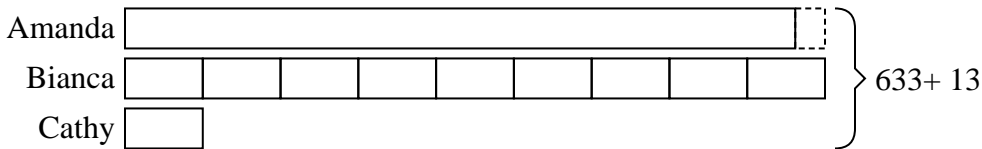
Solve each problem using a tape diagram.

Answers

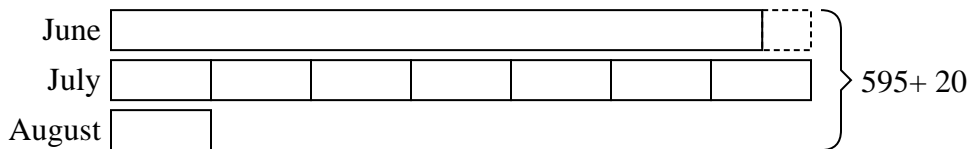
- 1) A theater owner was looking at how many sodas they sold of different sizes in a day. Total they sold 401 sodas. They sold  $\frac{1}{7}$  as many small sodas as they did large sodas. And they sold 19 fewer medium sodas as they did large sodas. How many medium sodas did they sell?

1. **177**2. **34**3. **287**4. **213**5. **222**

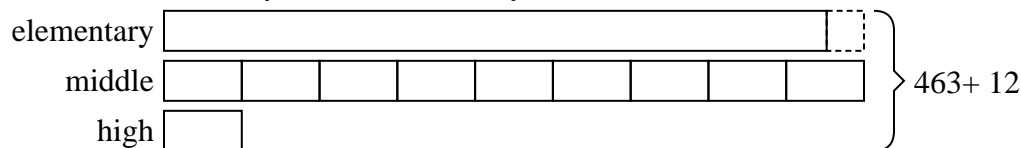
- 2) Amanda, Bianca and Cathy bake 633 muffins. Bianca bakes 9 times as many muffins as Cathy. Amanda bakes 13 fewer muffins than Bianca. How many muffins did Cathy bake?



- 3) Henry earned \$595 mowing lawns over the summer. In July he earned 7 times as much as he did in August. And in June he earned 20 dollars fewer than in July. How much money did he earn in July?



- 4) The elementary, middle and high schools were competing to see who could earn the most money fund raising. Together they earned \$463. The middle school ended up earning 9 times as much as the high school and the elementary earned \$12 fewer than the high school. How much money did the elementary school earn?



- 5) Over the holiday weekend a game store sold 468 games. On Saturday they sold 6 times as many games as on Sunday. And on Friday they sold 13 fewer games than on Saturday. How many games did they sell on Saturday?

