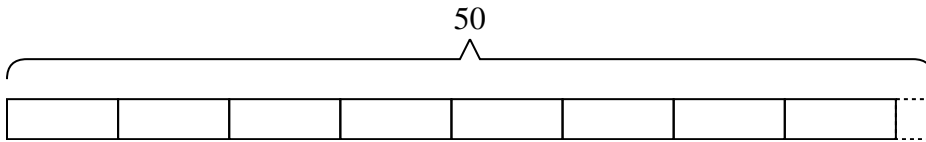




Solve each problem.

**Answers**

- 1) A vat of orange juice was {fifty} pints. If you wanted to pour the vat into {six} glasses with the same amount in each glass, how many pints would be in each glass?

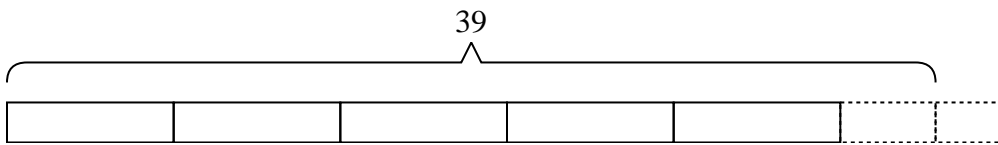


1. \_\_\_\_\_

2. \_\_\_\_\_

3. \_\_\_\_\_

- 2) A movie store had {thirty-nine} movies they were putting on {seven} shelves. If the owner wanted to make sure each shelf had the same number of movies how many more movies would he need?

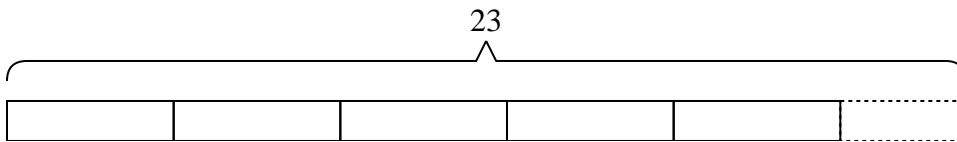


4. \_\_\_\_\_

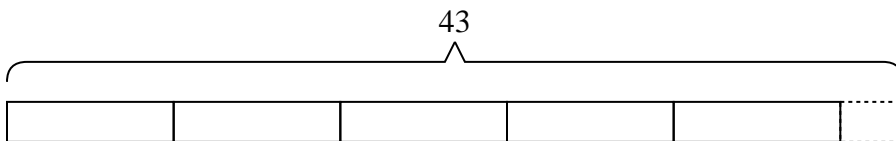
5. \_\_\_\_\_

6. \_\_\_\_\_

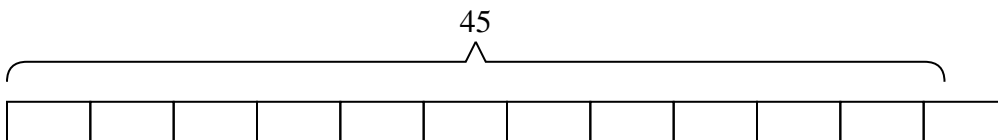
- 3) A box of computer paper has {twenty-three} sheets left in it. If each printer in a computer lab needed {four} sheets how many printers would the box fill up?



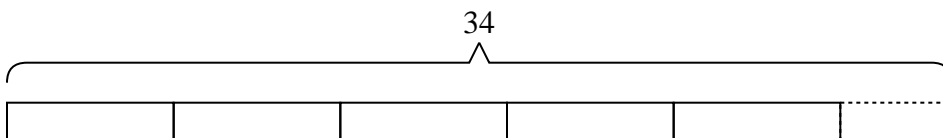
- 4) The roller coaster at the state fair costs {eight} tickets per ride. If you had {forty-three} tickets, how many tickets would you have left if you rode it as many times as you could?



- 5) Edward has to sell {forty-five} chocolate bars to win a trip. If each box contains {four} chocolate bars, how many boxes will he need to sell to win the trip?



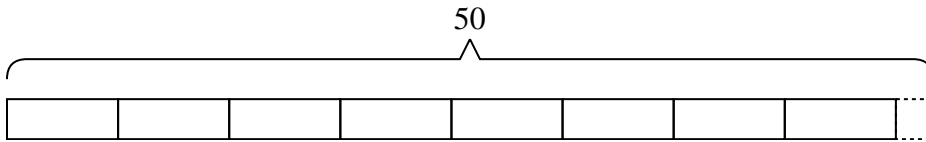
- 6) Nancy had {thirty-four} photos to put into a photo album. If each page holds {six} photos, how many full pages will she have?



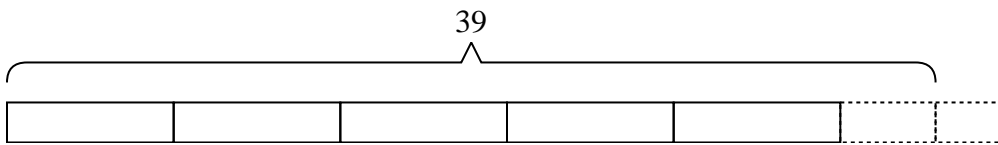


Solve each problem.

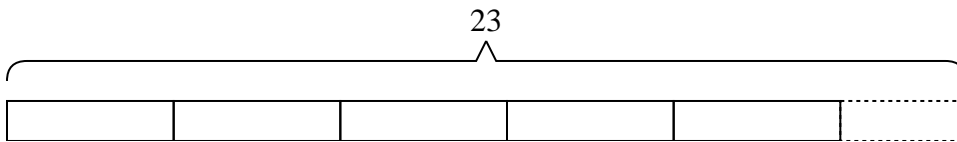
- 1) A vat of orange juice was {fifty} pints. If you wanted to pour the vat into {six} glasses with the same amount in each glass, how many pints would be in each glass?



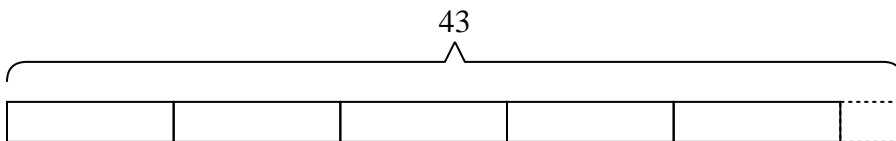
- 2) A movie store had {thirty-nine} movies they were putting on {seven} shelves. If the owner wanted to make sure each shelf had the same number of movies how many more movies would he need?



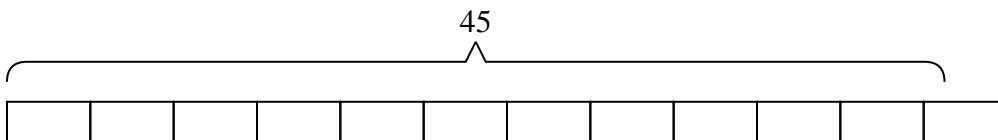
- 3) A box of computer paper has {twenty-three} sheets left in it. If each printer in a computer lab needed {four} sheets how many printers would the box fill up?



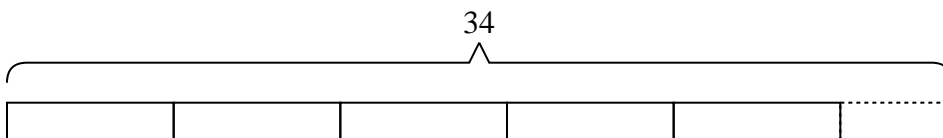
- 4) The roller coaster at the state fair costs {eight} tickets per ride. If you had {forty-three} tickets, how many tickets would you have left if you rode it as many times as you could?



- 5) Edward has to sell {forty-five} chocolate bars to win a trip. If each box contains {four} chocolate bars, how many boxes will he need to sell to win the trip?



- 6) Nancy had {thirty-four} photos to put into a photo album. If each page holds {six} photos, how many full pages will she have?

**Answers**

1. **8**  
2. **3**  
3. **5**  
4. **3**  
5. **12**  
6. **5**