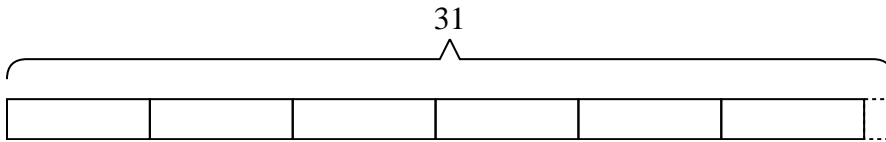




Solve each problem.

Answers

- 1) A new video game console needs {five} computer chips. If a machine can create {thirty-one} computer chips a day, how many video game consoles can be created in a day?

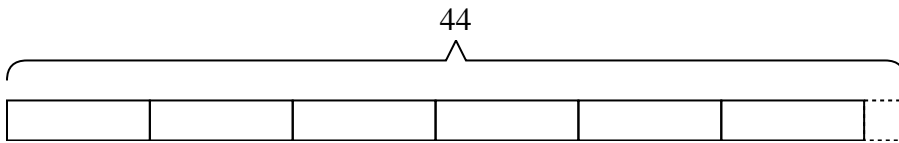


1. \_\_\_\_\_

2. \_\_\_\_\_

3. \_\_\_\_\_

- 2) Rachel received {forty-four} dollars for her birthday. Later she found some toys that cost {seven} dollars each. How much money would she have left if she bought as many as she could?

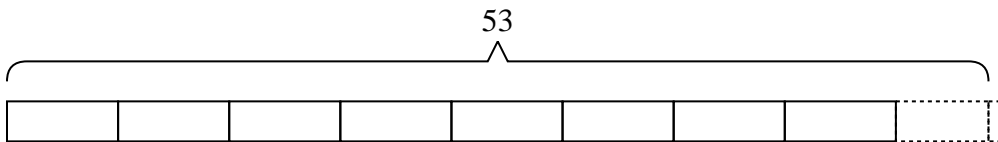


4. \_\_\_\_\_

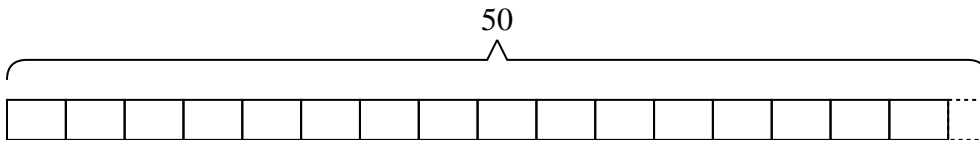
5. \_\_\_\_\_

6. \_\_\_\_\_

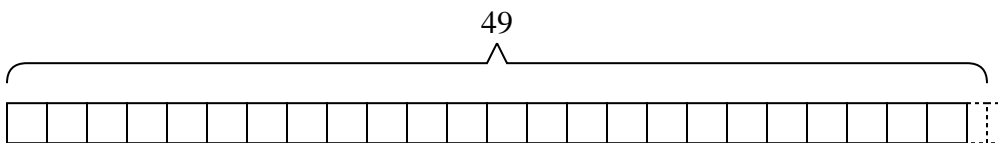
- 3) A botanist picked {fifty-three} flowers. She wanted to put them into {six} bouquets with the same number of flowers in each. How many more should she pick so she doesn't have any extra?



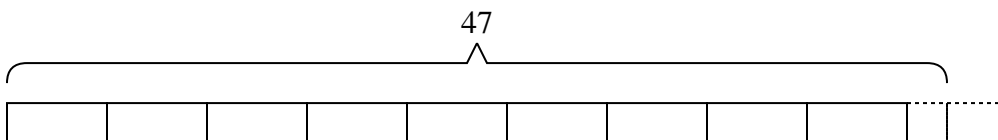
- 4) Paul's dad bought {fifty} meters of string. If he wanted to cut the string into pieces with each piece being {three} meters long, how many full sized pieces could he make?



- 5) At the carnival, {two} friends bought {forty-nine} tickets. If they wanted to split all the tickets so each friend got the same amount, how many more tickets would they need to buy?



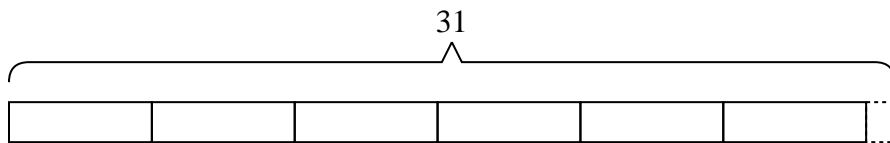
- 6) A school had {forty-seven} students sign up for the trivia teams. If they wanted to have {five} team, with the same number of students on each team, how many more students would need to sign up?



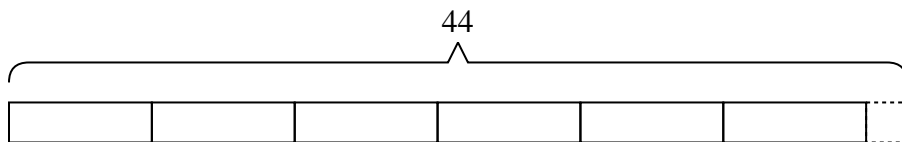


Solve each problem.

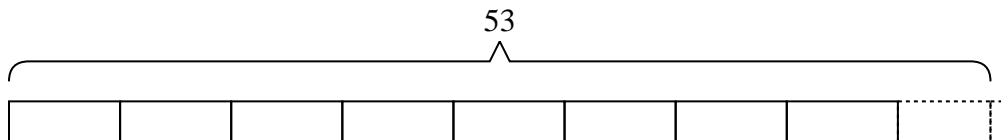
- 1) A new video game console needs {five} computer chips. If a machine can create {thirty-one} computer chips a day, how many video game consoles can be created in a day?



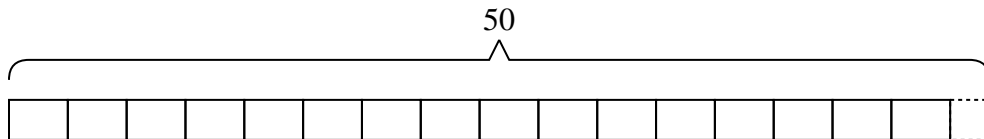
- 2) Rachel received {forty-four} dollars for her birthday. Later she found some toys that cost {seven} dollars each. How much money would she have left if she bought as many as she could?



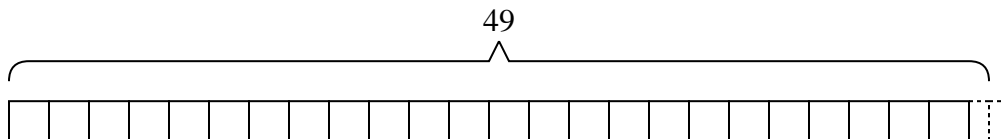
- 3) A botanist picked {fifty-three} flowers. She wanted to put them into {six} bouquets with the same number of flowers in each. How many more should she pick so she doesn't have any extra?



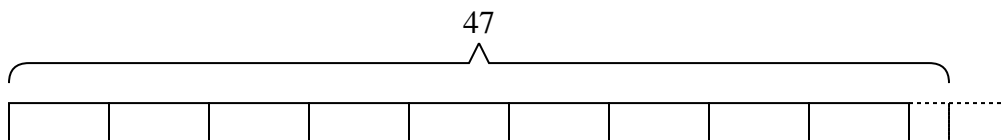
- 4) Paul's dad bought {fifty} meters of string. If he wanted to cut the string into pieces with each piece being {three} meters long, how many full sized pieces could he make?



- 5) At the carnival, {two} friends bought {forty-nine} tickets. If they wanted to split all the tickets so each friend got the same amount, how many more tickets would they need to buy?



- 6) A school had {forty-seven} students sign up for the trivia teams. If they wanted to have {five} team, with the same number of students on each team, how many more students would need to sign up?

**Answers**

1. **6**
2. **2**
3. **1**
4. **16**
5. **1**
6. **3**