



Solve each problem using a tape diagram.

Answers

- 1) Tiffany created an app that she put on the app store. In the first day 13 people downloaded it. On the second day she had 9 times as many downloads. On the third day she had 4 fewer downloads than day 2. How many people downloaded the app in the first 3 days?

- 2) On Friday a game store sold 19 copies of the new Mario game. On Saturday they sold 2 times as many as on Friday. And then on Sunday they sold 6 less than the amount on Friday. How many did they sell total?

- 3) Rachel was organizing her pictures on her computer. In folder 1 she had 26 pictures. In folder 2 she had 8 more pictures than folder 1. And in folder 3 she had 5 times as many pictures as folder 1. How many pictures does she have total?

- 4) In April, Larry's Lawn Care mowed 13 lawns. They mowed 2 times as many in May and 6 fewer in June. How many lawns did they mow over those three months?

- 5) A musician spent 15 hours practicing in January. In February he practiced for 9 hours longer than he did in January. Then in March he practiced for 4 times as long as January. How hours did he spend practicing?

1. _____

2. _____

3. _____

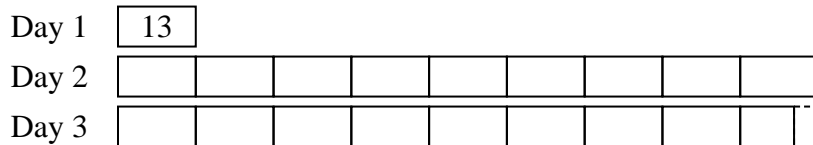
4. _____

5. _____

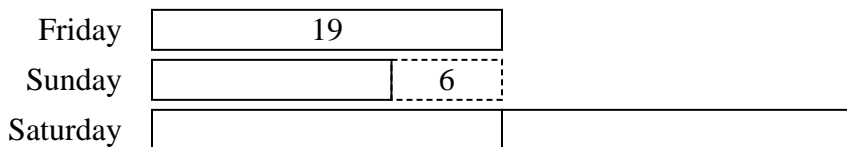


Solve each problem using a tape diagram.

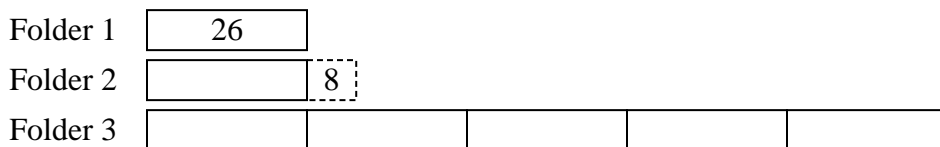
- 1) Tiffany created an app that she put on the app store. In the first day 13 people downloaded it. On the second day she had 9 times as many downloads. On the third day she had 4 fewer downloads than day 2. How many people downloaded the app in the first 3 days?



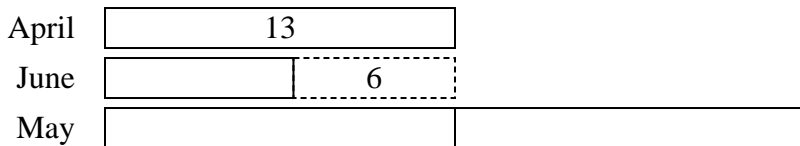
- 2) On Friday a game store sold 19 copies of the new Mario game. On Saturday they sold 2 times as many as on Friday. And then on Sunday they sold 6 less than the amount on Friday. How many did they sell total?



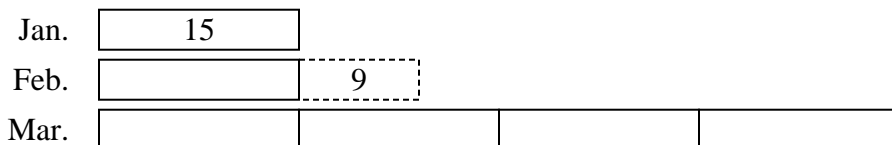
- 3) Rachel was organizing her pictures on her computer. In folder 1 she had 26 pictures. In folder 2 she had 8 more pictures than folder 1. And in folder 3 she had 5 times as many pictures as folder 1. How many pictures does she have total?



- 4) In April, Larry's Lawn Care mowed 13 lawns. They mowed 2 times as many in May and 6 fewer in June. How many lawns did they mow over those three months?



- 5) A musician spent 15 hours practicing in January. In February he practiced for 9 hours longer than he did in January. Then in March he practiced for 4 times as long as January. How hours did he spend practicing?



Answers

1. 243

2. 70

3. 190

4. 46

5. 99