


**Solve each problem using a tape diagram.****Answers**

Ex) In August, Faye's Clothing Store sold 544 shirts with the ratio of short sleeve to long sleeve being 5:3. How many short sleeve shirts were sold?

Ex. 340

1. _____

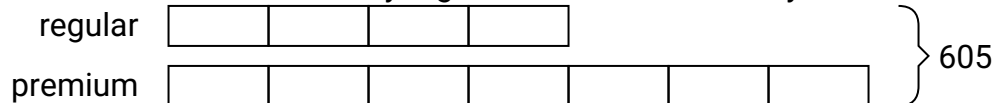
2. _____

3. _____

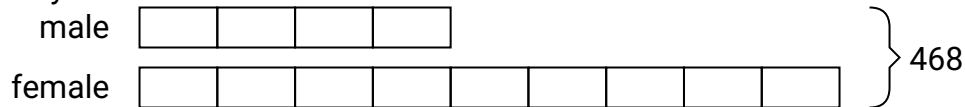
4. _____

5. _____


1) A cable company had 605 subscribers. The ratio of regular subscribers to premium subscribers was 4:7. How many regular subscribers did they have?



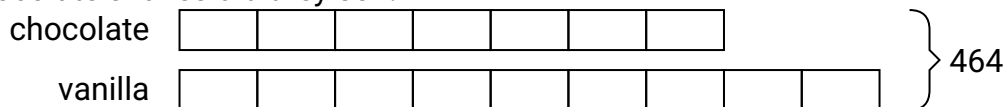
2) At the fair the ratio of male to females was 4:9. If there are 468 people at the fair how many males are there?




3) Frank was looking at his streaming music stats. The ratio of songs he liked to disliked was 4:7. If he listened to 605 songs total how many did he like?



4) Dave's Ice Cream Hut had Chocolate or Vanilla shakes. On the 4th of July they sold 464 shakes total with the ratio of chocolate to vanilla being 7:9. How many chocolate shakes did they sell?




5) A store had 243 sodas, both diet and regular. The ratio of diet sodas to regular sodas was 2:7. How many diet sodas were there?






Solve each problem using a tape diagram.

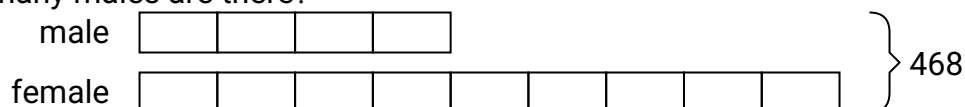
Ex) In August, Faye's Clothing Store sold 544 shirts with the ratio of short sleeve to long sleeve being 5:3. How many short sleeve shirts were sold?




1) A cable company had 605 subscribers. The ratio of regular subscribers to premium subscribers was 4:7. How many regular subscribers did they have?



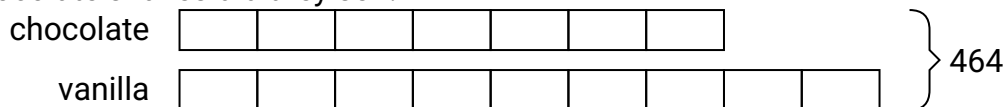
2) At the fair the ratio of male to females was 4:9. If there are 468 people at the fair how many males are there?




3) Frank was looking at his streaming music stats. The ratio of songs he liked to disliked was 4:7. If he listened to 605 songs total how many did he like?



4) Dave's Ice Cream Hut had Chocolate or Vanilla shakes. On the 4th of July they sold 464 shakes total with the ratio of chocolate to vanilla being 7:9. How many chocolate shakes did they sell?



5) A store had 243 sodas, both diet and regular. The ratio of diet sodas to regular sodas was 2:7. How many diet sodas were there?

**Answers**Ex. 3401. 2202. 1443. 2204. 2035. 54