



Solve each problem using a tape diagram.

Answers

Ex) In August, Lana's Clothing Store sold 1,504 shirts with the ratio of short sleeve to long sleeve being 10:6. How many short sleeve shirts were sold?

Ex. 940

1) Mike was looking at his streaming music stats. The ratio of songs he liked to disliked was 5:7. If he listened to 168 songs total how many did he like?

1. _____

2. _____

3. _____

4. _____

5. _____

2) Sam's Ice Cream Hut had Chocolate or Vanilla shakes. On the 4th of July they sold 216 shakes total with the ratio of chocolate to vanilla being 2:10. How many chocolate shakes did they sell?

3) A cable company had 792 subscribers. The ratio of regular subscribers to premium subscribers was 3:5. How many regular subscribers did they have?

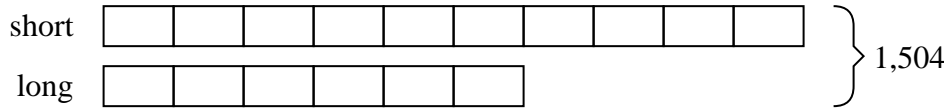
4) At the fair the ratio of male to females was 3:2. If there are 165 people at the fair how many males are there?

5) During an local election the ratio of teens to adults who voted was 7:10. If 714 people voted how many were teens?




Solve each problem using a tape diagram.

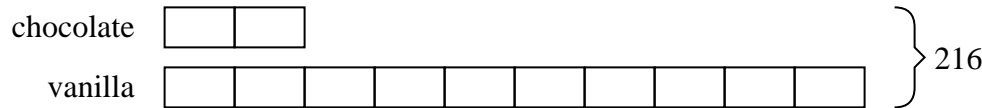
Ex) In August, Lana's Clothing Store sold 1,504 shirts with the ratio of short sleeve to long sleeve being 10:6. How many short sleeve shirts were sold?




1) Mike was looking at his streaming music stats. The ratio of songs he liked to disliked was 5:7. If he listened to 168 songs total how many did he like?




2) Sam's Ice Cream Hut had Chocolate or Vanilla shakes. On the 4th of July they sold 216 shakes total with the ratio of chocolate to vanilla being 2:10. How many chocolate shakes did they sell?



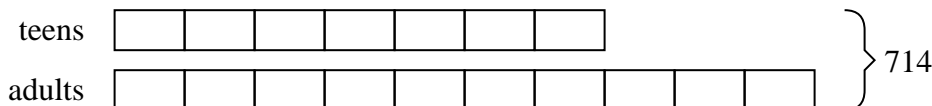
3) A cable company had 792 subscribers. The ratio of regular subscribers to premium subscribers was 3:5. How many regular subscribers did they have?



4) At the fair the ratio of male to females was 3:2. If there are 165 people at the fair how many males are there?



5) During an local election the ratio of teens to adults who voted was 7:10. If 714 people voted how many were teens?

AnswersEx. 9401. 702. 363. 2974. 995. 294