



Solve each problem using a tape diagram.

Answers

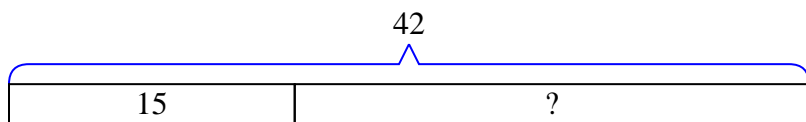
- 1) A clown had 42 balloons. He gave 15 away at a party. How many balloons would he have left over?
- 2) A waiter has 60 customers. If 38 left, how many customers would the waiter still have?
- 3) A pet store had 80 gerbils. If they sold 35 of them, how many would they have left?
- 4) A baker made 68 cakes. 18 were chocolate and the rest were vanilla. How many cakes were vanilla?
- 5) Amy had 53 pieces of paper in her folder. She used 12 pieces. How many pieces does she have now?
- 6) There were 66 people on the train. At the first stop 22 people got off. How many people are left on the train?
- 7) For a party Ned bought 79 cupcakes. If 33 were eaten, how many cupcakes would Ned have left?

1. _____
2. _____
3. _____
4. _____
5. _____
6. _____
7. _____

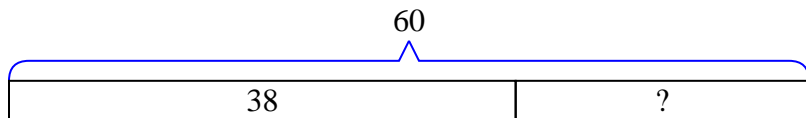


Solve each problem using a tape diagram.

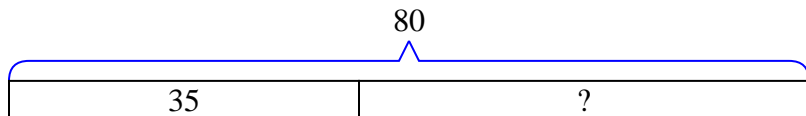
- 1) A clown had 42 balloons. He gave 15 away at a party. How many balloons would he have left over?



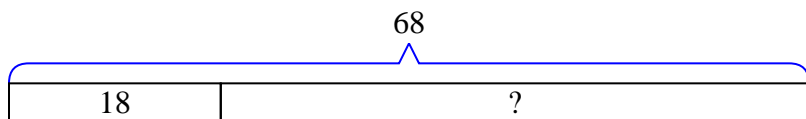
- 2) A waiter has 60 customers. If 38 left, how many customers would the waiter still have?



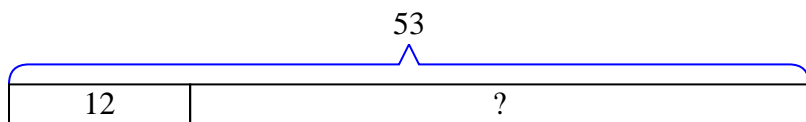
- 3) A pet store had 80 gerbils. If they sold 35 of them, how many would they have left?



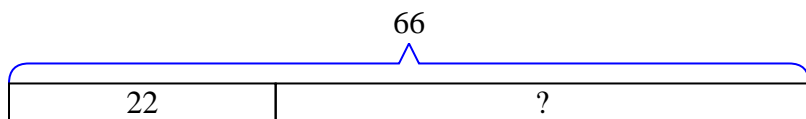
- 4) A baker made 68 cakes. 18 were chocolate and the rest were vanilla. How many cakes were vanilla?



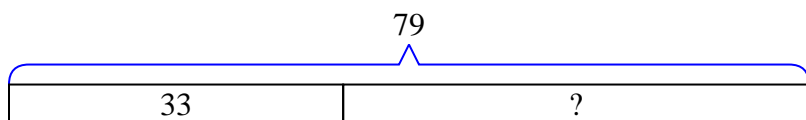
- 5) Amy had 53 pieces of paper in her folder. She used 12 pieces. How many pieces does she have now?



- 6) There were 66 people on the train. At the first stop 22 people got off. How many people are left on the train?



- 7) For a party Ned bought 79 cupcakes. If 33 were eaten, how many cupcakes would Ned have left?

**Answers**1. **27**2. **22**3. **45**4. **50**5. **41**6. **44**7. **46**