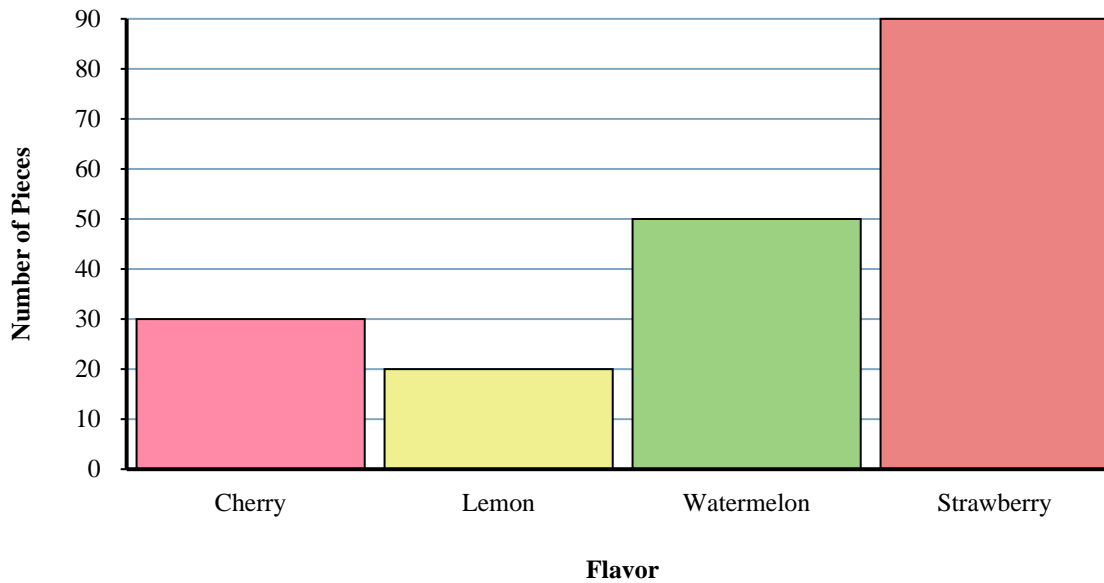




Solve each problem.

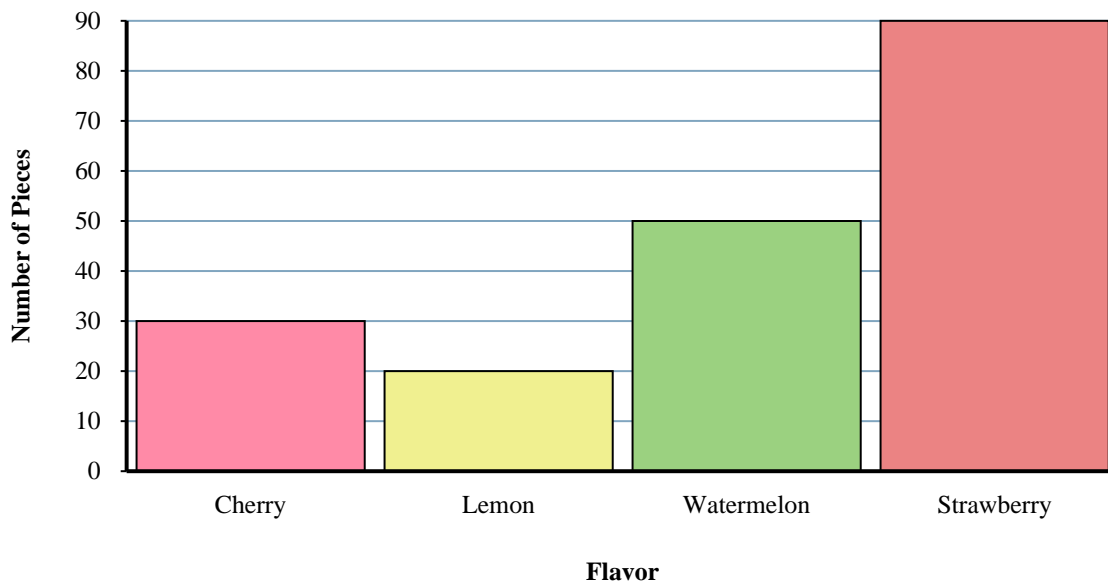
Answers**Jumbo Bag Fruit-o Candy**

- 1) How many more watermelon pieces were there than cherry pieces?
- 2) What is the combined number of watermelon and strawberry pieces?
- 3) How many pieces were there total in the box?
- 4) Which flavor had the fewest pieces in the bag?
- 5) Were there fewer cherry pieces or lemon pieces?
- 6) Which flavor had exactly 30 pieces in the bag?
- 7) Were there more cherry pieces or strawberry pieces?
- 8) How many fewer lemon pieces were there than watermelon pieces?
- 9) How many pieces were watermelon?
- 10) What is the difference in the number of lemon pieces and the number of strawberry pieces?

1. _____
2. _____
3. _____
4. _____
5. _____
6. _____
7. _____
8. _____
9. _____
10. _____



Solve each problem.

Jumbo Bag Fruit-o Candy

- 1) How many more watermelon pieces were there than cherry pieces?
- 2) What is the combined number of watermelon and strawberry pieces?
- 3) How many pieces were there total in the box?
- 4) Which flavor had the fewest pieces in the bag?
- 5) Were there fewer cherry pieces or lemon pieces?
- 6) Which flavor had exactly 30 pieces in the bag?
- 7) Were there more cherry pieces or strawberry pieces?
- 8) How many fewer lemon pieces were there than watermelon pieces?
- 9) How many pieces were watermelon?
- 10) What is the difference in the number of lemon pieces and the number of strawberry pieces?

Answers

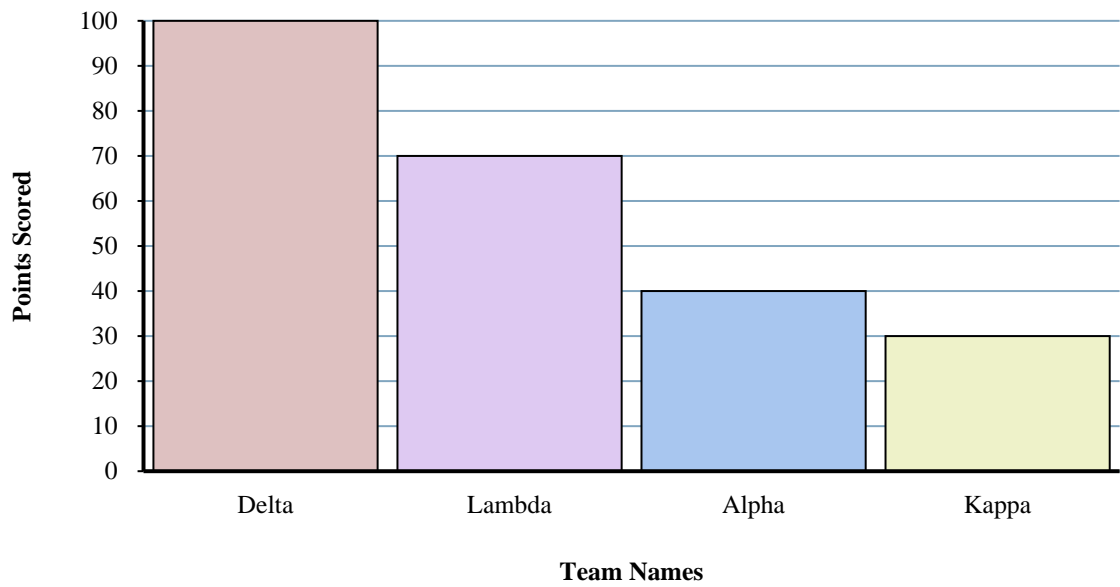
1. **20**
2. **140**
3. **190**
4. **lemon**
5. **lemon**
6. **cherry**
7. **strawberry**
8. **30**
9. **50**
10. **70**



Solve each problem.

Answers

Trivia Game Results

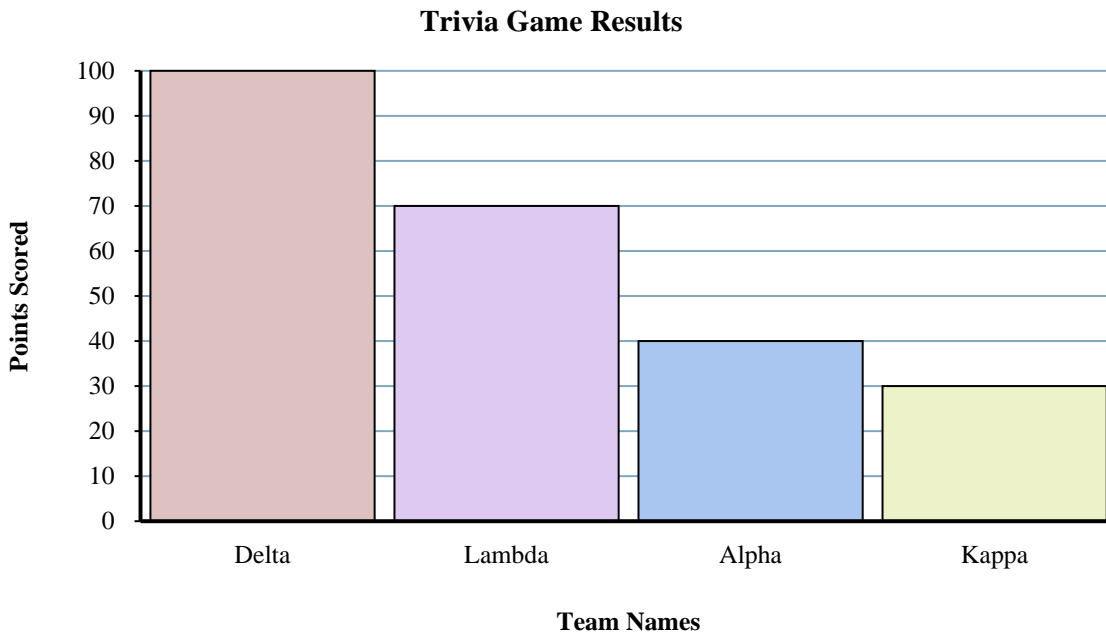


- 1) Which team scored the most points?
- 2) Which team scored the fewest points?
- 3) Did team Lambda or team Alpha score fewer points?
- 4) What is the total number of points earned in the game?
- 5) Did team Kappa or team Lambda score more points?
- 6) How many points did team Delta score?
- 7) What is the combined points scored by Kappa and Alpha?
- 8) How many fewer points did team Kappa score than team Delta?
- 9) Which team scored 30 points?
- 10) What is the difference in the number of points Delta scored and the number Alpha scored?

1. _____
2. _____
3. _____
4. _____
5. _____
6. _____
7. _____
8. _____
9. _____
10. _____



Solve each problem.



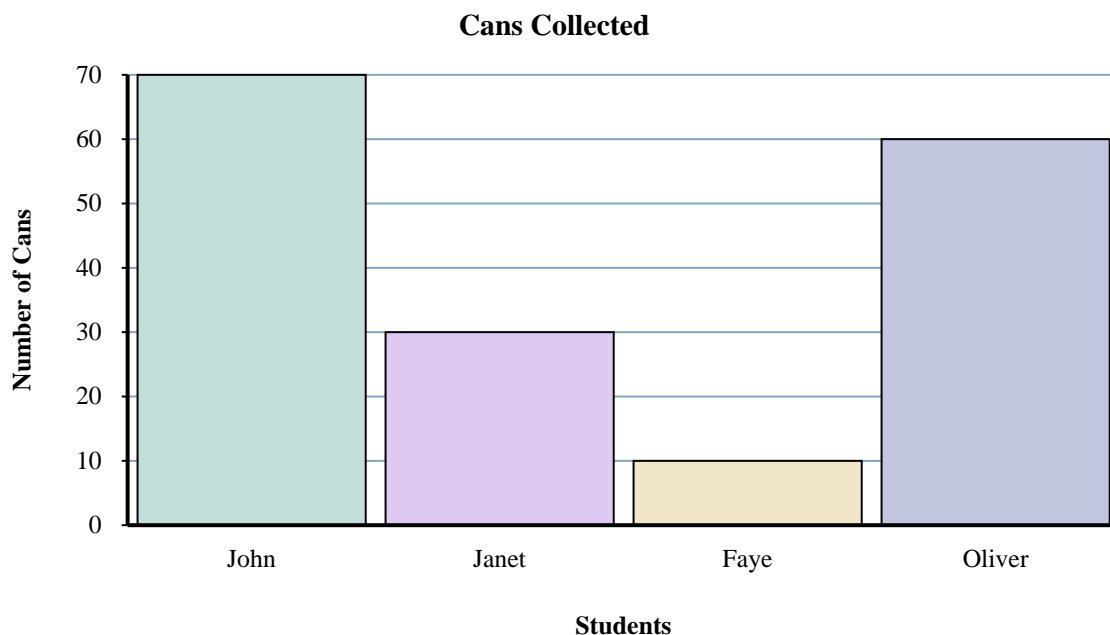
- 1) Which team scored the most points?
- 2) Which team scored the fewest points?
- 3) Did team Lambda or team Alpha score fewer points?
- 4) What is the total number of points earned in the game?
- 5) Did team Kappa or team Lambda score more points?
- 6) How many points did team Delta score?
- 7) What is the combined points scored by Kappa and Alpha?
- 8) How many fewer points did team Kappa score than team Delta?
- 9) Which team scored 30 points?
- 10) What is the difference in the number of points Delta scored and the number Alpha scored?

Answers

1. **Delta**
2. **Kappa**
3. **Alpha**
4. **240**
5. **Lambda**
6. **100**
7. **70**
8. **70**
9. **Kappa**
10. **60**



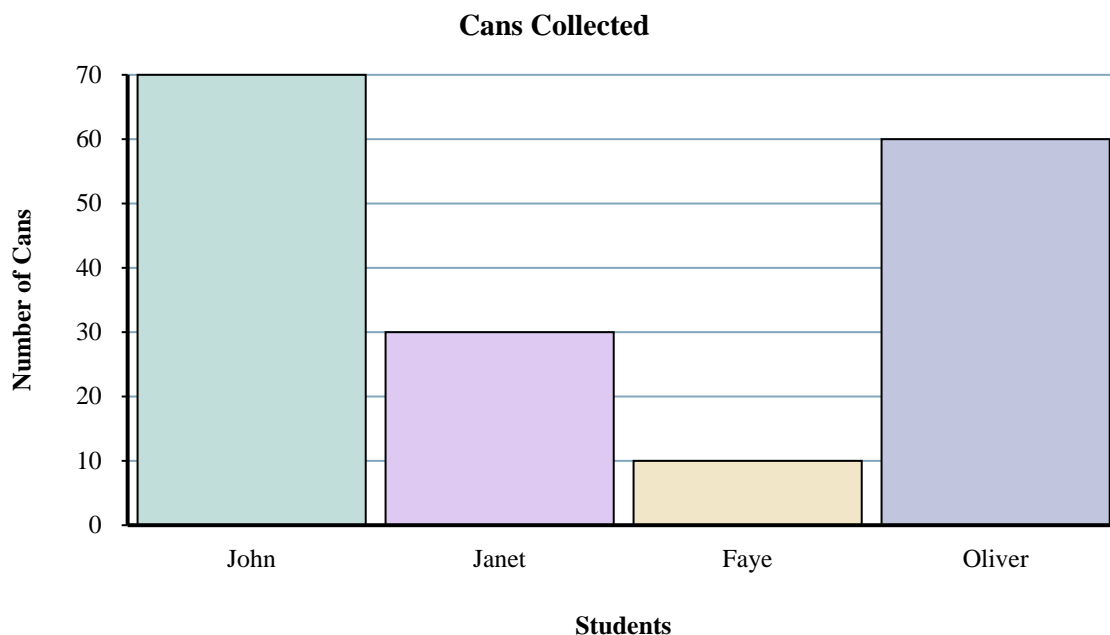
Solve each problem.

**Answers**

1. _____
 2. _____
 3. _____
 4. _____
 5. _____
 6. _____
 7. _____
 8. _____
 9. _____
 10. _____
- 1) Who collected the most cans?
 - 2) What is the combined number of cans John collected and Janet collected?
 - 3) Who collected exactly 10 cans?
 - 4) How many fewer cans did Janet collect than Oliver?
 - 5) How many more cans did John collect than Faye?
 - 6) How many cans did Janet collect?
 - 7) Who collected the fewest cans?
 - 8) What is the difference in the number of cans John collected and the number Oliver collected?
 - 9) How many cans total did all the students collect?
 - 10) Who collected fewer cans? Janet or Faye?



Solve each problem.

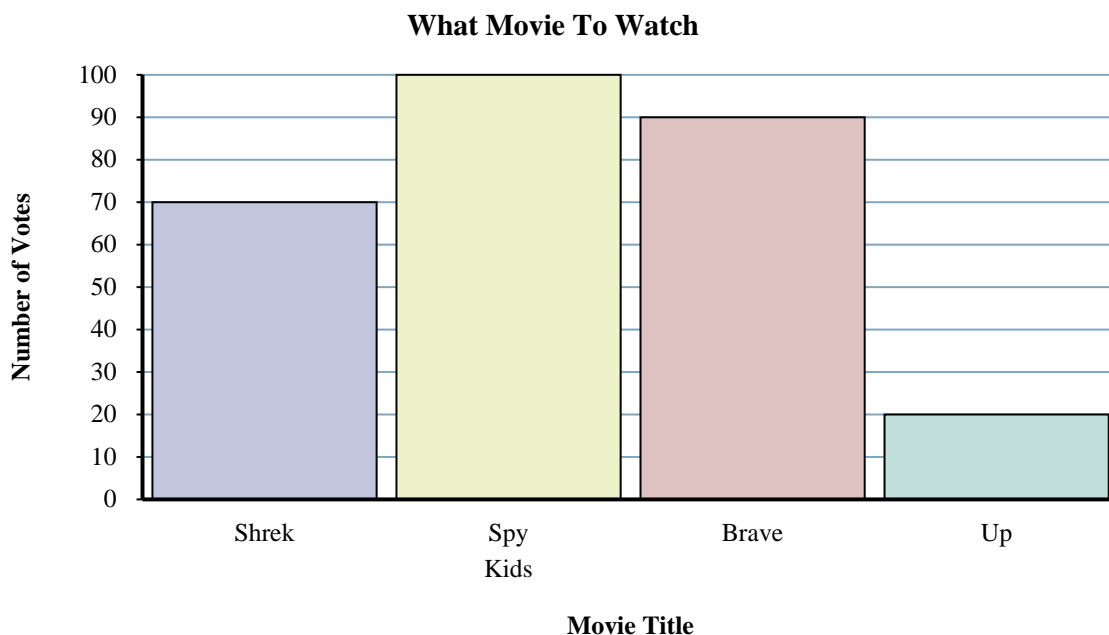
**Answers**

- 1) Who collected the most cans?
- 2) What is the combined number of cans John collected and Janet collected?
- 3) Who collected exactly 10 cans?
- 4) How many fewer cans did Janet collect than Oliver?
- 5) How many more cans did John collect than Faye?
- 6) How many cans did Janet collect?
- 7) Who collected the fewest cans?
- 8) What is the difference in the number of cans John collected and the number Oliver collected?
- 9) How many cans total did all the students collect?
- 10) Who collected fewer cans? Janet or Faye?

1. **John**
2. **100**
3. **Faye**
4. **30**
5. **60**
6. **30**
7. **Faye**
8. **10**
9. **170**
10. **Faye**



Solve each problem.

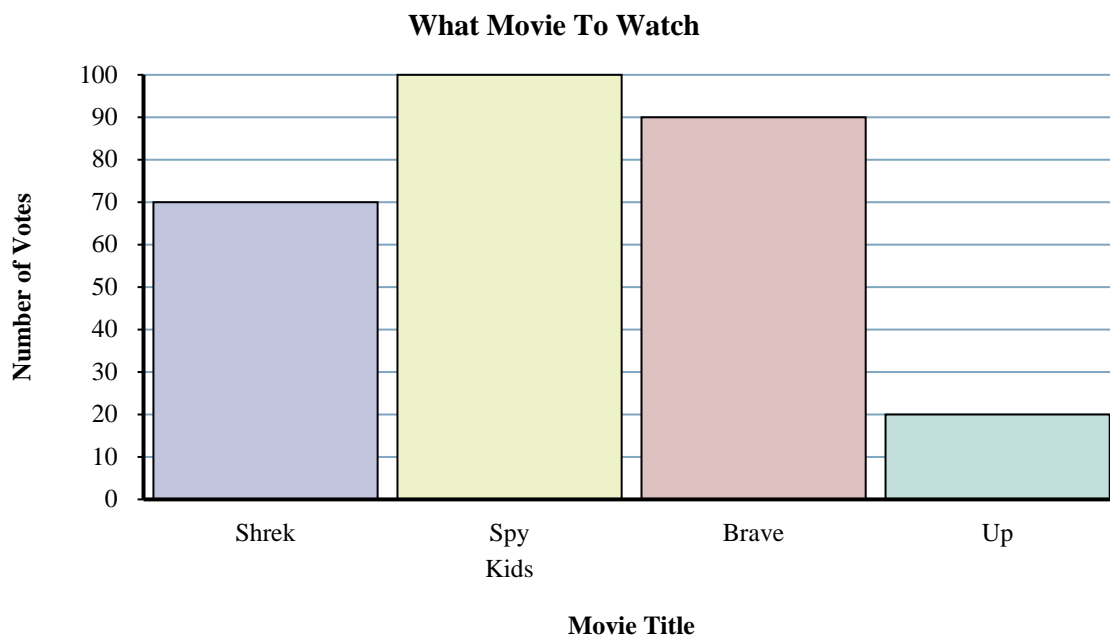
Answers

- 1) How many people voted for Shrek?
- 2) Which movie received the most votes?
- 3) Which movie received the fewest votes?
- 4) How many fewer votes did Up receive than Spy Kids?
- 5) Which movie received exactly 20 votes?
- 6) Did fewer students vote for Brave or for Spy Kids?
- 7) What is the difference in the number of people who voted for Brave and the number who voted for Shrek?
- 8) What is the total number of students who voted?
- 9) How many more votes did Spy Kids receive than Shrek?
- 10) What is the combined number of people who voted for Up and Shrek?

1. _____
2. _____
3. _____
4. _____
5. _____
6. _____
7. _____
8. _____
9. _____
10. _____



Solve each problem.



- 1) How many people voted for Shrek?
- 2) Which movie received the most votes?
- 3) Which movie received the fewest votes?
- 4) How many fewer votes did Up receive than Spy Kids?
- 5) Which movie received exactly 20 votes?
- 6) Did fewer students vote for Brave or for Spy Kids?
- 7) What is the difference in the number of people who voted for Brave and the number who voted for Shrek?
- 8) What is the total number of students who voted?
- 9) How many more votes did Spy Kids receive than Shrek?
- 10) What is the combined number of people who voted for Up and Shrek?

Answers

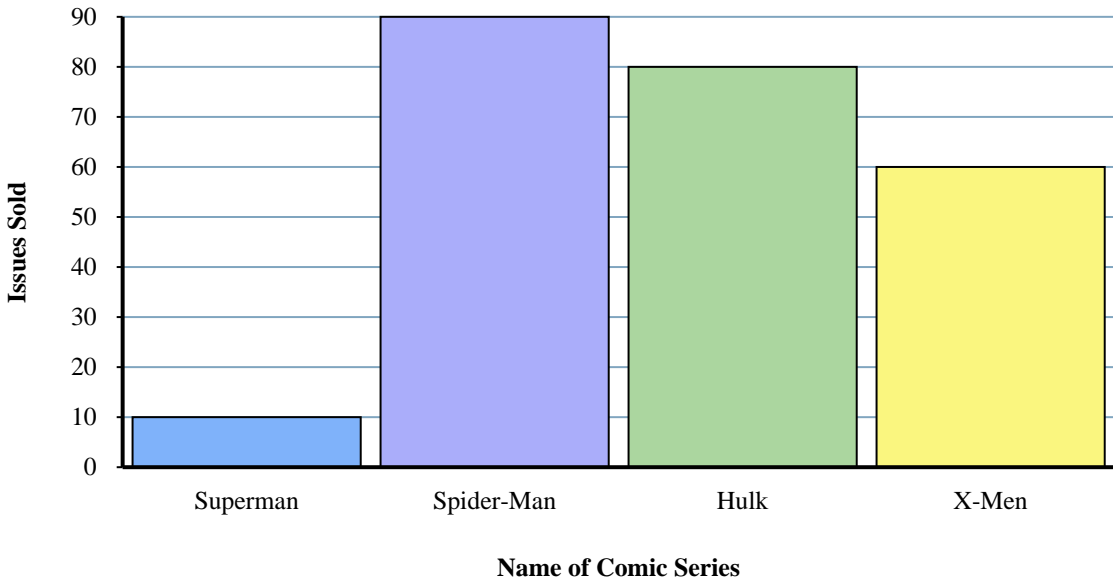
1. **70**
2. **Spy Kids**
3. **Up**
4. **80**
5. **Up**
6. **Brave**
7. **20**
8. **280**
9. **30**
10. **90**



Solve each problem.

Answers

Comic Books Sold

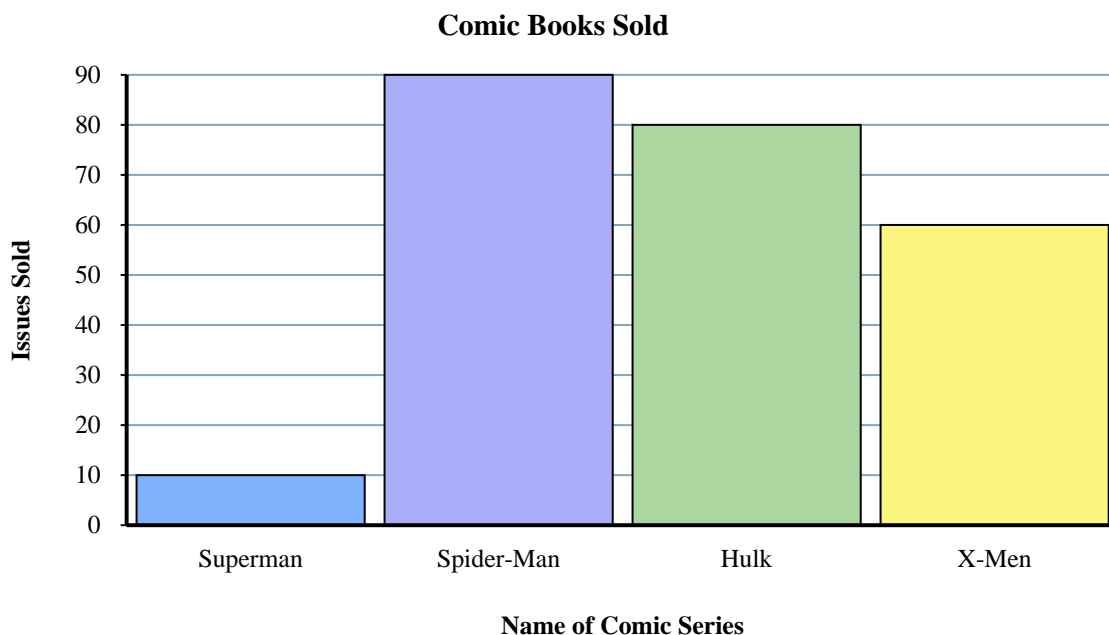


- 1) What is the difference in the number of Spider-Man issues sold and the number of Superman issues sold?
- 2) How many issues of Superman were sold?
- 3) Which comic series sold exactly 60 issues?
- 4) Which comic series sold more, Hulk or X-Men?
- 5) What is the total number of issues sold for all the comics?
- 6) How many more issues of Spider-Man were sold than issues of Hulk?
- 7) How many fewer issues of Superman were sold than issues of X-Men?
- 8) What is the combined number of Superman and Hulk issues sold?
- 9) Which comic series sold the fewest issues?
- 10) Which comic series sold the most issues?

1. _____
2. _____
3. _____
4. _____
5. _____
6. _____
7. _____
8. _____
9. _____
10. _____



Solve each problem.



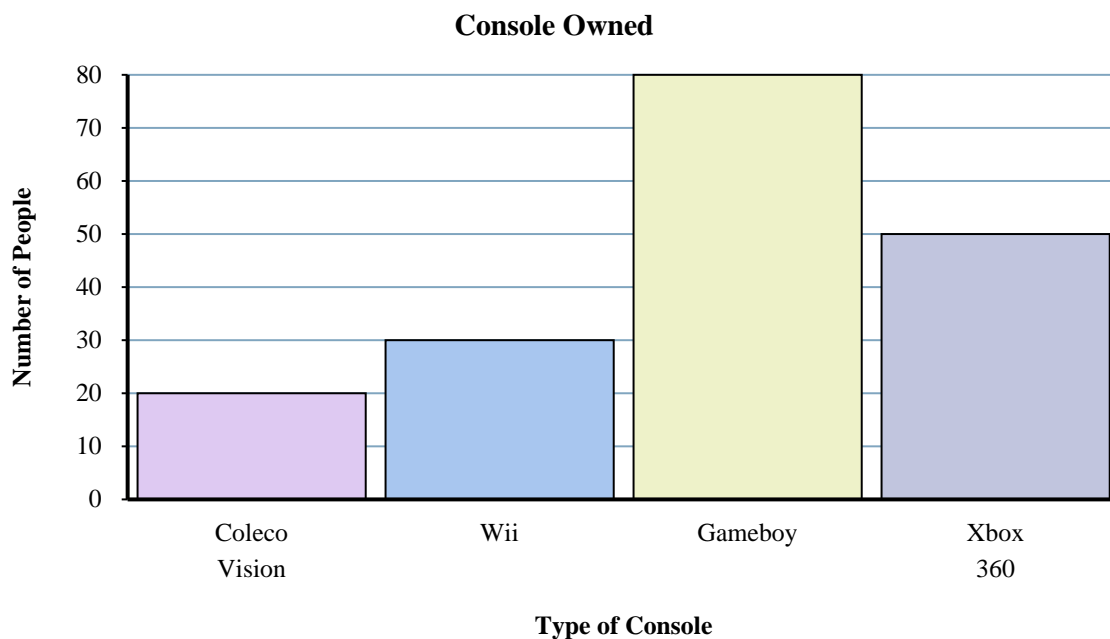
- 1) What is the difference in the number of Spider-Man issues sold and the number of Superman issues sold?
- 2) How many issues of Superman were sold?
- 3) Which comic series sold exactly 60 issues?
- 4) Which comic series sold more, Hulk or X-Men?
- 5) What is the total number of issues sold for all the comics?
- 6) How many more issues of Spider-Man were sold than issues of Hulk?
- 7) How many fewer issues of Superman were sold than issues of X-Men?
- 8) What is the combined number of Superman and Hulk issues sold?
- 9) Which comic series sold the fewest issues?
- 10) Which comic series sold the most issues?

Answers

1. **80**
2. **10**
3. **X-Men**
4. **Hulk**
5. **240**
6. **10**
7. **50**
8. **90**
9. **Superman**
10. **Spider-Man**



Solve each problem.

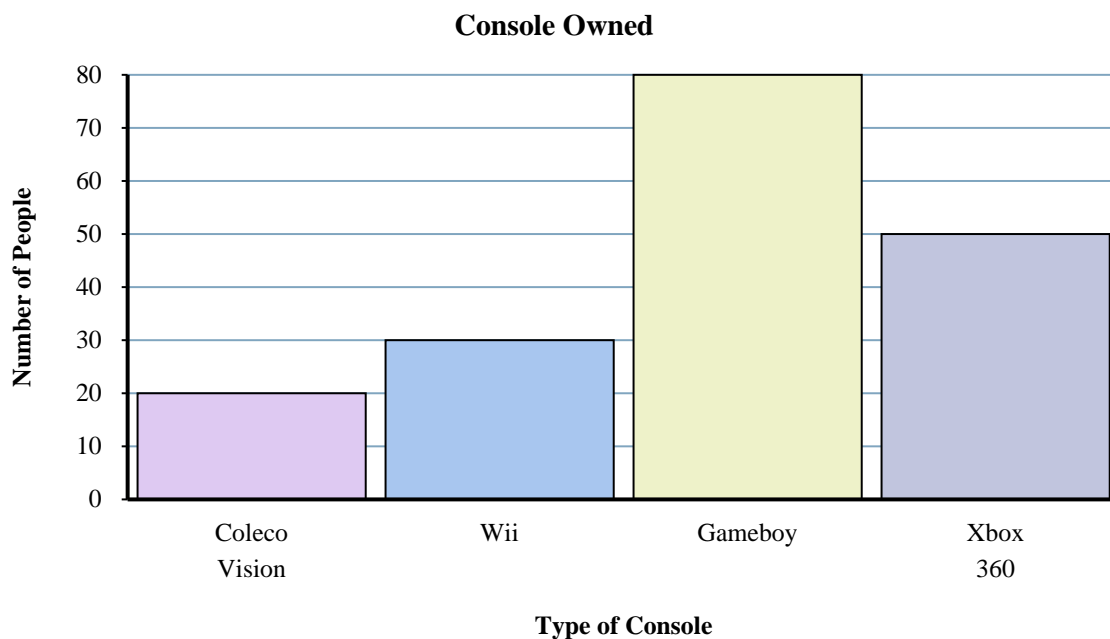
**Answers**

- 1) What is the combined number of Xbox 360s and Gameboys owned?
- 2) Which console did exactly 30 people own?
- 3) How many more people owned a Gameboy than owned a Coleco Vision?
- 4) What is the difference in the number of people who owned a Xbox 360 and the number who owned a Wii?
- 5) Which console did the fewest number of people own?
- 6) How many fewer people owned a Coleco Vision than owned a Wii?
- 7) How many people owned a Xbox 360?
- 8) How many consoles total did the people own?
- 9) Did fewer people own a Xbox 360 or a Coleco Vision?
- 10) Did more people own a Gameboys or a Wiis?

1. _____
2. _____
3. _____
4. _____
5. _____
6. _____
7. _____
8. _____
9. _____
10. _____



Solve each problem.

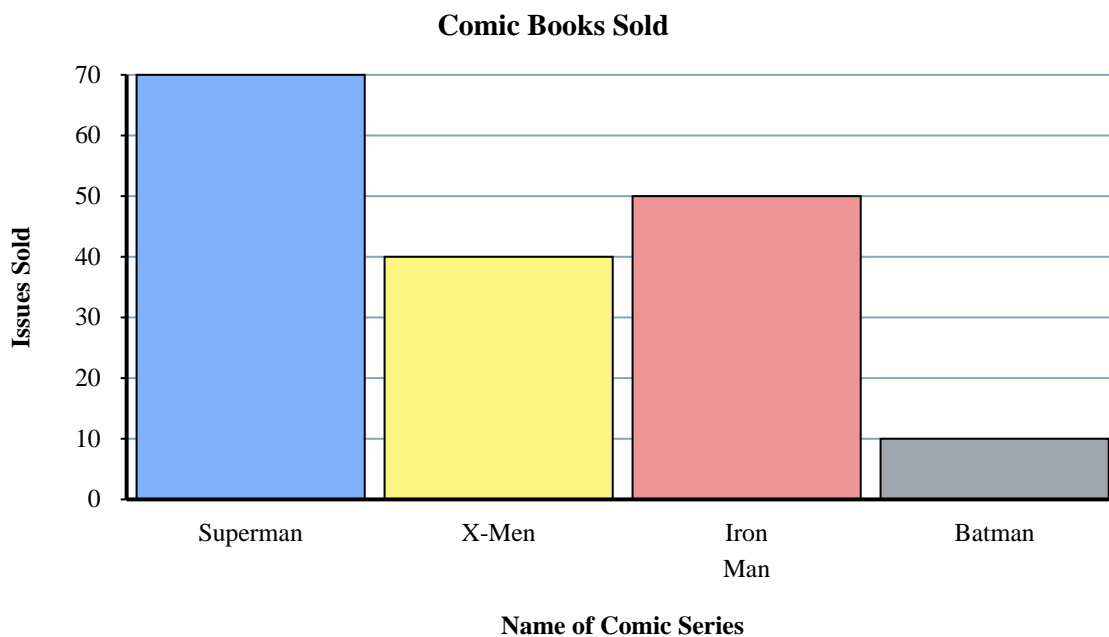
**Answers**

- 1) What is the combined number of Xbox 360s and Gameboys owned?
- 2) Which console did exactly 30 people own?
- 3) How many more people owned a Gameboy than owned a Coleco Vision?
- 4) What is the difference in the number of people who owned a Xbox 360 and the number who owned a Wii?
- 5) Which console did the fewest number of people own?
- 6) How many fewer people owned a Coleco Vision than owned a Wii?
- 7) How many people owned a Xbox 360?
- 8) How many consoles total did the people own?
- 9) Did fewer people own a Xbox 360 or a Coleco Vision?
- 10) Did more people own a Gameboys or a Wiis?

1. **130**
2. **Wii**
3. **60**
4. **20**
5. **Coleco Vision**
6. **10**
7. **50**
8. **180**
9. **Coleco Vision**
10. **Gameboy**



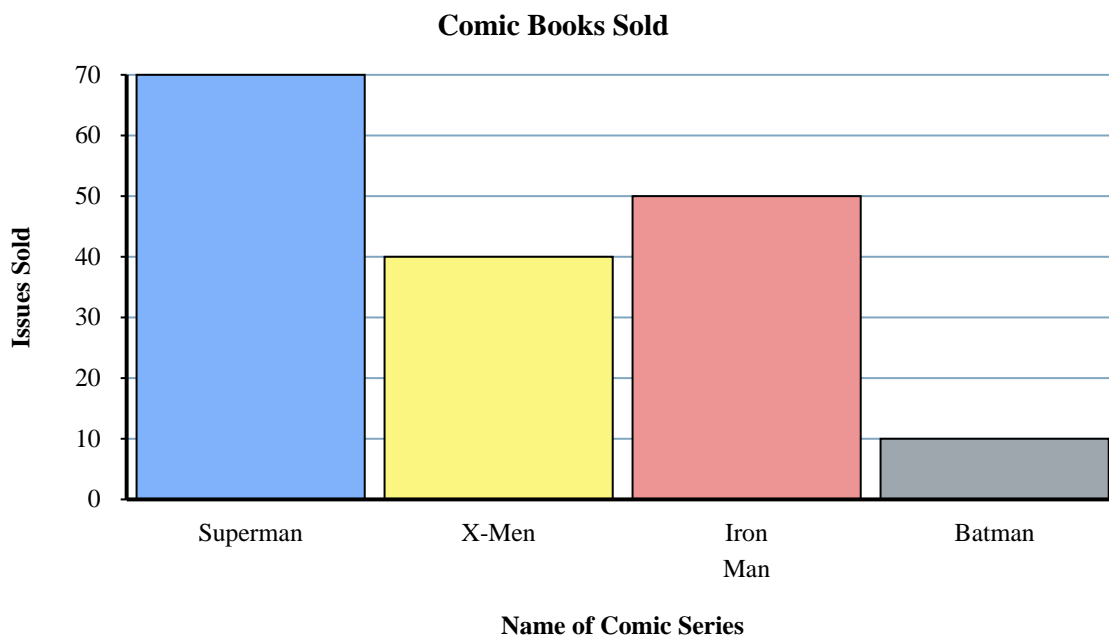
Solve each problem.

**Answers**

1. _____
 2. _____
 3. _____
 4. _____
 5. _____
 6. _____
 7. _____
 8. _____
 9. _____
 10. _____
- 1) How many fewer issues of Batman were sold than issues of Superman?
 - 2) How many more issues of Iron Man were sold than issues of X-Men?
 - 3) Which comic series sold the most issues?
 - 4) Which comic series sold more, X-Men or Superman?
 - 5) What is the difference in the number of Batman issues sold and the number of Iron Man issues sold?
 - 6) What is the combined number of X-Men and Batman issues sold?
 - 7) Which sold fewer, issues of Iron Man or issues of Superman?
 - 8) What is the total number of issues sold for all the comics?
 - 9) How many issues of Iron Man were sold?
 - 10) Which comic series sold exactly 10 issues?



Solve each problem.



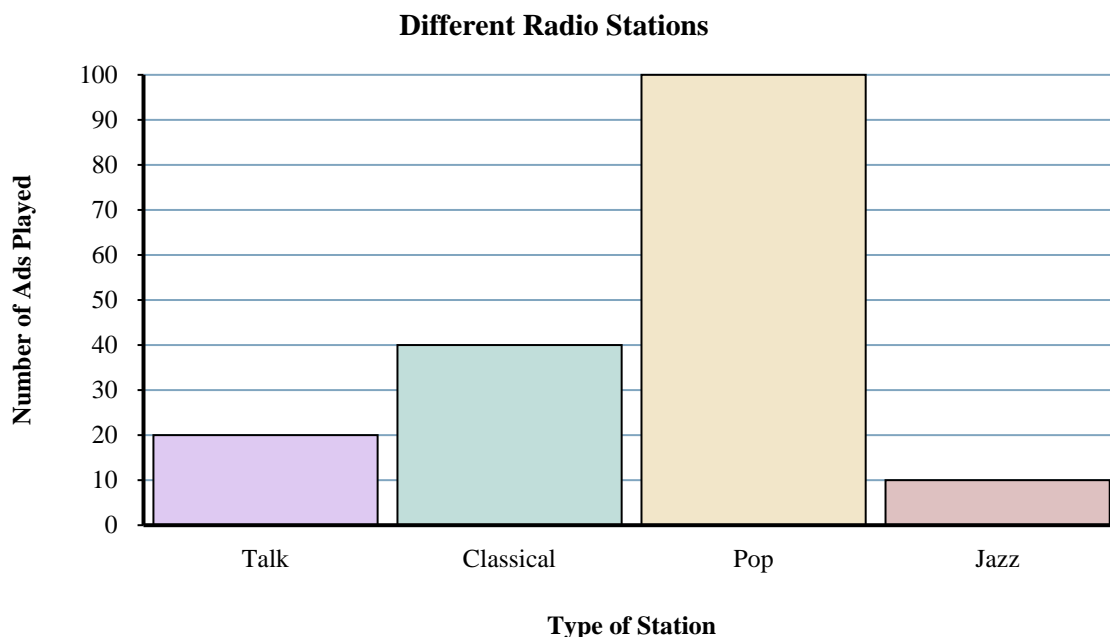
- 1) How many fewer issues of Batman were sold than issues of Superman?
- 2) How many more issues of Iron Man were sold than issues of X-Men?
- 3) Which comic series sold the most issues?
- 4) Which comic series sold more, X-Men or Superman?
- 5) What is the difference in the number of Batman issues sold and the number of Iron Man issues sold?
- 6) What is the combined number of X-Men and Batman issues sold?
- 7) Which sold fewer, issues of Iron Man or issues of Superman?
- 8) What is the total number of issues sold for all the comics?
- 9) How many issues of Iron Man were sold?
- 10) Which comic series sold exactly 10 issues?

Answers

1. **60**
2. **10**
3. **Superman**
4. **Superman**
5. **40**
6. **50**
7. **Iron Man**
8. **170**
9. **50**
10. **Batman**



Solve each problem.

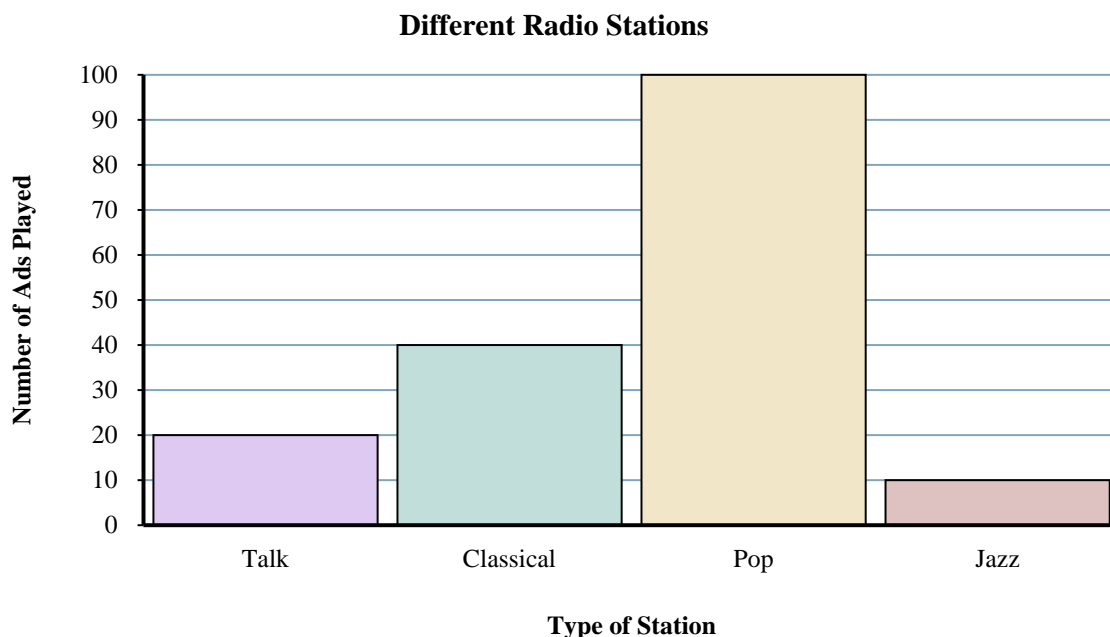
Answers

- 1) How many more ads did the classical station have than the talk station?
- 2) How many fewer ads did the jazz station have than the talk station?
- 3) What is the total number of ads on all the stations?
- 4) What is the combined number of ads played on the jazz station and the classical station?
- 5) Which station had the most ads?
- 6) How many ads were on the pop station?
- 7) Were there more ads on the pop station or the classical station?
- 8) Which station had exactly 10 ads?
- 9) Were there fewer ads on the pop station or the talk station?
- 10) Which station had the fewest ads?

1. _____
2. _____
3. _____
4. _____
5. _____
6. _____
7. _____
8. _____
9. _____
10. _____



Solve each problem.

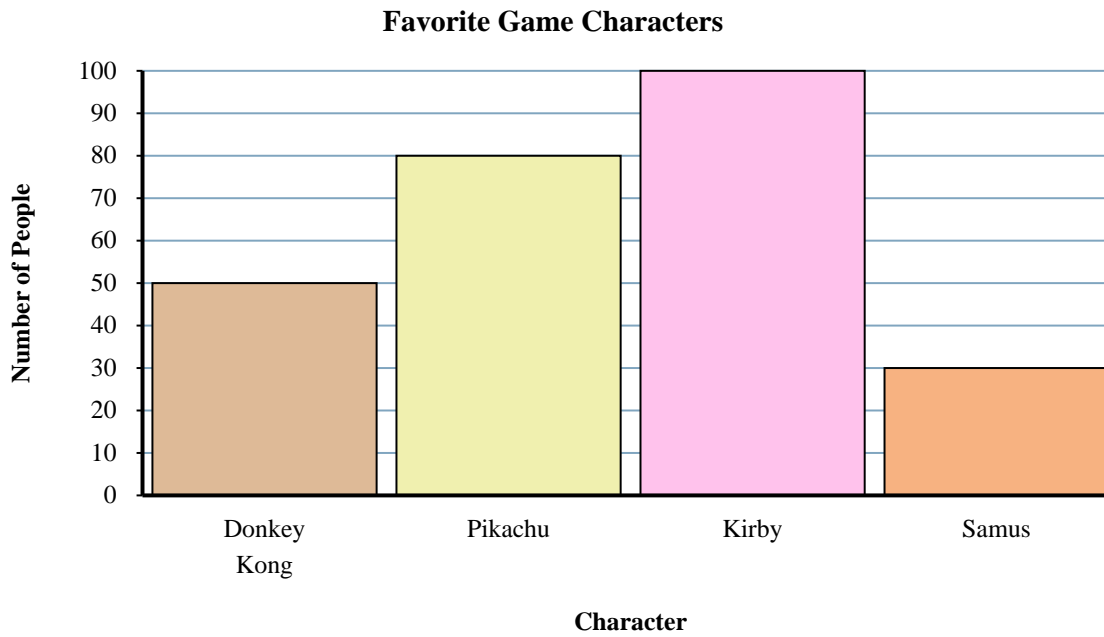
**Answers**

- 1) How many more ads did the classical station have than the talk station?
- 2) How many fewer ads did the jazz station have than the talk station?
- 3) What is the total number of ads on all the stations?
- 4) What is the combined number of ads played on the jazz station and the classical station?
- 5) Which station had the most ads?
- 6) How many ads were on the pop station?
- 7) Were there more ads on the pop station or the classical station?
- 8) Which station had exactly 10 ads?
- 9) Were there fewer ads on the pop station or the talk station?
- 10) Which station had the fewest ads?

1. **20**
2. **10**
3. **170**
4. **50**
5. **pop**
6. **100**
7. **pop**
8. **jazz**
9. **talk**
10. **jazz**



Solve each problem.

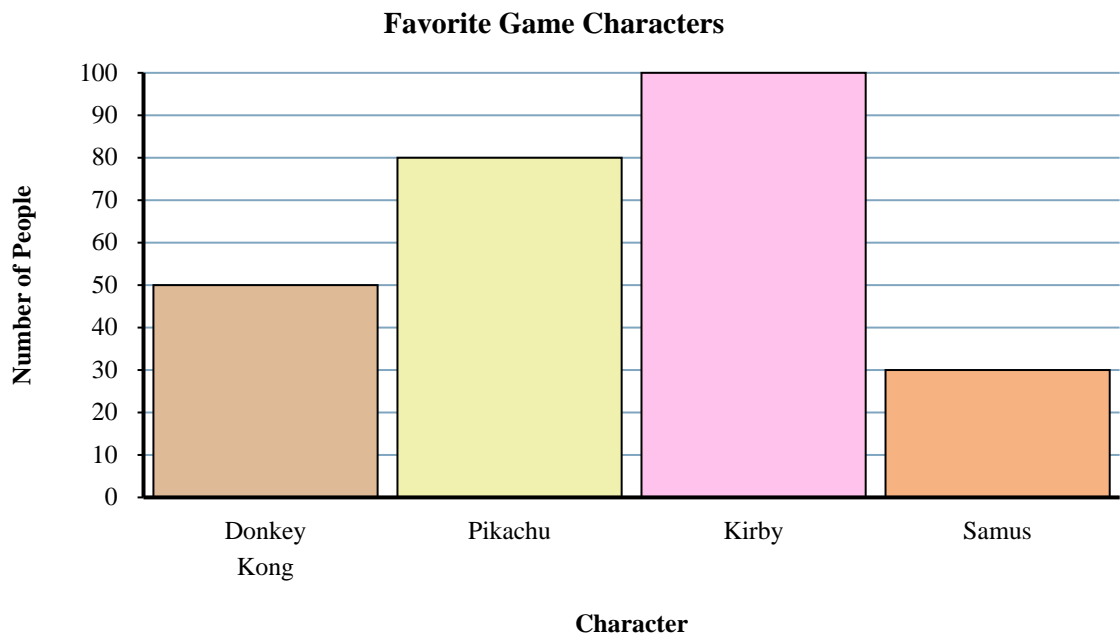
Answers

- 1) Which character did the fewest number of people say was their favorite?
- 2) Did more people like Kirby or Samus?
- 3) How many people liked Pikachu the best?
- 4) How many people total answered the poll?
- 5) Did fewer people like Samus or Pikachu?
- 6) How many fewer people liked Samus than liked Donkey Kong?
- 7) Which character did the largest number of people say was their favorite?
- 8) How many more people liked Pikachu than liked Donkey Kong?
- 9) What is the difference in the number of people who liked Donkey Kong and the number who liked Kirby?
- 10) Which character did exactly 100 people say was their favorite?

1. _____
2. _____
3. _____
4. _____
5. _____
6. _____
7. _____
8. _____
9. _____
10. _____



Solve each problem.



Answers

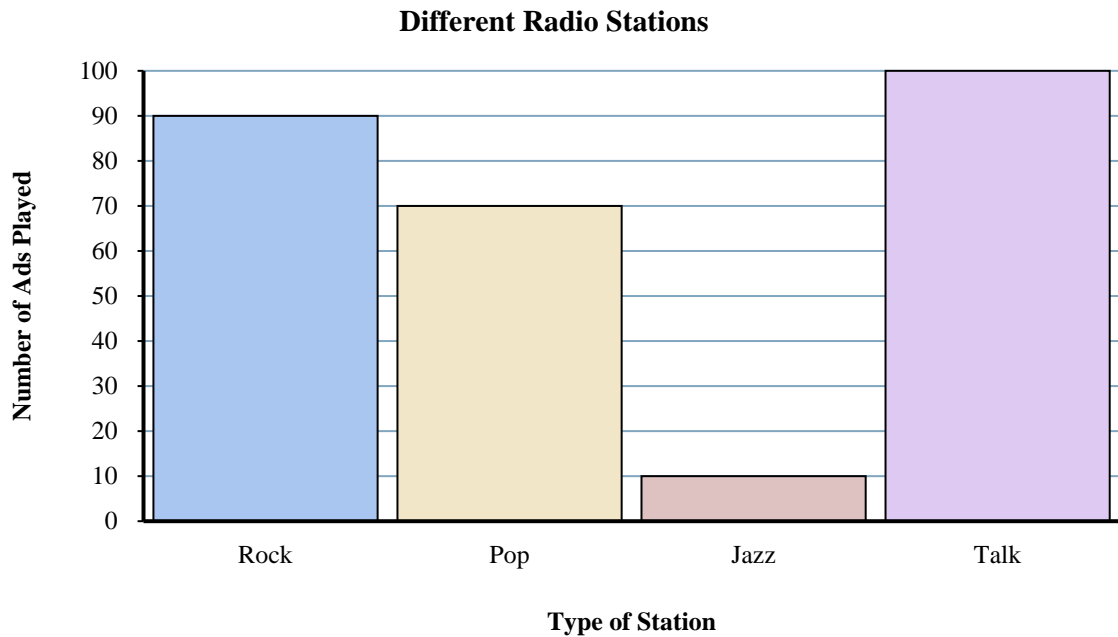
- 1) Which character did the fewest number of people say was their favorite?
- 2) Did more people like Kirby or Samus?
- 3) How many people liked Pikachu the best?
- 4) How many people total answered the poll?
- 5) Did fewer people like Samus or Pikachu?
- 6) How many fewer people liked Samus than liked Donkey Kong?
- 7) Which character did the largest number of people say was their favorite?
- 8) How many more people liked Pikachu than liked Donkey Kong?
- 9) What is the difference in the number of people who liked Donkey Kong and the number who liked Kirby?
- 10) Which character did exactly 100 people say was their favorite?

1. **Samus**
2. **Kirby**
3. **80**
4. **260**
5. **Samus**
6. **20**
7. **Kirby**
8. **30**
9. **50**
10. **Kirby**



Solve each problem.

Answers

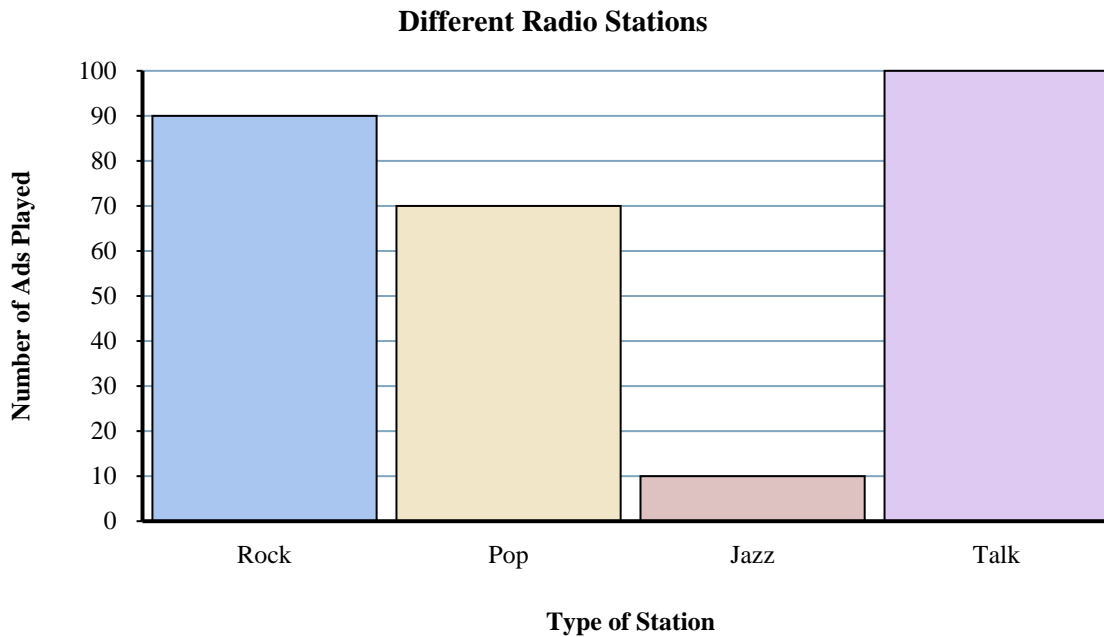


- 1) Were there more ads on the jazz station or the talk station?
- 2) What is the combined number of ads played on the pop station and the jazz station?
- 3) How many fewer ads did the pop station have than the talk station?
- 4) Which station had the most ads?
- 5) How many more ads did the rock station have than the pop station?
- 6) What is the difference in the number of ads played on the rock station and the number played on the talk station?
- 7) Were there fewer ads on the rock station or the jazz station?
- 8) How many ads were on the jazz station?
- 9) Which station had the fewest ads?
- 10) What is the total number of ads on all the stations?

1. _____
2. _____
3. _____
4. _____
5. _____
6. _____
7. _____
8. _____
9. _____
10. _____



Solve each problem.

**Answers**

- 1) Were there more ads on the jazz station or the talk station?
- 2) What is the combined number of ads played on the pop station and the jazz station?
- 3) How many fewer ads did the pop station have than the talk station?
- 4) Which station had the most ads?
- 5) How many more ads did the rock station have than the pop station?
- 6) What is the difference in the number of ads played on the rock station and the number played on the talk station?
- 7) Were there fewer ads on the rock station or the jazz station?
- 8) How many ads were on the jazz station?
- 9) Which station had the fewest ads?
- 10) What is the total number of ads on all the stations?

1. **talk**
2. **80**
3. **30**
4. **talk**
5. **20**
6. **10**
7. **jazz**
8. **10**
9. **jazz**
10. **270**