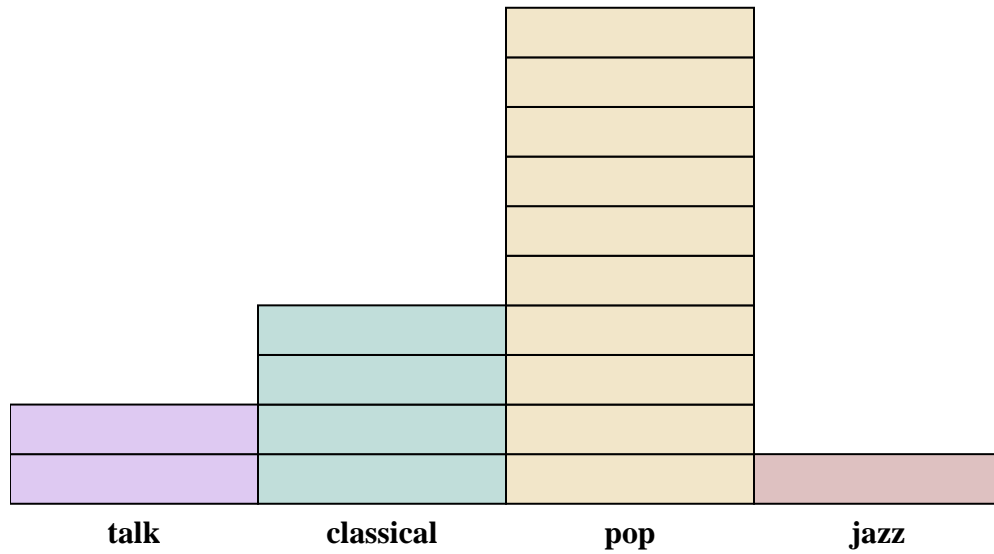
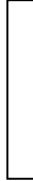




Solve each problem.

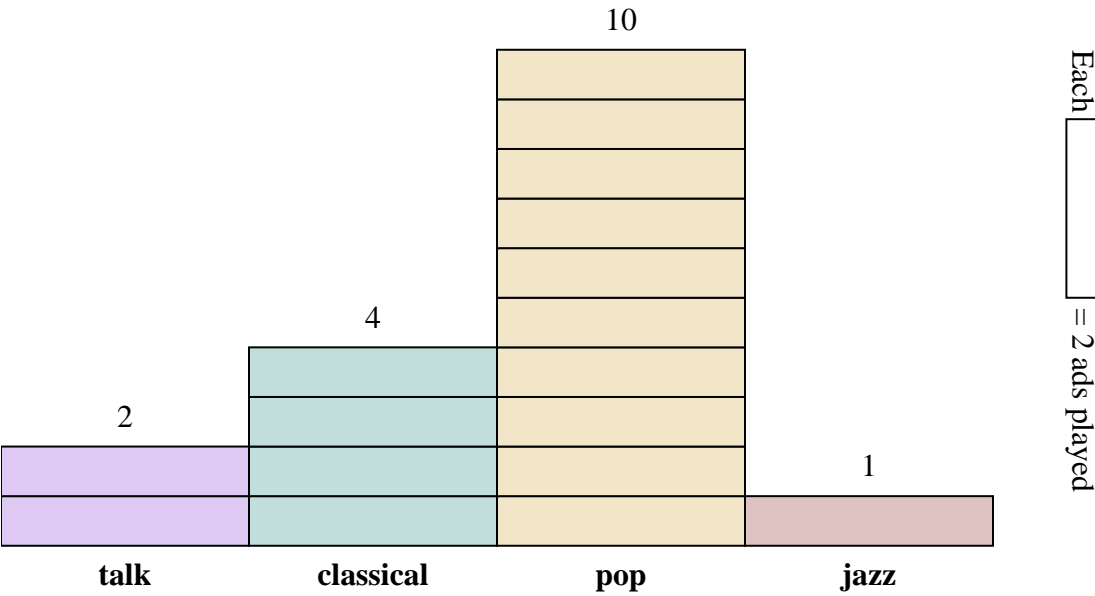
Each  = 2 ads played**Answers**

1. \_\_\_\_\_
2. \_\_\_\_\_
3. \_\_\_\_\_
4. \_\_\_\_\_
5. \_\_\_\_\_
6. \_\_\_\_\_
7. \_\_\_\_\_
8. \_\_\_\_\_
9. \_\_\_\_\_
10. \_\_\_\_\_

- 1) How many more ads did the classical station have than the talk station?
- 2) Which station had the most ads?
- 3) Which station had the fewest ads?
- 4) What is the total number of ads on all the stations?
- 5) Were there fewer ads on the jazz station or the talk station?
- 6) Were there more ads on the pop station or the talk station?
- 7) Which station had exactly 8 ads?
- 8) How many ads were on the pop station?
- 9) What is the combined number of ads played on the jazz station and the pop station?
- 10) What is the difference in the number of ads played on the jazz station and the number played on the classical station?



Solve each problem.



- 1) How many more ads did the classical station have than the talk station?
- 2) Which station had the most ads?
- 3) Which station had the fewest ads?
- 4) What is the total number of ads on all the stations?
- 5) Were there fewer ads on the jazz station or the talk station?
- 6) Were there more ads on the pop station or the talk station?
- 7) Which station had exactly 8 ads?
- 8) How many ads were on the pop station?
- 9) What is the combined number of ads played on the jazz station and the pop station?
- 10) What is the difference in the number of ads played on the jazz station and the number played on the classical station?

Answers

- 1. **4**
- 2. **pop**
- 3. **jazz**
- 4. **34**
- 5. **jazz**
- 6. **pop**
- 7. **classical**
- 8. **20**
- 9. **22**
- 10. **6**