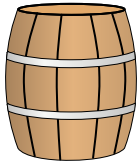


**Determine which letter best represents the volume.****Cup**

A cup is about the amount of milk you get from the cafeteria.

**Pint**A pint is about the amount you get in a large glass.  
1 pint = 2 cups**Quart**A quart is about the amount you get in a large milk container.  
1 quart = 2 pints**Gallon**A gallon is the amount that comes in the large plastic container.  
1 gallon = 4 quarts


1)



Water a barrel holds

- A. 20 cups
- B. 10 pints
- C. 3 inches
- D. 50 gallons


2)



Gas tank in a car

- A. 3 quarts
- B. 4 pints
- C. 15 gallons
- D. 16 cups

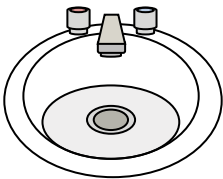
3)



Sand a wheel barrow holds

- A. 8 quarts
- B. 45 gallons
- C. 1000 grams
- D. 4 cups

4)



Water in bathroom sink

- A. 2 fluid ounces
- B. 2 gallons
- C. 2 cups
- D. 2 pints

5)



Liquid in a thermos

- A. 1 cup
- B. 1 gallon
- C. 2 pounds
- D. 4 quarts


6)



Liquid a spoon holds

- A. 1 cup
- B. Less than a cup
- C. 1 pint
- D. 1 quart

7)



Liquid in a pitcher

- A. 1 pint
- B. 2 quarts
- C. 2 cups
- D. 8 gallons

8)



Ink in a pen

- A. 1 gallon
- B. 2 pints
- C. less than 1 cup
- D. 1 quart

9)



Soda in a can

- A. 4 cups
- B. 1.5 cups
- C. 4 pints
- D. 1 gallon

**Answers**

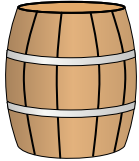
1. \_\_\_\_\_
2. \_\_\_\_\_
3. \_\_\_\_\_
4. \_\_\_\_\_
5. \_\_\_\_\_
6. \_\_\_\_\_
7. \_\_\_\_\_
8. \_\_\_\_\_
9. \_\_\_\_\_

**Determine which letter best represents the volume.****Cup**

A cup is about the amount of milk you get from the cafeteria.

**Pint**A pint is about the amount you get in a large glass.  
1 pint = 2 cups**Quart**A quart is about the amount you get in a large milk container.  
1 quart = 2 pints**Gallon**A gallon is the amount that comes in the large plastic container.  
1 gallon = 4 quarts


1)



Water a barrel holds

- A. 20 cups
- B. 10 pints
- C. 3 inches
- D. 50 gallons


2)



Gas tank in a car

- A. 3 quarts
- B. 4 pints
- C. 15 gallons
- D. 16 cups

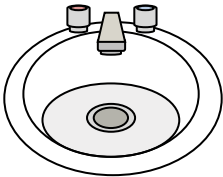
3)



Sand a wheel barrow holds

- A. 8 quarts
- B. 45 gallons
- C. 1000 grams
- D. 4 cups

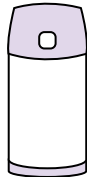
4)



Water in bathroom sink

- A. 2 fluid ounces
- B. 2 gallons
- C. 2 cups
- D. 2 pints

5)



Liquid in a thermos

- A. 1 cup
- B. 1 gallon
- C. 2 pounds
- D. 4 quarts


6)



Liquid a spoon holds

- A. 1 cup
- B. Less than a cup
- C. 1 pint
- D. 1 quart

7)



Liquid in a pitcher

- A. 1 pint
- B. 2 quarts
- C. 2 cups
- D. 8 gallons

8)



Ink in a pen

- A. 1 gallon
- B. 2 pints
- C. less than 1 cup
- D. 1 quart

9)



Soda in a can

- A. 4 cups
- B. 1.5 cups
- C. 4 pints
- D. 1 gallon

**Answers**

- 1. **D**
- 2. **C**
- 3. **B**
- 4. **B**
- 5. **A**
- 6. **B**
- 7. **B**
- 8. **C**
- 9. **B**