



Count the number of shapes shown.

## Answers



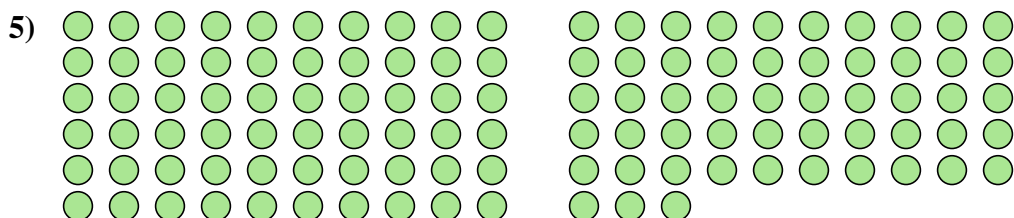
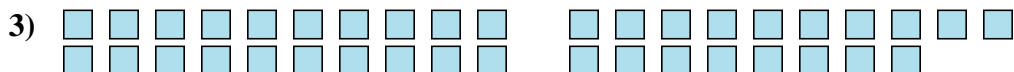
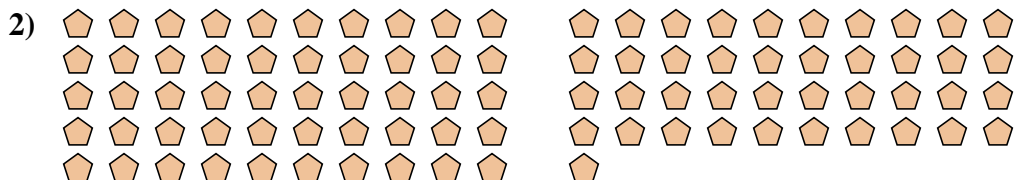
1. \_\_\_\_\_

2. \_\_\_\_\_

3. \_\_\_\_\_

4. \_\_\_\_\_

5. \_\_\_\_\_





Count the number of shapes shown.

Answers1. 512. 913. 384. 85. 113