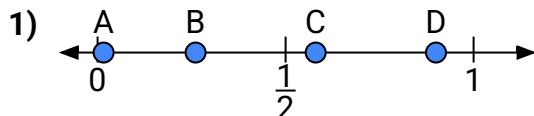
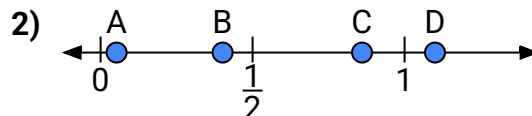




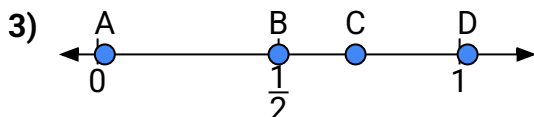
Use the number lines to answer the questions.

Answers

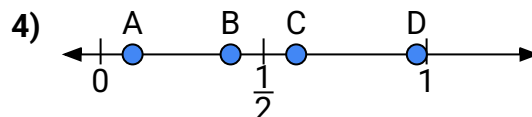
- a) Which letter best represents the location of 0.9?
- b) Which letter best represents the location of 0.58?



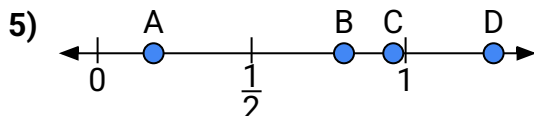
- a) Which letter best represents the location of 1.1?
- b) Which letter best represents the location of 0.86?



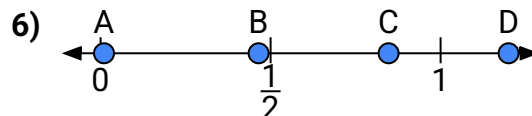
- a) Which letter best represents the location of 0.5?
- b) Which letter best represents the location of 0.02?



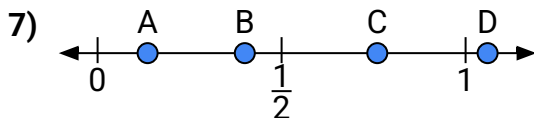
- a) Which letter best represents the location of 0.6?
- b) Which letter best represents the location of 0.97?



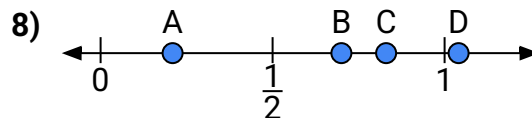
- a) Which letter best represents the location of 0.80?
- b) Which letter best represents the location of 0.96?



- a) Which letter best represents the location of 1.2?
- b) Which letter best represents the location of 0.01?



- a) Which letter best represents the location of 0.4?
- b) Which letter best represents the location of 0.76?



- a) Which letter best represents the location of 0.70?
- b) Which letter best represents the location of 0.83?

1. _____

2. _____

3. _____

4. _____

5. _____

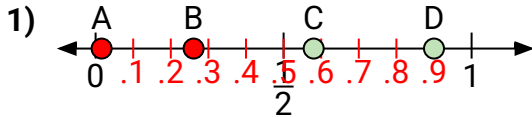
6. _____

7. _____

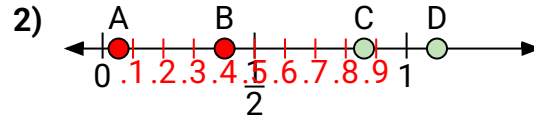
8. _____



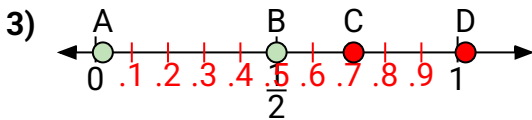
Use the number lines to answer the questions.

Answers

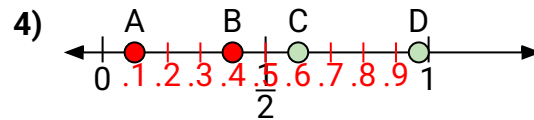
- a) Which letter best represents the location of 0.9?
b) Which letter best represents the location of 0.58?



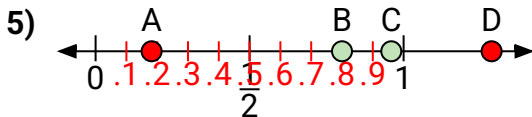
- a) Which letter best represents the location of 1.1?
b) Which letter best represents the location of 0.86?



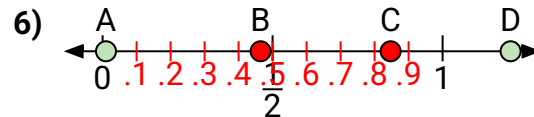
- a) Which letter best represents the location of 0.5?
b) Which letter best represents the location of 0.02?



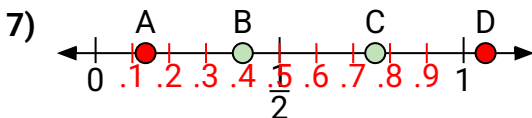
- a) Which letter best represents the location of 0.6?
b) Which letter best represents the location of 0.97?



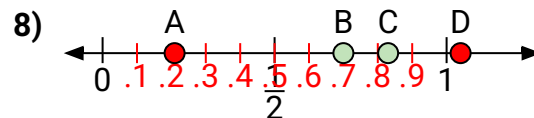
- a) Which letter best represents the location of 0.80?
b) Which letter best represents the location of 0.96?



- a) Which letter best represents the location of 1.2?
b) Which letter best represents the location of 0.01?



- a) Which letter best represents the location of 0.4?
b) Which letter best represents the location of 0.76?



- a) Which letter best represents the location of 0.70?
b) Which letter best represents the location of 0.83?

1. **D** **C**
2. **D** **C**
3. **B** **A**
4. **C** **D**
5. **B** **C**
6. **D** **A**
7. **B** **C**
8. **B** **C**