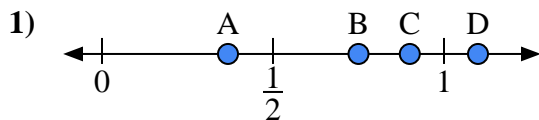
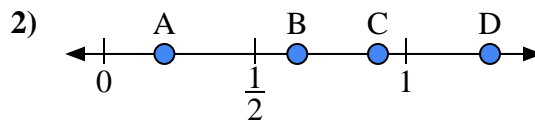




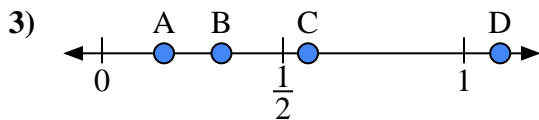
Use the number lines to answer the questions.

Answers

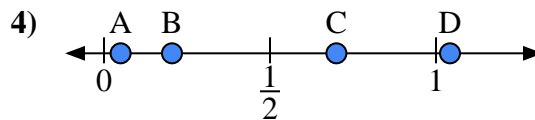
- a) Which letter best represents the location of 0.90?
- b) Which letter best represents the location of 0.75?



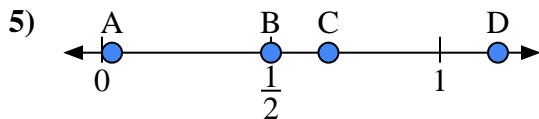
- a) Which letter best represents the location of 0.2?
- b) Which letter best represents the location of 0.64?



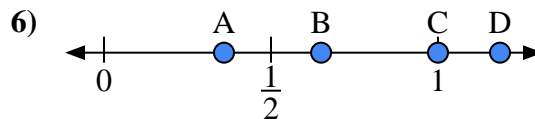
- a) Which letter best represents the location of 1.10?
- b) Which letter best represents the location of 0.33?



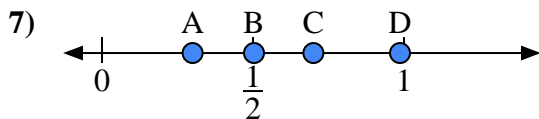
- a) Which letter best represents the location of 0.70?
- b) Which letter best represents the location of 0.05?



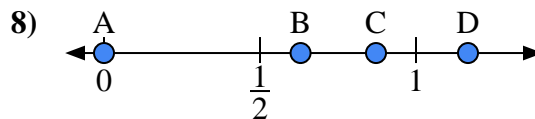
- a) Which letter best represents the location of 0.50?
- b) Which letter best represents the location of 0.67?



- a) Which letter best represents the location of 1.00?
- b) Which letter best represents the location of 0.65?



- a) Which letter best represents the location of 0.3?
- b) Which letter best represents the location of 0.70?

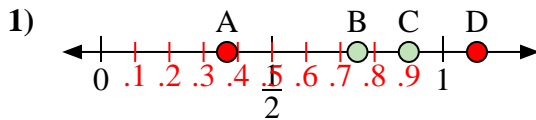


- a) Which letter best represents the location of 0.00?
- b) Which letter best represents the location of 0.63?

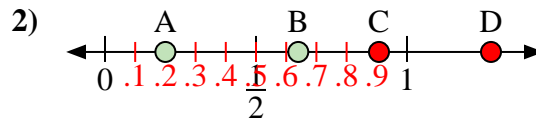
1. _____
2. _____
3. _____
4. _____
5. _____
6. _____
7. _____
8. _____



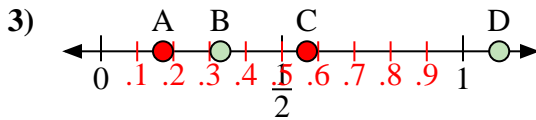
Use the number lines to answer the questions.

Answers

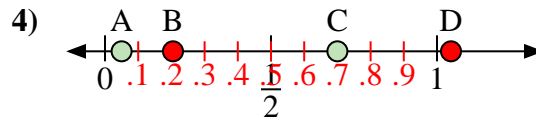
- a) Which letter best represents the location of 0.90?
- b) Which letter best represents the location of 0.75?



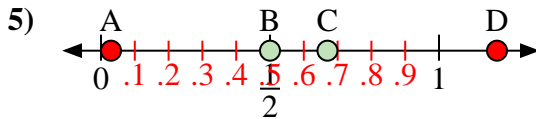
- a) Which letter best represents the location of 0.2?
- b) Which letter best represents the location of 0.64?



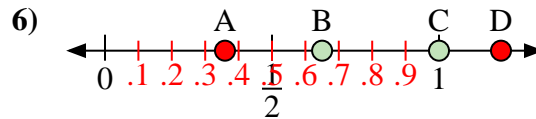
- a) Which letter best represents the location of 1.10?
- b) Which letter best represents the location of 0.33?



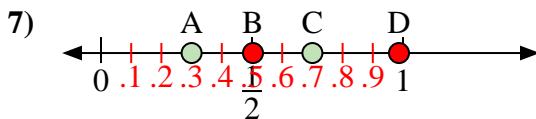
- a) Which letter best represents the location of 0.70?
- b) Which letter best represents the location of 0.05?



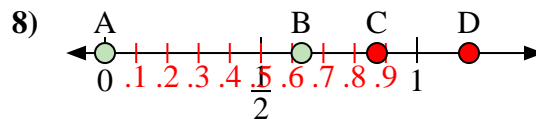
- a) Which letter best represents the location of 0.50?
- b) Which letter best represents the location of 0.67?



- a) Which letter best represents the location of 1.00?
- b) Which letter best represents the location of 0.65?



- a) Which letter best represents the location of 0.3?
- b) Which letter best represents the location of 0.70?



- a) Which letter best represents the location of 0.00?
- b) Which letter best represents the location of 0.63?

1. C B
2. A B
3. D B
4. C A
5. B C
6. C B
7. A C
8. A B