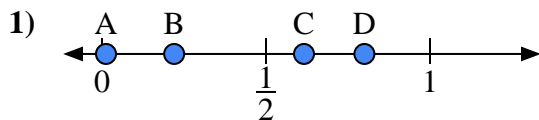
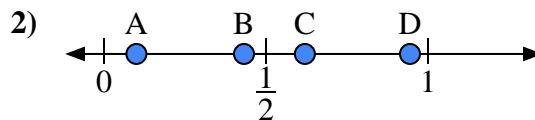




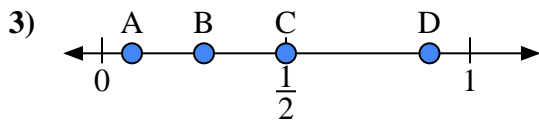
Use the number lines to answer the questions.

Answers

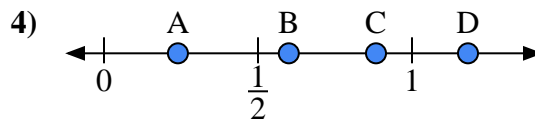
- a) Which letter best represents the location of 0.80?
- b) Which letter best represents the location of 0.22?



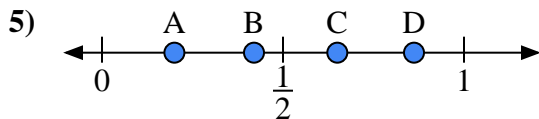
- a) Which letter best represents the location of 0.1?
- b) Which letter best represents the location of 0.62?



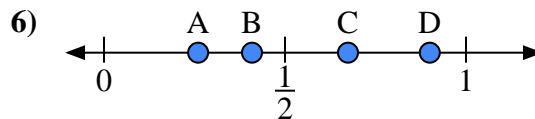
- a) Which letter best represents the location of 0.5?
- b) Which letter best represents the location of 0.89?



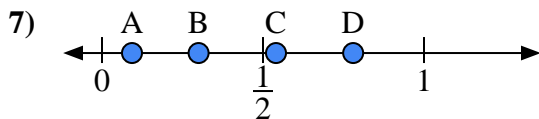
- a) Which letter best represents the location of 0.6?
- b) Which letter best represents the location of 0.24?



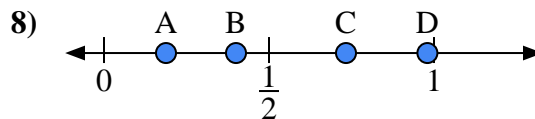
- a) Which letter best represents the location of 0.20?
- b) Which letter best represents the location of 0.65?



- a) Which letter best represents the location of 0.90?
- b) Which letter best represents the location of 0.26?



- a) Which letter best represents the location of 0.3?
- b) Which letter best represents the location of 0.78?

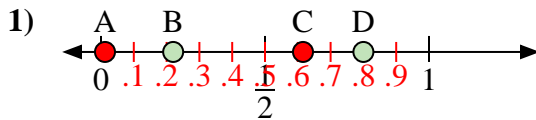


- a) Which letter best represents the location of 0.40?
- b) Which letter best represents the location of 0.98?

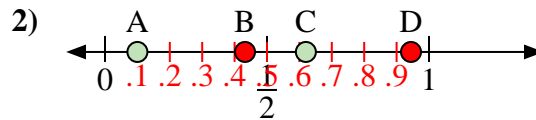
1. _____
2. _____
3. _____
4. _____
5. _____
6. _____
7. _____
8. _____



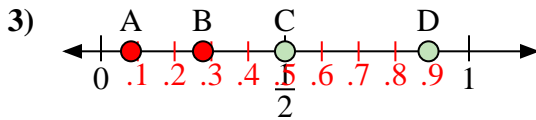
Use the number lines to answer the questions.

Answers

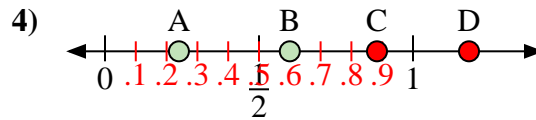
- a) Which letter best represents the location of 0.80?
- b) Which letter best represents the location of 0.22?



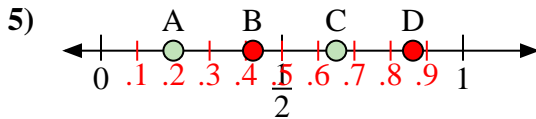
- a) Which letter best represents the location of 0.1?
- b) Which letter best represents the location of 0.62?



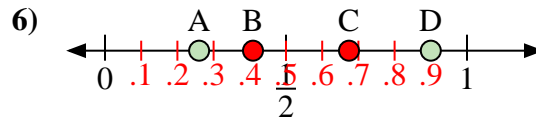
- a) Which letter best represents the location of 0.5?
- b) Which letter best represents the location of 0.89?



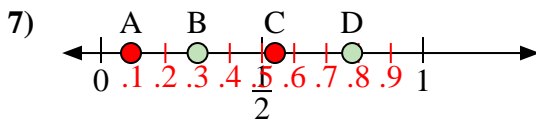
- a) Which letter best represents the location of 0.6?
- b) Which letter best represents the location of 0.24?



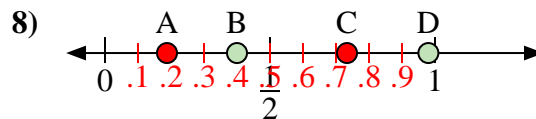
- a) Which letter best represents the location of 0.20?
- b) Which letter best represents the location of 0.65?



- a) Which letter best represents the location of 0.90?
- b) Which letter best represents the location of 0.26?



- a) Which letter best represents the location of 0.3?
- b) Which letter best represents the location of 0.78?



- a) Which letter best represents the location of 0.40?
- b) Which letter best represents the location of 0.98?

1. **D** **B**
2. **A** **C**
3. **C** **D**
4. **B** **A**
5. **A** **C**
6. **D** **A**
7. **B** **D**
8. **B** **D**