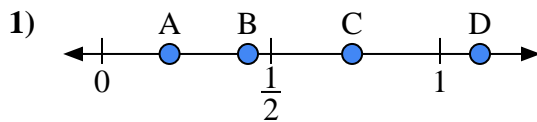
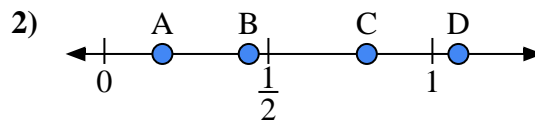




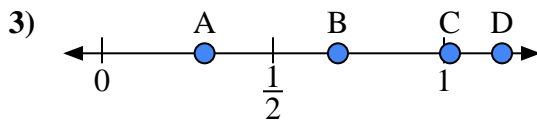
Use the number lines to answer the questions.

**Answers**

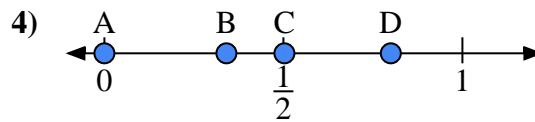
- a) Which letter best represents the location of 0.20?
- b) Which letter best represents the location of 0.74?



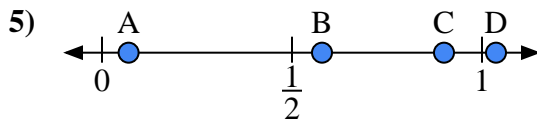
- a) Which letter best represents the location of 0.8?
- b) Which letter best represents the location of 0.44?



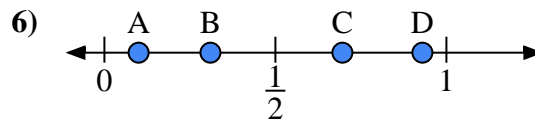
- a) Which letter best represents the location of 0.30?
- b) Which letter best represents the location of 0.69?



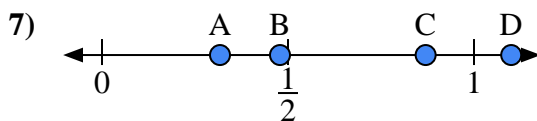
- a) Which letter best represents the location of 0.0?
- b) Which letter best represents the location of 0.80?



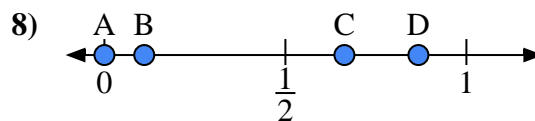
- a) Which letter best represents the location of 0.90?
- b) Which letter best represents the location of 0.07?



- a) Which letter best represents the location of 0.10?
- b) Which letter best represents the location of 0.31?



- a) Which letter best represents the location of 1.10?
- b) Which letter best represents the location of 0.87?

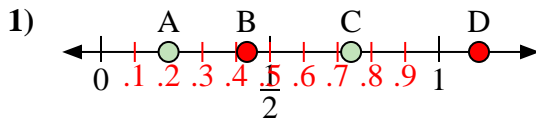


- a) Which letter best represents the location of 0.00?
- b) Which letter best represents the location of 0.11?

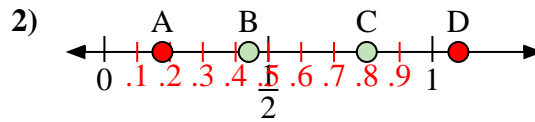
1. \_\_\_\_\_
2. \_\_\_\_\_
3. \_\_\_\_\_
4. \_\_\_\_\_
5. \_\_\_\_\_
6. \_\_\_\_\_
7. \_\_\_\_\_
8. \_\_\_\_\_



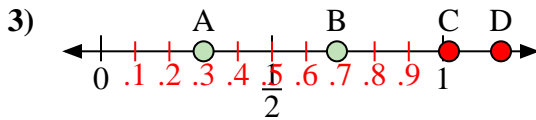
Use the number lines to answer the questions.

**Answers**

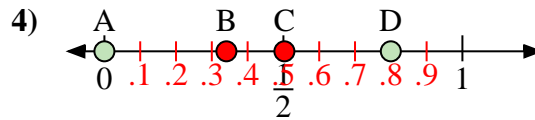
- a) Which letter best represents the location of 0.20?
- b) Which letter best represents the location of 0.74?



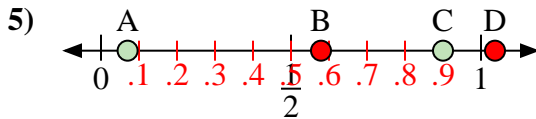
- a) Which letter best represents the location of 0.8?
- b) Which letter best represents the location of 0.44?



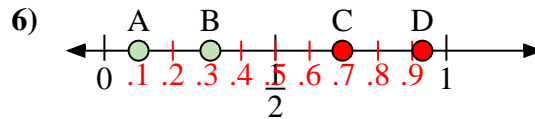
- a) Which letter best represents the location of 0.30?
- b) Which letter best represents the location of 0.69?



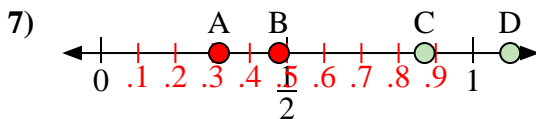
- a) Which letter best represents the location of 0.0?
- b) Which letter best represents the location of 0.80?



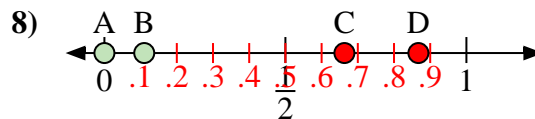
- a) Which letter best represents the location of 0.90?
- b) Which letter best represents the location of 0.07?



- a) Which letter best represents the location of 0.10?
- b) Which letter best represents the location of 0.31?



- a) Which letter best represents the location of 1.10?
- b) Which letter best represents the location of 0.87?



- a) Which letter best represents the location of 0.00?
- b) Which letter best represents the location of 0.11?

1. A C
2. C B
3. A B
4. A D
5. C A
6. A B
7. D C
8. A B