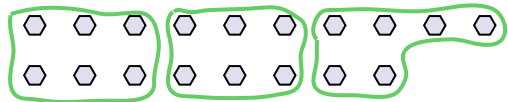




Use the shapes provided to answer the questions.

**Answers**


- Ex) How many groups of 6 can you make with the 18 shapes below?



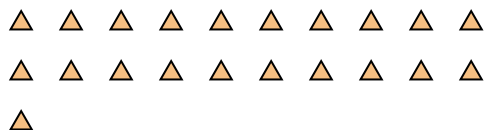
- 1) How many groups of 3 can you make with the 27 shapes below?




- 2) How many groups of 3 can you make with the 33 shapes below?



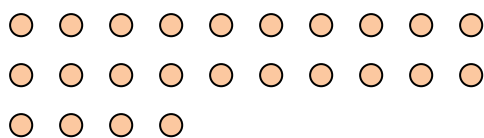
- 3) How many groups of 7 can you make with the 21 shapes below?



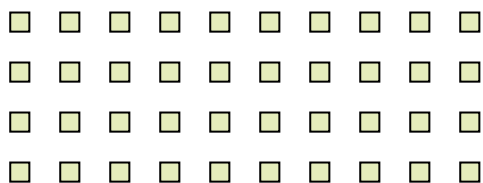
- 4) How many groups of 7 can you make with the 14 shapes below?




- 5) How many groups of 8 can you make with the 24 shapes below?



- 6) How many groups of 4 can you make with the 40 shapes below?



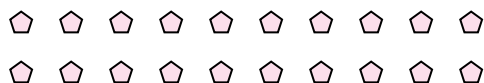
- 7) How many groups of 8 can you make with the 32 shapes below?



- 8) How many groups of 7 can you make with the 28 shapes below?



- 9) How many groups of 5 can you make with the 20 shapes below?



- 10) How many groups of 4 can you make with the 12 shapes below?



- 11) How many groups of 7 can you make with the 21 shapes below?

Ex. 3

1. \_\_\_\_\_

2. \_\_\_\_\_

3. \_\_\_\_\_

4. \_\_\_\_\_

5. \_\_\_\_\_

6. \_\_\_\_\_

7. \_\_\_\_\_

8. \_\_\_\_\_

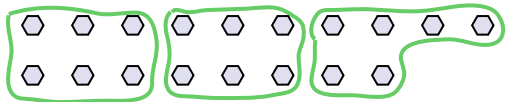
9. \_\_\_\_\_

10. \_\_\_\_\_

11. \_\_\_\_\_

**Use the shapes provided to answer the questions.**


**Ex)** How many groups of 6 can you make with the 18 shapes below?



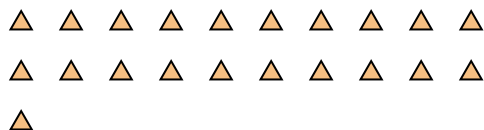
1) How many groups of 3 can you make with the 27 shapes below?




2) How many groups of 3 can you make with the 33 shapes below?



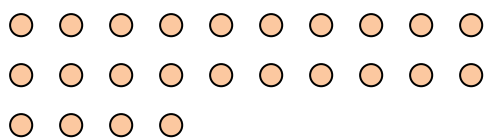
3) How many groups of 7 can you make with the 21 shapes below?



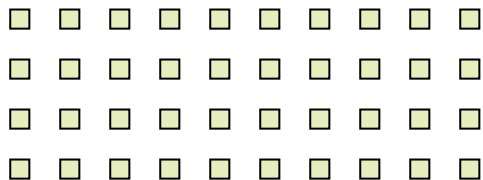
4) How many groups of 7 can you make with the 14 shapes below?




5) How many groups of 8 can you make with the 24 shapes below?




6) How many groups of 4 can you make with the 40 shapes below?



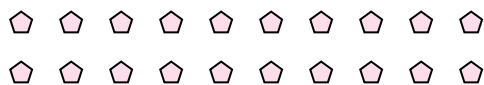
7) How many groups of 8 can you make with the 32 shapes below?



8) How many groups of 7 can you make with the 28 shapes below?



9) How many groups of 5 can you make with the 20 shapes below?



10) How many groups of 4 can you make with the 12 shapes below?



11) How many groups of 7 can you make with the 21 shapes below?



# Answers

Ex. 3

1. 9

2. **11**

3. **3**

4. **2**

5. **3**

6. **10**

7. **4**

8. **4**

9. **4**

10. **3**

11. **3**