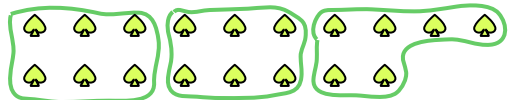




Use the shapes provided to answer the questions.

**Answers**

- Ex) How many groups of 6 can you make with the 18 shapes below?



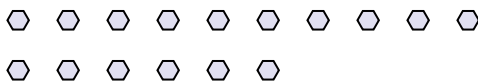
- 1) How many groups of 3 can you make with the 9 shapes below?

Ex. 3

- 2) How many groups of 6 can you make with the 18 shapes below?



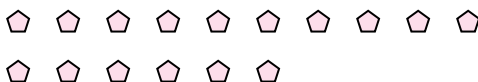
- 3) How many groups of 8 can you make with the 16 shapes below?



- 4) How many groups of 4 can you make with the 8 shapes below?



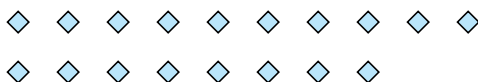
- 5) How many groups of 8 can you make with the 16 shapes below?




- 6) How many groups of 2 can you make with the 24 shapes below?




- 7) How many groups of 2 can you make with the 18 shapes below?



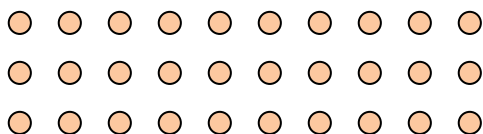
- 8) How many groups of 9 can you make with the 27 shapes below?



- 9) How many groups of 9 can you make with the 36 shapes below?



- 10) How many groups of 6 can you make with the 30 shapes below?



- 11) How many groups of 3 can you make with the 39 shapes below?



1. \_\_\_\_\_

2. \_\_\_\_\_

3. \_\_\_\_\_

4. \_\_\_\_\_

5. \_\_\_\_\_

6. \_\_\_\_\_

7. \_\_\_\_\_

8. \_\_\_\_\_


9. \_\_\_\_\_

10. \_\_\_\_\_

11. \_\_\_\_\_

**Use the shapes provided to answer the questions.**

**Ex)** How many groups of 6 can you make with the 18 shapes below?



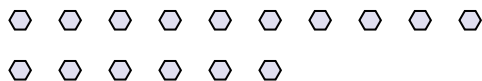
1) How many groups of 3 can you make with the 9 shapes below?



2) How many groups of 6 can you make with the 18 shapes below?



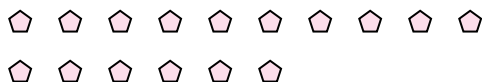
3) How many groups of 8 can you make with the 16 shapes below?



4) How many groups of 4 can you make with the 8 shapes below?



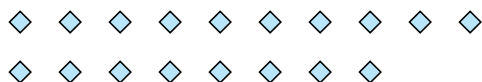
5) How many groups of 8 can you make with the 16 shapes below?




6) How many groups of 2 can you make with the 24 shapes below?




7) How many groups of 2 can you make with the 18 shapes below?



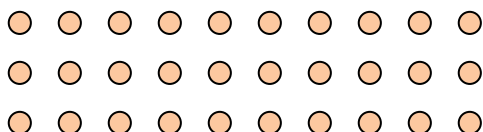
8) How many groups of 9 can you make with the 27 shapes below?



9) How many groups of 9 can you make with the 36 shapes below?



10) How many groups of 6 can you make with the 30 shapes below?



11) How many groups of 3 can you make with the 39 shapes below?



## Answers

Ex. 3

1. 3

2. **3**

3. **2**

4. **2**

5. **2**

6. **12**

7. 9

8. **3**

9. **4**

10. **5**

11. **13**