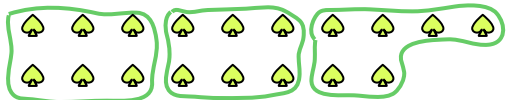




Use the shapes provided to answer the questions.


- Ex) How many groups of 6 can you make with the 18 shapes below?



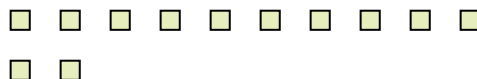
- 1) How many groups of 5 can you make with the 40 shapes below?




- 2) How many groups of 7 can you make with the 21 shapes below?



- 3) How many groups of 6 can you make with the 12 shapes below?



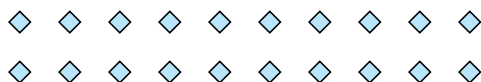
- 4) How many groups of 3 can you make with the 24 shapes below?



- 5) How many groups of 2 can you make with the 4 shapes below?




- 6) How many groups of 5 can you make with the 20 shapes below?



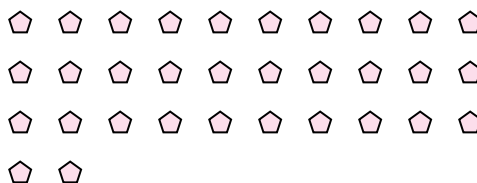
- 7) How many groups of 9 can you make with the 18 shapes below?



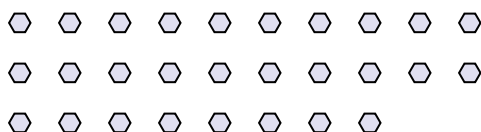
- 8) How many groups of 9 can you make with the 36 shapes below?



- 9) How many groups of 2 can you make with the 32 shapes below?



- 10) How many groups of 2 can you make with the 28 shapes below?



- 11) How many groups of 8 can you make with the 24 shapes below?

**Answers**Ex. 31. 82. 33. 24. 85. 26. 47. 28. 49. 1610. 1411. 3