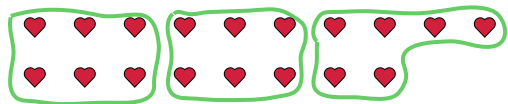




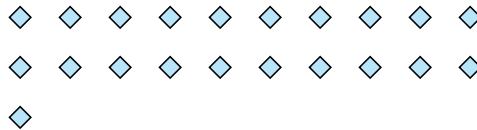
Use the shapes provided to answer the questions.

Answers

- Ex) How many groups of 6 can you make with the 18 shapes below?



- 1) How many groups of 7 can you make with the 21 shapes below?

Ex. 3

1. _____

2. _____

3. _____

4. _____

5. _____

6. _____

7. _____


8. _____

9. _____

10. _____

11. _____

- 2) How many groups of 6 can you make with the 30 shapes below?



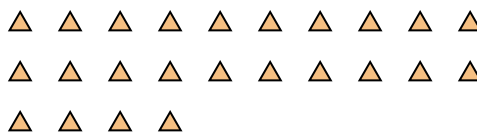
- 3) How many groups of 4 can you make with the 28 shapes below?



- 4) How many groups of 9 can you make with the 27 shapes below?



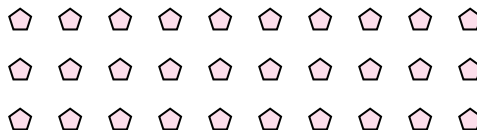
- 5) How many groups of 6 can you make with the 24 shapes below?



- 6) How many groups of 3 can you make with the 30 shapes below?



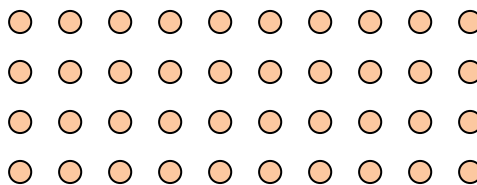
- 7) How many groups of 5 can you make with the 30 shapes below?



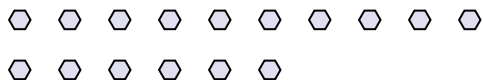
- 8) How many groups of 7 can you make with the 14 shapes below?




- 9) How many groups of 5 can you make with the 40 shapes below?



- 10) How many groups of 2 can you make with the 16 shapes below?

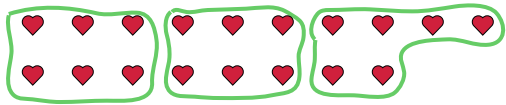


- 11) How many groups of 5 can you make with the 30 shapes below?

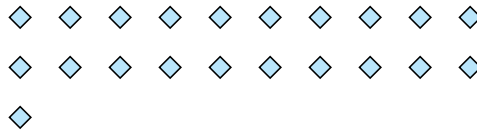


Use the shapes provided to answer the questions.

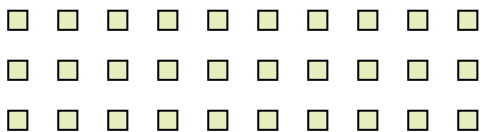
Ex) How many groups of 6 can you make with the 18 shapes below?



1) How many groups of 7 can you make with the 21 shapes below?




2) How many groups of 6 can you make with the 30 shapes below?



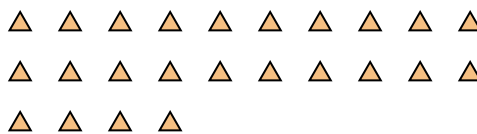
3) How many groups of 4 can you make with the 28 shapes below?



4) How many groups of 9 can you make with the 27 shapes below?



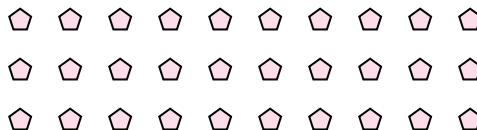
5) How many groups of 6 can you make with the 24 shapes below?



6) How many groups of 3 can you make with the 30 shapes below?



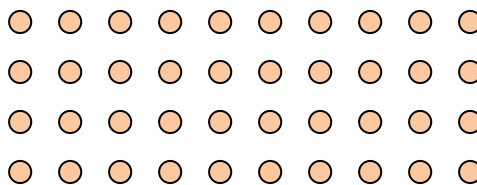
7) How many groups of 5 can you make with the 30 shapes below?



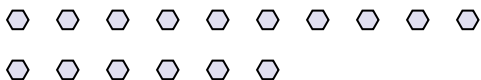
8) How many groups of 7 can you make with the 14 shapes below?




9) How many groups of 5 can you make with the 40 shapes below?



10) How many groups of 2 can you make with the 16 shapes below?



11) How many groups of 5 can you make with the 30 shapes below?



Answers

Ex. 3

1. 3

2. 5

3. 7

4. 3

5. **4**

6. 10

7. **6**

8. **2**

9. **8**

10. **8**

11. **6**