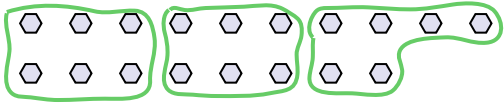




**Use the shapes provided to answer the questions.**

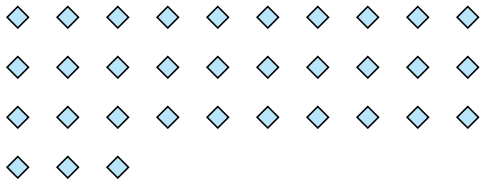
**Ex)** How many groups of 6 can you make with the 18 shapes below?



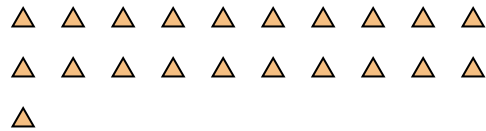
1) How many groups of 3 can you make with the 27 shapes below?




2) How many groups of 3 can you make with the 33 shapes below?



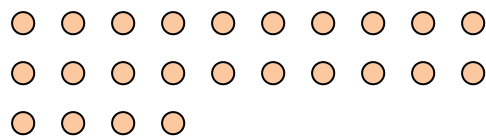
3) How many groups of 7 can you make with the 21 shapes below?




4) How many groups of 7 can you make with the 14 shapes below?




5) How many groups of 8 can you make with the 24 shapes below?




6) How many groups of 4 can you make with the 40 shapes below?



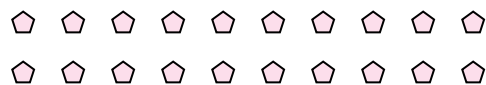
7) How many groups of 8 can you make with the 32 shapes below?



8) How many groups of 7 can you make with the 28 shapes below?



9) How many groups of 5 can you make with the 20 shapes below?



**10)** How many groups of 4 can you make with the 12 shapes below?



11) How many groups of 7 can you make with the 21 shapes below?



## Answers

Ex. 3

1. 9

2. 11

3. 3

4. 2

5. **3**

6. 10

7. **4**

8. **4**

9. 4

10. 3

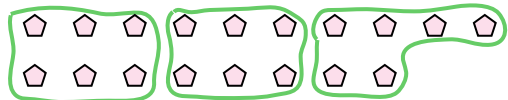
11. **3**



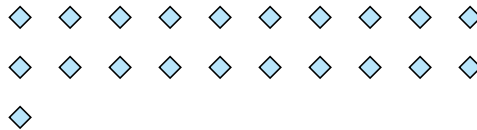
Use the shapes provided to answer the questions.

**Answers**

- Ex) How many groups of 6 can you make with the 18 shapes below?



- 1) How many groups of 7 can you make with the 21 shapes below?



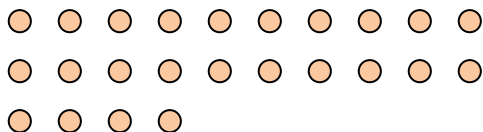
- 2) How many groups of 3 can you make with the 6 shapes below?



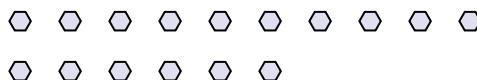
- 3) How many groups of 6 can you make with the 18 shapes below?



- 4) How many groups of 8 can you make with the 24 shapes below?




- 5) How many groups of 8 can you make with the 16 shapes below?



- 6) How many groups of 4 can you make with the 16 shapes below?



- 7) How many groups of 7 can you make with the 35 shapes below?



- 8) How many groups of 3 can you make with the 15 shapes below?



- 9) How many groups of 2 can you make with the 18 shapes below?



- 10) How many groups of 4 can you make with the 8 shapes below?



- 11) How many groups of 7 can you make with the 14 shapes below?

Ex. 3

1. \_\_\_\_\_

2. \_\_\_\_\_

3. \_\_\_\_\_

4. \_\_\_\_\_

5. \_\_\_\_\_

6. \_\_\_\_\_

7. \_\_\_\_\_

8. \_\_\_\_\_

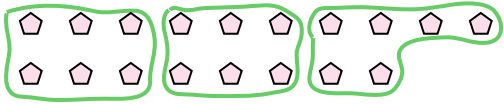
9. \_\_\_\_\_

10. \_\_\_\_\_

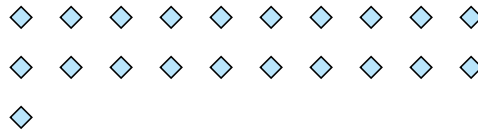
11. \_\_\_\_\_

**Use the shapes provided to answer the questions.**

**Ex)** How many groups of 6 can you make with the 18 shapes below?



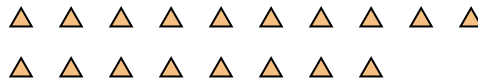
1) How many groups of 7 can you make with the 21 shapes below?



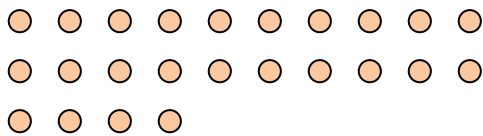
2) How many groups of 3 can you make with the 6 shapes below?



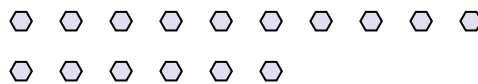
3) How many groups of 6 can you make with the 18 shapes below?



4) How many groups of 8 can you make with the 24 shapes below?




5) How many groups of 8 can you make with the 16 shapes below?



6) How many groups of 4 can you make with the 16 shapes below?



7) How many groups of 7 can you make with the 35 shapes below?



8) How many groups of 3 can you make with the 15 shapes below?



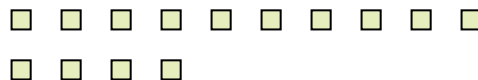
9) How many groups of 2 can you make with the 18 shapes below?



10) How many groups of 4 can you make with the 8 shapes below?



11) How many groups of 7 can you make with the 14 shapes below?



## Answers

Ex. 3

1. 3

2. 2

3. 3

4. 3

5. 2

6. 4

7. 5

8. 5

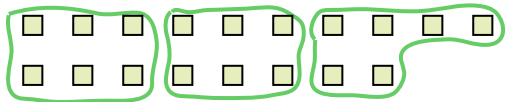
9. 9

10. 2


11. 2

**Use the shapes provided to answer the questions.**

**Ex)** How many groups of 6 can you make with the 18 shapes below?




1) How many groups of 3 can you make with the 30 shapes below?



## Answers

Ex. 3

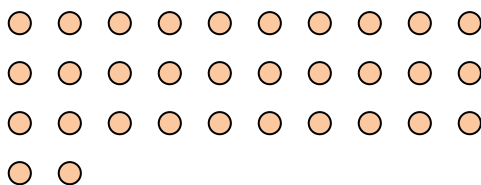
2) How many groups of 4 can you make with the 28 shapes below?



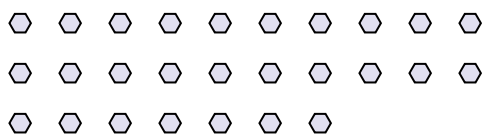
3) How many groups of 2 can you make with the 40 shapes below?



4) How many groups of 4 can you make with the 32 shapes below?




5) How many groups of 9 can you make with the 27 shapes below?




6) How many groups of 6 can you make with the 36 shapes below?



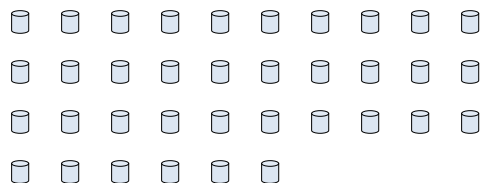
7) How many groups of 3 can you make with the 36 shapes below?



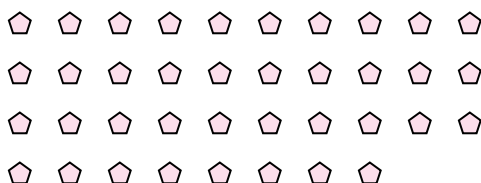
8) How many groups of 6 can you make with the 36 shapes below?



9) How many groups of 4 can you make with the 36 shapes below?



10) How many groups of 2 can you make with the 38 shapes below?



11) How many groups of 7 can you make with the 14 shapes below?



1. \_\_\_\_\_

2. \_\_\_\_\_

3. \_\_\_\_\_

4.

5.

6.

7.

8.

9.

10.

11.

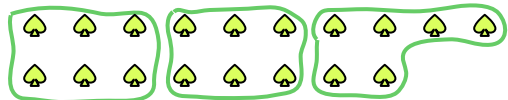




Use the shapes provided to answer the questions.

**Answers**

Ex) How many groups of 6 can you make with the 18 shapes below?



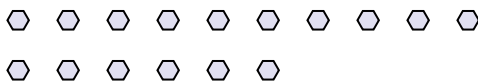
1) How many groups of 3 can you make with the 9 shapes below?

Ex. 3

2) How many groups of 6 can you make with the 18 shapes below?



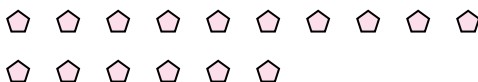
3) How many groups of 8 can you make with the 16 shapes below?



4) How many groups of 4 can you make with the 8 shapes below?



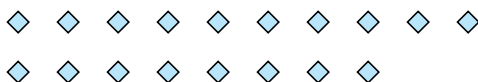
5) How many groups of 8 can you make with the 16 shapes below?




6) How many groups of 2 can you make with the 24 shapes below?




7) How many groups of 2 can you make with the 18 shapes below?



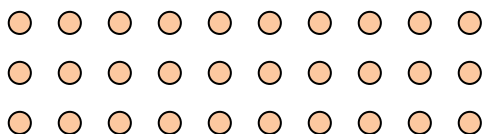
8) How many groups of 9 can you make with the 27 shapes below?



9) How many groups of 9 can you make with the 36 shapes below?



10) How many groups of 6 can you make with the 30 shapes below?



11) How many groups of 3 can you make with the 39 shapes below?



1. \_\_\_\_\_

2. \_\_\_\_\_

3. \_\_\_\_\_

4. \_\_\_\_\_

5. \_\_\_\_\_

6. \_\_\_\_\_

7. \_\_\_\_\_

8. \_\_\_\_\_

9. \_\_\_\_\_

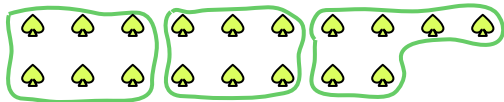
10. \_\_\_\_\_

11. \_\_\_\_\_



Use the shapes provided to answer the questions.


- Ex) How many groups of 6 can you make with the 18 shapes below?



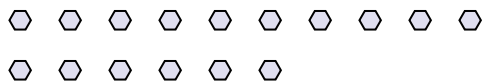
- 1) How many groups of 3 can you make with the 9 shapes below?



- 2) How many groups of 6 can you make with the 18 shapes below?



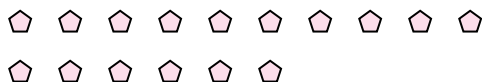
- 3) How many groups of 8 can you make with the 16 shapes below?



- 4) How many groups of 4 can you make with the 8 shapes below?



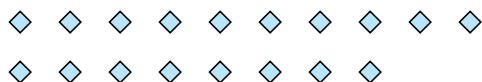
- 5) How many groups of 8 can you make with the 16 shapes below?




- 6) How many groups of 2 can you make with the 24 shapes below?




- 7) How many groups of 2 can you make with the 18 shapes below?



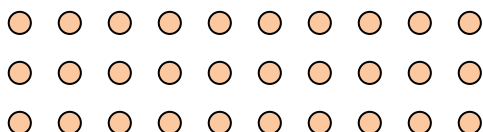
- 8) How many groups of 9 can you make with the 27 shapes below?



- 9) How many groups of 9 can you make with the 36 shapes below?



- 10) How many groups of 6 can you make with the 30 shapes below?



- 11) How many groups of 3 can you make with the 39 shapes below?

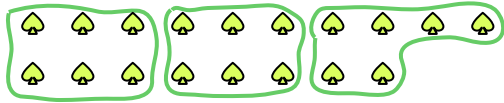
**Answers**Ex. 31. 32. 33. 24. 25. 26. 127. 98. 39. 410. 511. 13



**Use the shapes provided to answer the questions.**

## Answers

**Ex)** How many groups of 6 can you make with the 18 shapes below?




1) How many groups of 5 can you make with the 40 shapes below?

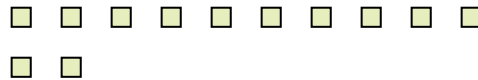


Ex. 3


2) How many groups of 7 can you make with the 21 shapes below?



3) How many groups of 6 can you make with the 12 shapes below?



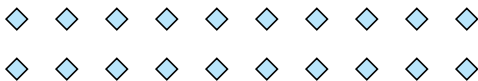
4) How many groups of 3 can you make with the 24 shapes below?



5) How many groups of 2 can you make with the 4 shapes below?




6) How many groups of 5 can you make with the 20 shapes below?



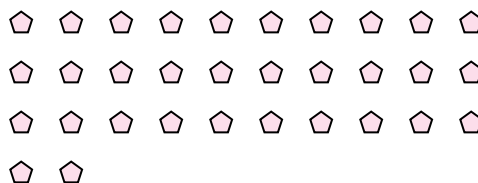
7) How many groups of 9 can you make with the 18 shapes below?



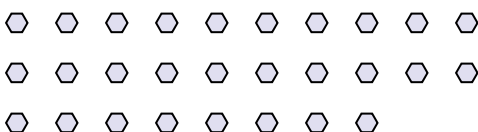
8) How many groups of 9 can you make with the 36 shapes below?



9) How many groups of 2 can you make with the 32 shapes below?



10) How many groups of 2 can you make with the 28 shapes below?



11) How many groups of 8 can you make with the 24 shapes below?



1. \_\_\_\_\_

2. \_\_\_\_\_

3. \_\_\_\_\_

4.

5.

6.

7.

8


9

10

11

**Use the shapes provided to answer the questions.**


**Ex)** How many groups of 6 can you make with the 18 shapes below?



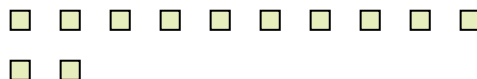
1) How many groups of 5 can you make with the 40 shapes below?




2) How many groups of 7 can you make with the 21 shapes below?



3) How many groups of 6 can you make with the 12 shapes below?



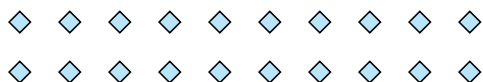
4) How many groups of 3 can you make with the 24 shapes below?



5) How many groups of 2 can you make with the 4 shapes below?




6) How many groups of 5 can you make with the 20 shapes below?



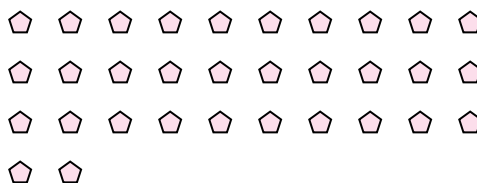
7) How many groups of 9 can you make with the 18 shapes below?



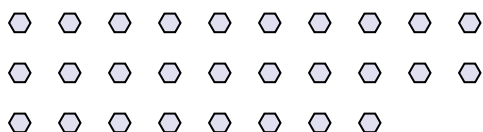
8) How many groups of 9 can you make with the 36 shapes below?



9) How many groups of 2 can you make with the 32 shapes below?



10) How many groups of 2 can you make with the 28 shapes below?



11) How many groups of 8 can you make with the 24 shapes below?



## Answers

Ex. 3

1. **8**

2. **3**

3. **2**

4. **8**

5. **2**

6. **4**

7. **2**

8. **4**

9. **16**

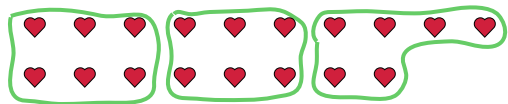
10. **14**

11. **3**

**Use the shapes provided to answer the questions.**

# Answers

**Ex)** How many groups of 6 can you make with the 18 shapes below?



1) How many groups of 2 can you make with the 26 shapes below?



Ex. 3

1. \_\_\_\_\_

2.

3.

4.

5.

6.

7.

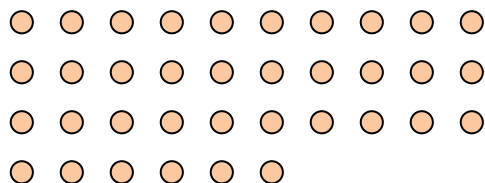
8.

9.


10.

11.

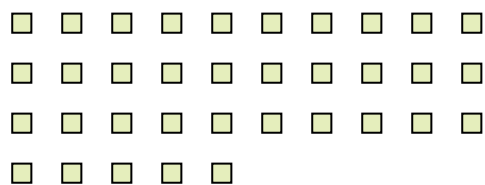
2) How many groups of 9 can you make with the 36 shapes below?



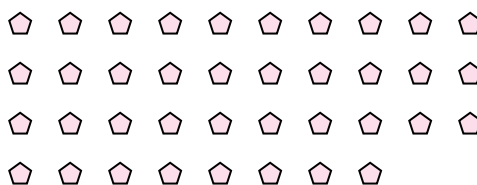
3) How many groups of 3 can you make with the 24 shapes below?



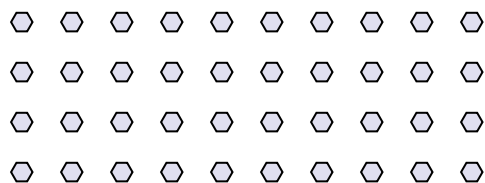
4) How many groups of 7 can you make with the 35 shapes below?




5) How many groups of 2 can you make with the 38 shapes below?




6) How many groups of 8 can you make with the 40 shapes below?



7) How many groups of 9 can you make with the 36 shapes below?



8) How many groups of 4 can you make with the 40 shapes below?




9) How many groups of 7 can you make with the 35 shapes below?



**10)** How many groups of 5 can you make with the 10 shapes below?

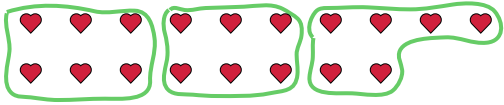


11) How many groups of 9 can you make with the 27 shapes below?



**Use the shapes provided to answer the questions.**

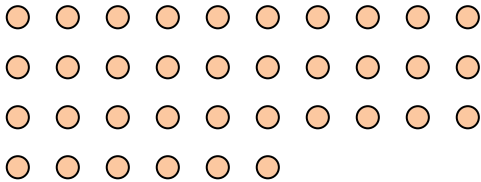
**Ex)** How many groups of 6 can you make with the 18 shapes below?




1) How many groups of 2 can you make with the 26 shapes below?




2) How many groups of 9 can you make with the 36 shapes below?



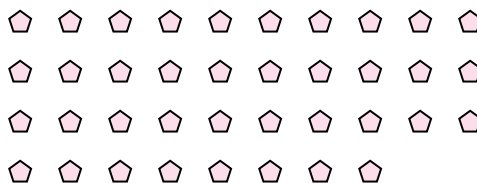
3) How many groups of 3 can you make with the 24 shapes below?



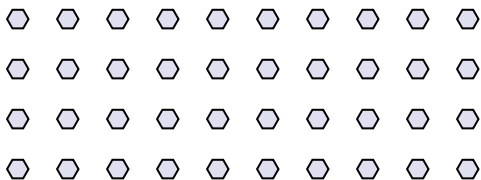
4) How many groups of 7 can you make with the 35 shapes below?




5) How many groups of 2 can you make with the 38 shapes below?




6) How many groups of 8 can you make with the 40 shapes below?



7) How many groups of 9 can you make with the 36 shapes below?



8) How many groups of 4 can you make with the 40 shapes below?




9) How many groups of 7 can you make with the 35 shapes below?



**10)** How many groups of 5 can you make with the 10 shapes below?



11) How many groups of 9 can you make with the 27 shapes below?



## Answers

Ex. 3

1. 13

2. 4

3. 8

4. 5

5. **19**

6. **5**

7. **4**

8. **10**

9. **5**

10. **2**

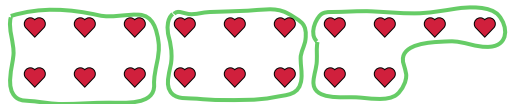
11. **3**



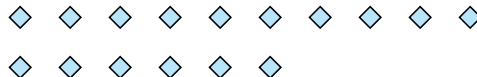
Use the shapes provided to answer the questions.

**Answers**

- Ex) How many groups of 6 can you make with the 18 shapes below?



- 1) How many groups of 8 can you make with the 16 shapes below?

Ex. 3

1. \_\_\_\_\_

2. \_\_\_\_\_

3. \_\_\_\_\_

4. \_\_\_\_\_

5. \_\_\_\_\_

6. \_\_\_\_\_

7. \_\_\_\_\_


8. \_\_\_\_\_

9. \_\_\_\_\_

10. \_\_\_\_\_

11. \_\_\_\_\_

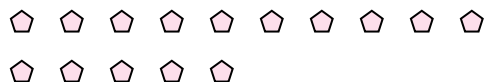
- 2) How many groups of 6 can you make with the 36 shapes below?



- 3) How many groups of 5 can you make with the 25 shapes below?



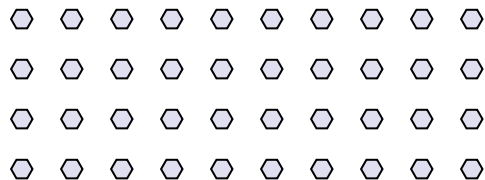
- 4) How many groups of 5 can you make with the 15 shapes below?



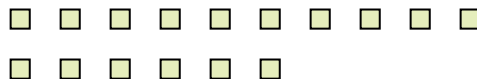
- 5) How many groups of 3 can you make with the 6 shapes below?




- 6) How many groups of 4 can you make with the 40 shapes below?




- 7) How many groups of 2 can you make with the 16 shapes below?



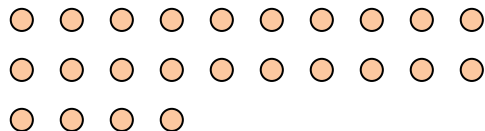
- 8) How many groups of 6 can you make with the 30 shapes below?




- 9) How many groups of 7 can you make with the 21 shapes below?



- 10) How many groups of 8 can you make with the 24 shapes below?



- 11) How many groups of 2 can you make with the 22 shapes below?

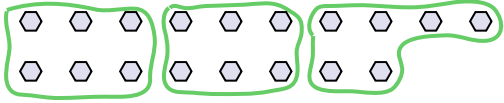




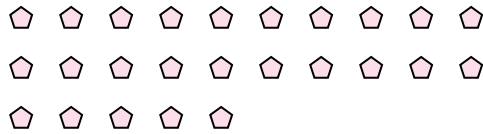


**Use the shapes provided to answer the questions.**

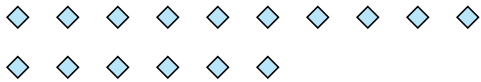
**Ex)** How many groups of 6 can you make with the 18 shapes below?



1) How many groups of 5 can you make with the 25 shapes below?




2) How many groups of 4 can you make with the 16 shapes below?




3) How many groups of 2 can you make with the 14 shapes below?



4) How many groups of 4 can you make with the 28 shapes below?



5) How many groups of 9 can you make with the 36 shapes below?



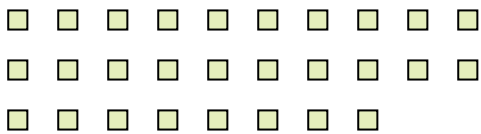
6) How many groups of 9 can you make with the 27 shapes below?



7) How many groups of 6 can you make with the 30 shapes below?



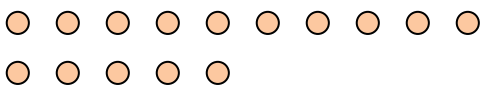
8) How many groups of 2 can you make with the 28 shapes below?




9) How many groups of 9 can you make with the 27 shapes below?



**10)** How many groups of 5 can you make with the 15 shapes below?



11) How many groups of 4 can you make with the 36 shapes below?



## Answers

Ex. 3

1. 5

2. 4

3. 7

4. 7

5. **4**

6. 3

7. **5**

8. **14**

9. 3

10. 3

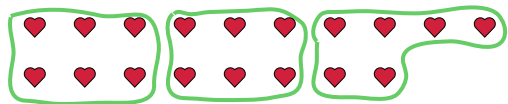
11. **9**



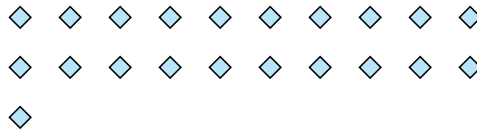
**Use the shapes provided to answer the questions.**

# Answers

**Ex)** How many groups of 6 can you make with the 18 shapes below?




1) How many groups of 7 can you make with the 21 shapes below?



Ex. 3

2) How many groups of 6 can you make with the 30 shapes below?



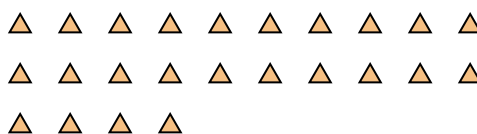
3) How many groups of 4 can you make with the 28 shapes below?




4) How many groups of 9 can you make with the 27 shapes below?



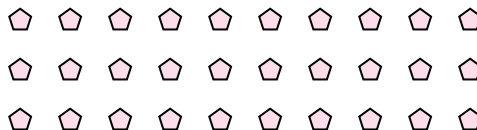
5) How many groups of 6 can you make with the 24 shapes below?



6) How many groups of 3 can you make with the 30 shapes below?



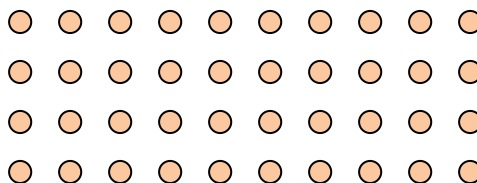
7) How many groups of 5 can you make with the 30 shapes below?



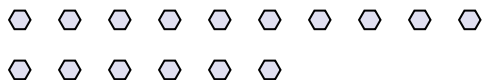
8) How many groups of 7 can you make with the 14 shapes below?




9) How many groups of 5 can you make with the 40 shapes below?



10) How many groups of 2 can you make with the 16 shapes below?



11) How many groups of 5 can you make with the 30 shapes below?



1. \_\_\_\_\_

2. \_\_\_\_\_

3.

4.

5.

6.

7.

8.

9.

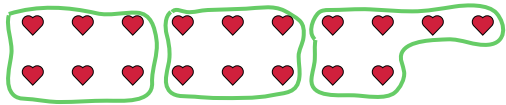
10.

11.

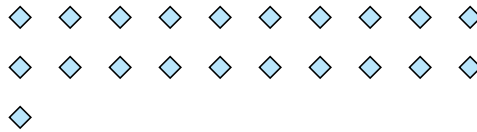


Use the shapes provided to answer the questions.

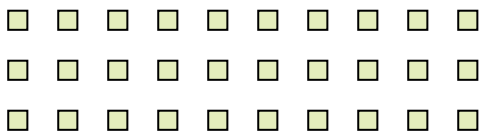
- Ex) How many groups of 6 can you make with the 18 shapes below?



- 1) How many groups of 7 can you make with the 21 shapes below?




- 2) How many groups of 6 can you make with the 30 shapes below?



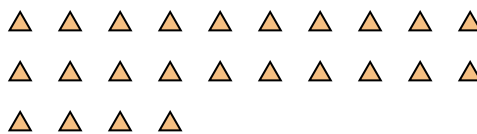
- 3) How many groups of 4 can you make with the 28 shapes below?



- 4) How many groups of 9 can you make with the 27 shapes below?



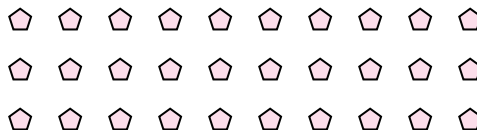
- 5) How many groups of 6 can you make with the 24 shapes below?



- 6) How many groups of 3 can you make with the 30 shapes below?



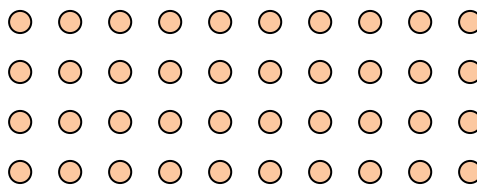
- 7) How many groups of 5 can you make with the 30 shapes below?



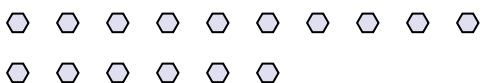
- 8) How many groups of 7 can you make with the 14 shapes below?




- 9) How many groups of 5 can you make with the 40 shapes below?



- 10) How many groups of 2 can you make with the 16 shapes below?

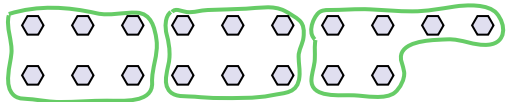


- 11) How many groups of 5 can you make with the 30 shapes below?

**Answers**Ex. 31. 32. 53. 74. 35. 46. 107. 68. 29. 810. 811. 6

**Use the shapes provided to answer the questions.**

**Ex)** How many groups of 6 can you make with the 18 shapes below?



1) How many groups of 6 can you make with the 12 shapes below?



## Answers

Ex. 3

1. \_\_\_\_\_

2. \_\_\_\_\_

3.

4.

5.

6.

7.


8.

9.

10.

11.


2) How many groups of 7 can you make with the 35 shapes below?



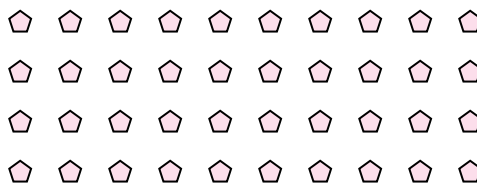
3) How many groups of 4 can you make with the 8 shapes below?




4) How many groups of 8 can you make with the 24 shapes below?



5) How many groups of 4 can you make with the 40 shapes below?




6) How many groups of 6 can you make with the 36 shapes below?



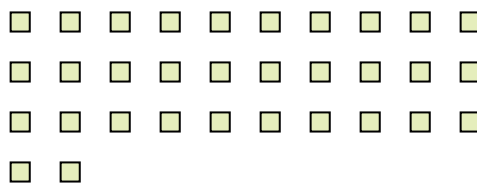
7) How many groups of 5 can you make with the 10 shapes below?



8) How many groups of 9 can you make with the 27 shapes below?



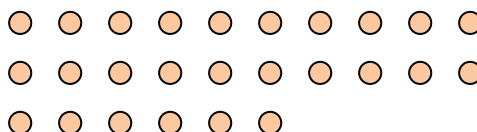
9) How many groups of 8 can you make with the 32 shapes below?



10) How many groups of 6 can you make with the 18 shapes below?

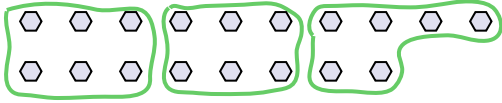


11) How many groups of 2 can you make with the 26 shapes below?



**Use the shapes provided to answer the questions.**


**Ex)** How many groups of 6 can you make with the 18 shapes below?



1) How many groups of 6 can you make with the 12 shapes below?




2) How many groups of 7 can you make with the 35 shapes below?



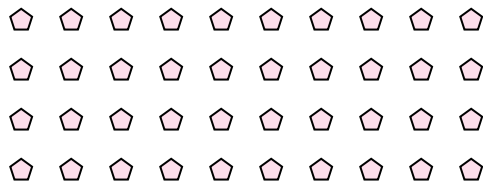
3) How many groups of 4 can you make with the 8 shapes below?




4) How many groups of 8 can you make with the 24 shapes below?



5) How many groups of 4 can you make with the 40 shapes below?




6) How many groups of 6 can you make with the 36 shapes below?




7) How many groups of 5 can you make with the 10 shapes below?



8) How many groups of 9 can you make with the 27 shapes below?



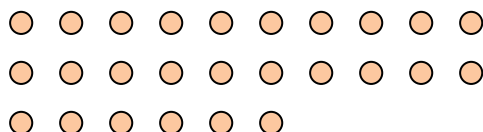
9) How many groups of 8 can you make with the 32 shapes below?



10) How many groups of 6 can you make with the 18 shapes below?



11) How many groups of 2 can you make with the 26 shapes below?



## Answers

Ex. 3

1. 2

2. 5

3. 2

4. 3

5. 10

6. 6

7. 2

8. 3

9. 4

10. 3

11. **13**