

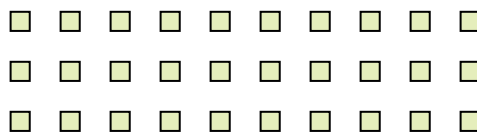
Use the shapes provided to answer the questions.

Answers

Ex) How many groups of 6 can you make with the 18 shapes below?



1) How many groups of 6 can you make with the 30 shapes below?



Ex. 3

1. _____

2.

3.

4.

5.

6.

7.

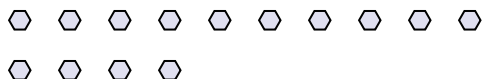
8.

9.

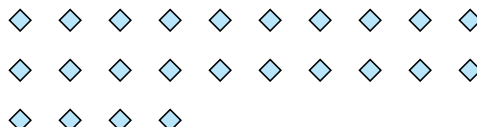
10.

11.

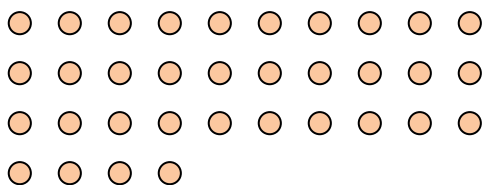
2) How many groups of 7 can you make with the 14 shapes below?



3) How many groups of 6 can you make with the 24 shapes below?



4) How many groups of 2 can you make with the 34 shapes below?



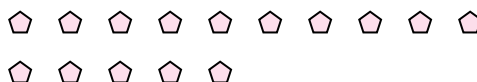
5) How many groups of 7 can you make with the 14 shapes below?




6) How many groups of 3 can you make with the 15 shapes below?




7) How many groups of 5 can you make with the 15 shapes below?



8) How many groups of 4 can you make with the 24 shapes below?




9) How many groups of 5 can you make with the 40 shapes below?



10) How many groups of 8 can you make with the 16 shapes below?



11) How many groups of 5 can you make with the 25 shapes below?



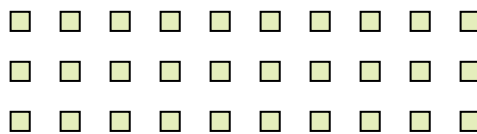


Use the shapes provided to answer the questions.

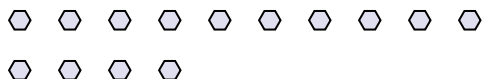
- Ex) How many groups of 6 can you make with the 18 shapes below?



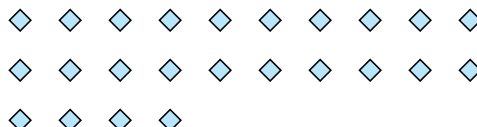
- 1) How many groups of 6 can you make with the 30 shapes below?



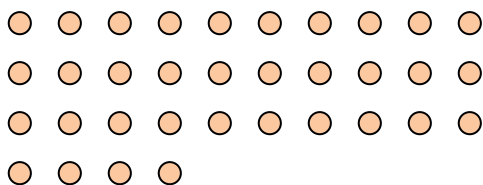
- 2) How many groups of 7 can you make with the 14 shapes below?



- 3) How many groups of 6 can you make with the 24 shapes below?



- 4) How many groups of 2 can you make with the 34 shapes below?



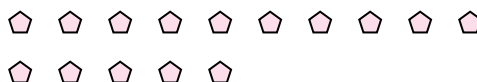
- 5) How many groups of 7 can you make with the 14 shapes below?




- 6) How many groups of 3 can you make with the 15 shapes below?




- 7) How many groups of 5 can you make with the 15 shapes below?



- 8) How many groups of 4 can you make with the 24 shapes below?




- 9) How many groups of 5 can you make with the 40 shapes below?



- 10) How many groups of 8 can you make with the 16 shapes below?



- 11) How many groups of 5 can you make with the 25 shapes below?

**Answers**Ex. 31. 52. 23. 44. 175. 26. 57. 38. 69. 810. 211. 5