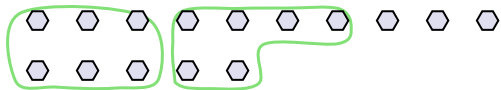





Use the shapes provided to answer the questions.

Answers

- Ex) There are 15 shapes below. How many groups of 6 can you make with them? How many will you have left over?



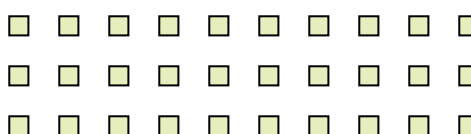
- 1) There are 29 shapes below. How many groups of 7 can you make with them? How many will you have left over?



- 2) There are 15 shapes below. How many groups of 9 can you make with them? How many will you have left over?



- 3) There are 30 shapes below. How many groups of 5 can you make with them? How many will you have left over?



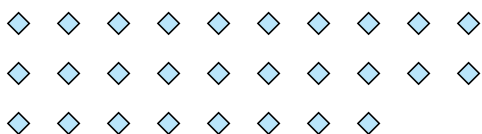
- 4) There are 17 shapes below. How many groups of 9 can you make with them? How many will you have left over?



- 5) There are 20 shapes below. How many groups of 4 can you make with them? How many will you have left over?



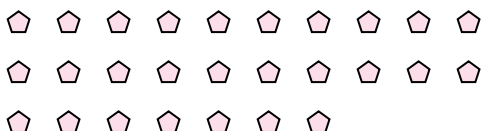
- 6) There are 28 shapes below. How many groups of 3 can you make with them? How many will you have left over?




- 7) There are 20 shapes below. How many groups of 9 can you make with them? How many will you have left over?



- 8) There are 27 shapes below. How many groups of 2 can you make with them? How many will you have left over?



- 9) There are 24 shapes below. How many groups of 9 can you make with them? How many will you have left over?

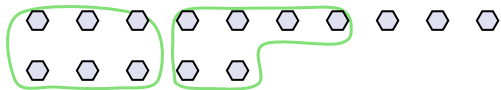


Ex.	<u>2</u>	<u>3</u>
1.	_____	_____
2.	_____	_____
3.	_____	_____
4.	_____	_____
5.	_____	_____
6.	_____	_____
7.	_____	_____
8.	_____	_____
9.	_____	_____




Use the shapes provided to answer the questions.

- Ex) There are 15 shapes below. How many groups of 6 can you make with them? How many will you have left over?



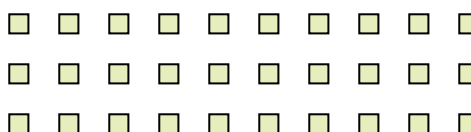
- 1) There are 29 shapes below. How many groups of 7 can you make with them? How many will you have left over?



- 2) There are 15 shapes below. How many groups of 9 can you make with them? How many will you have left over?



- 3) There are 30 shapes below. How many groups of 5 can you make with them? How many will you have left over?



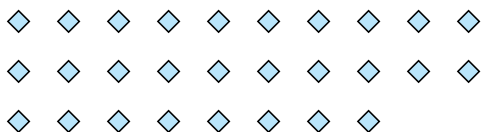
- 4) There are 17 shapes below. How many groups of 9 can you make with them? How many will you have left over?



- 5) There are 20 shapes below. How many groups of 4 can you make with them? How many will you have left over?



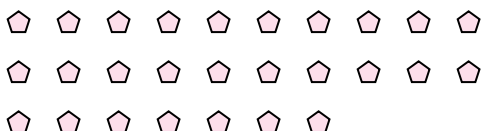
- 6) There are 28 shapes below. How many groups of 3 can you make with them? How many will you have left over?




- 7) There are 20 shapes below. How many groups of 9 can you make with them? How many will you have left over?



- 8) There are 27 shapes below. How many groups of 2 can you make with them? How many will you have left over?



- 9) There are 24 shapes below. How many groups of 9 can you make with them? How many will you have left over?

**Answers**

Ex.	<u>2</u>	<u>3</u>
1.	<u>4</u>	<u>1</u>
2.	<u>1</u>	<u>6</u>
3.	<u>6</u>	<u>0</u>
4.	<u>1</u>	<u>8</u>
5.	<u>5</u>	<u>0</u>
6.	<u>9</u>	<u>1</u>
7.	<u>2</u>	<u>2</u>
8.	<u>13</u>	<u>1</u>
9.	<u>2</u>	<u>6</u>