






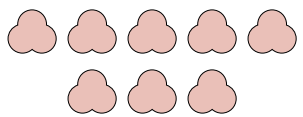
Matching Addition

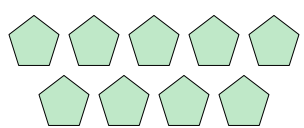
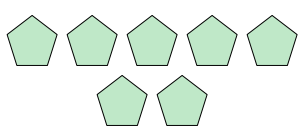
Name: _____



Express the visual problem as an equation with answer.

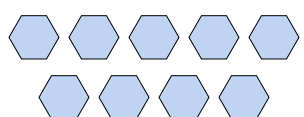
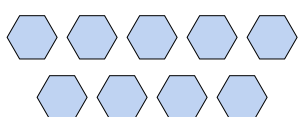
Answers

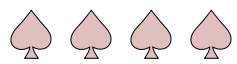

1)  +  =

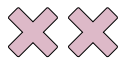

2)  +  =



3)  +  =


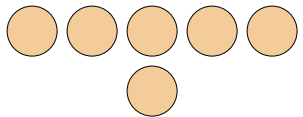
4)  +  =


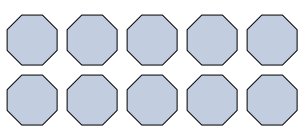
5)  +  =

6)  +  =

7)  +  =

8)  +  =

9)  +  =

10)  +  =

1. _____

2. _____

3. _____

4. _____

5. _____

6. _____

7. _____

8. _____

9. _____



10. _____


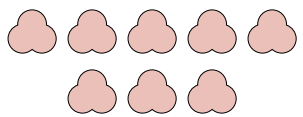


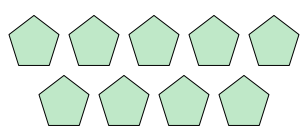
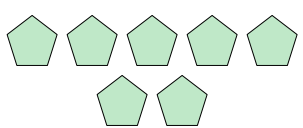
Matching Addition



Name: **Answer Key**

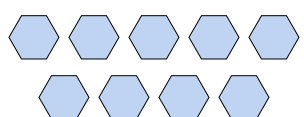
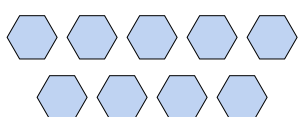
Express the visual problem as an equation with answer.

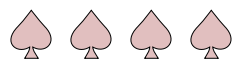

1)  +  =

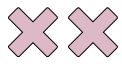

2)  +  =



3)  +  =


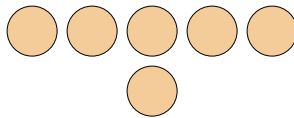
4)  +  =


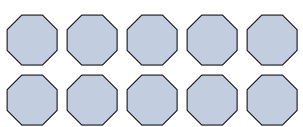
5)  +  =

6)  +  =

7)  +  =

8)  +  =

9)  +  =

10)  +  =

Answers

1. $4 + 2 = 6$

2. $9 + 8 = 17$

3. $9 + 7 = 16$

4. $8 + 1 = 9$

5. $9 + 9 = 18$

6. $4 + 8 = 12$

7. $2 + 9 = 11$

8. $5 + 4 = 9$

9. $5 + 6 = 11$

10. $1 + 10 = 11$