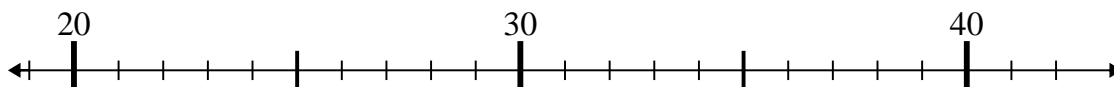




Use the numberlines to solve each problem.

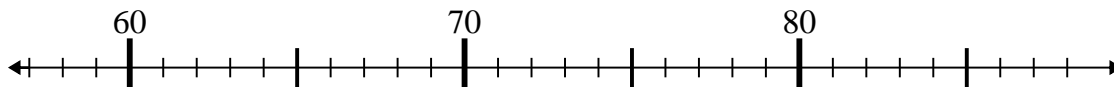
**Answers**

1)  $31 + 4 =$



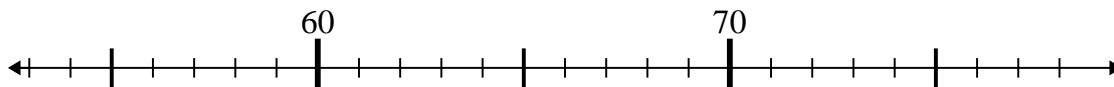
1. \_\_\_\_\_

2)  $76 - 18 =$



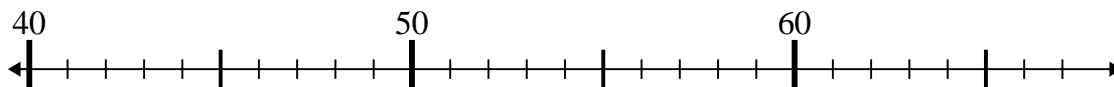
2. \_\_\_\_\_

3)  $57 + 5 =$



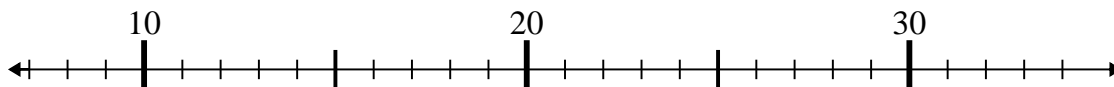
3. \_\_\_\_\_

4)  $40 + 8 =$



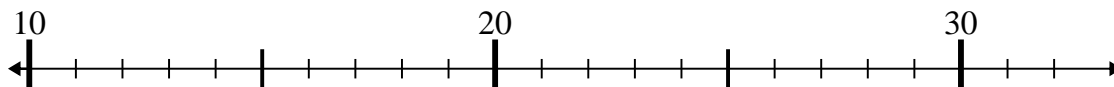
4. \_\_\_\_\_

5)  $8 + 20 =$



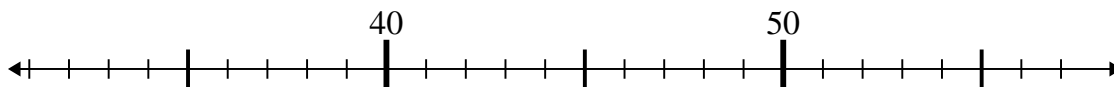
5. \_\_\_\_\_

6)  $13 + 4 =$



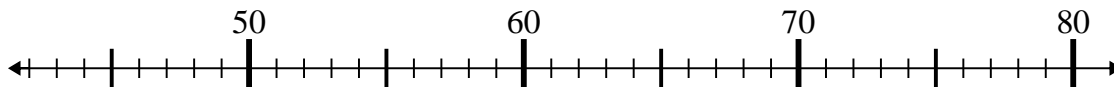
6. \_\_\_\_\_

7)  $56 - 18 =$



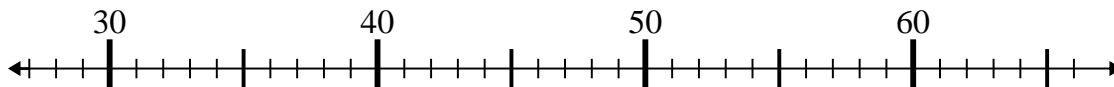
7. \_\_\_\_\_

8)  $61 - 13 =$



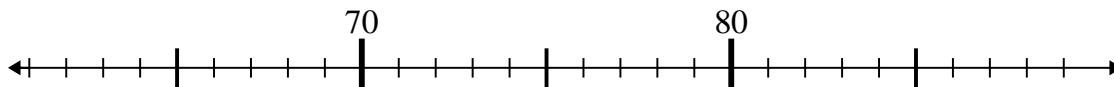
8. \_\_\_\_\_

9)  $40 + 16 =$



9. \_\_\_\_\_

10)  $78 + 3 =$

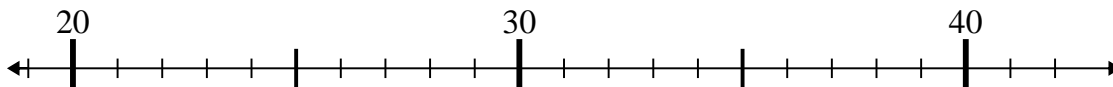


10. \_\_\_\_\_

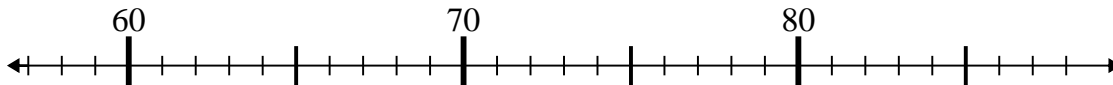


Use the numberlines to solve each problem.

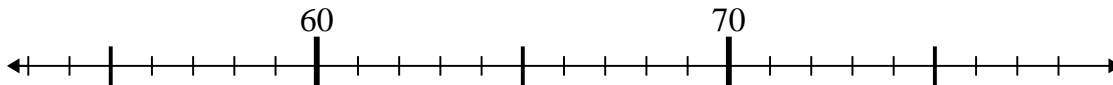
1)  $31 + 4 =$



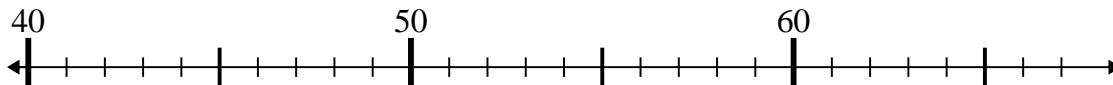
2)  $76 - 18 =$



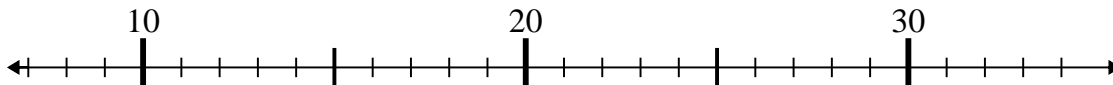
3)  $57 + 5 =$



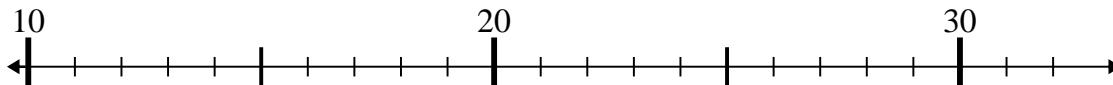
4)  $40 + 8 =$



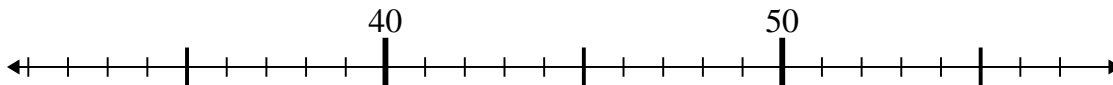
5)  $8 + 20 =$



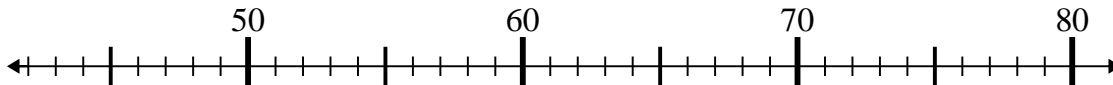
6)  $13 + 4 =$



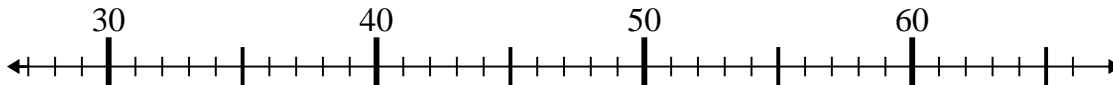
7)  $56 - 18 =$



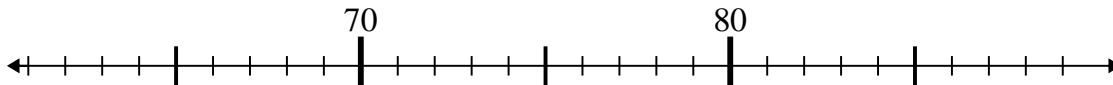
8)  $61 - 13 =$



9)  $40 + 16 =$



10)  $78 + 3 =$

Answers1. **35**2. **58**3. **62**4. **48**5. **28**6. **17**7. **38**8. **48**9. **56**10. **81**