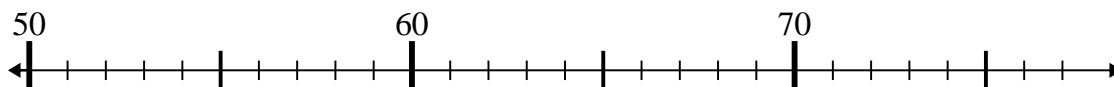




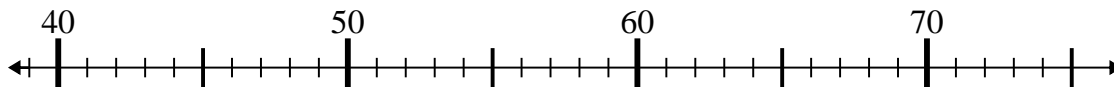
Use the numberlines to solve each problem.

**Answers**

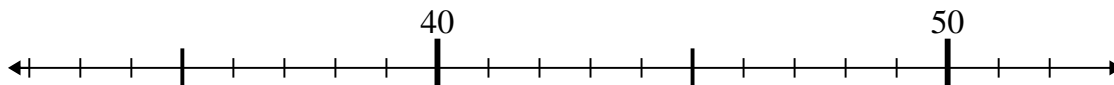
1)  $70 - 16 =$



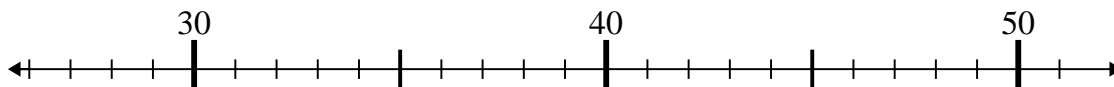
2)  $39 + 6 =$



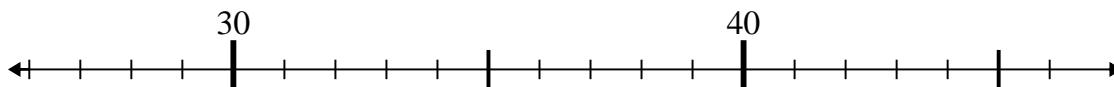
3)  $46 + 3 =$



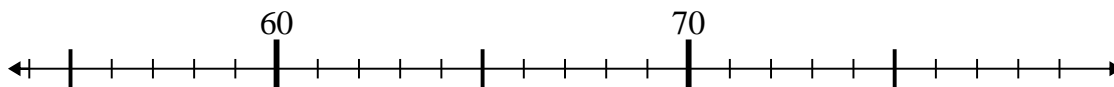
4)  $31 + 8 =$



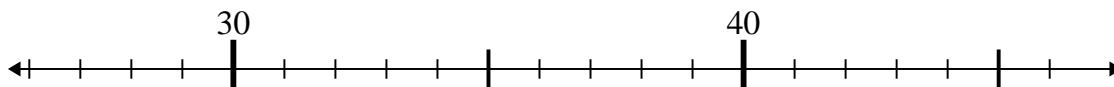
5)  $36 - 1 =$



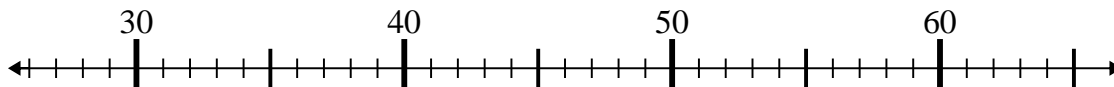
6)  $70 + 8 =$



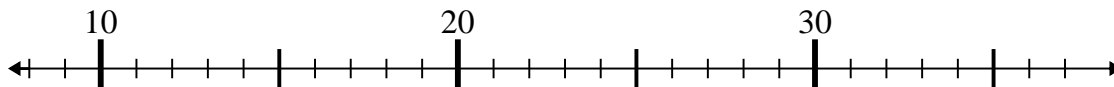
7)  $46 - 1 =$



8)  $27 + 8 =$



9)  $18 + 1 =$



10)  $25 + 3 =$



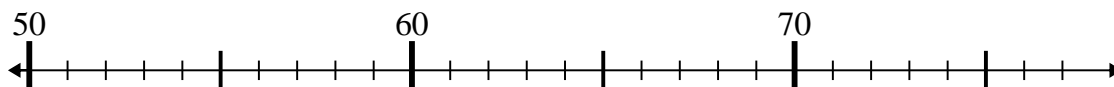
1. \_\_\_\_\_
2. \_\_\_\_\_
3. \_\_\_\_\_
4. \_\_\_\_\_
5. \_\_\_\_\_
6. \_\_\_\_\_
7. \_\_\_\_\_
8. \_\_\_\_\_
9. \_\_\_\_\_
10. \_\_\_\_\_



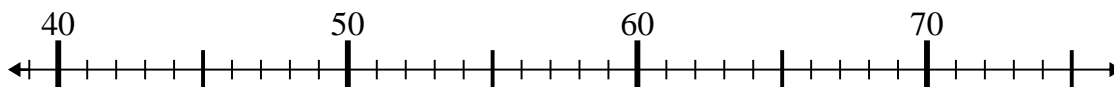
Use the numberlines to solve each problem.

Answers

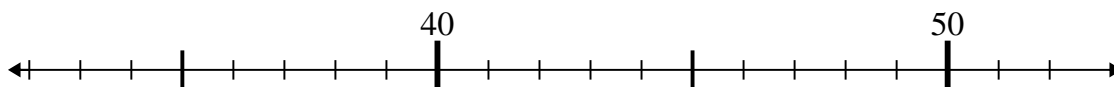
1)  $70 - 16 =$

1. 54

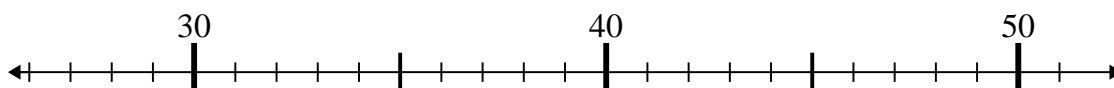
2)  $39 + 6 =$

2. 45

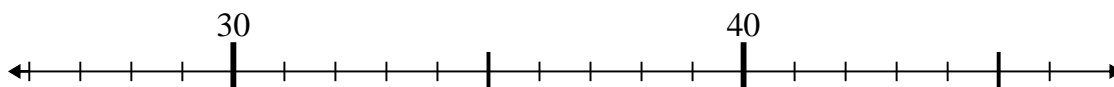
3)  $46 + 3 =$

3. 49

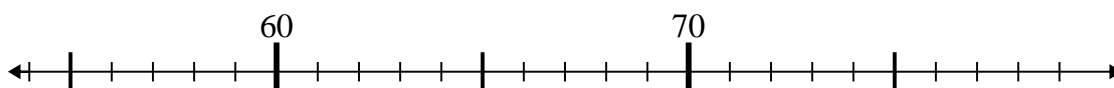
4)  $31 + 8 =$

4. 39

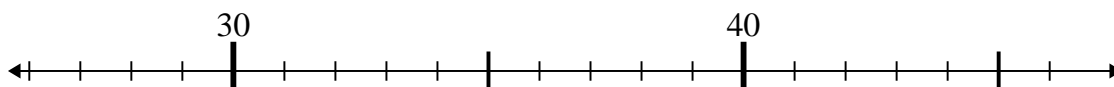
5)  $36 - 1 =$

5. 35

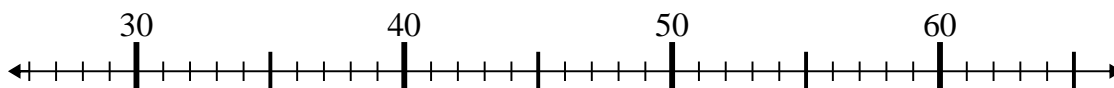
6)  $70 + 8 =$

6. 78

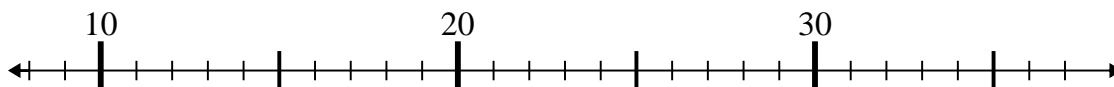
7)  $46 - 1 =$

7. 45

8)  $27 + 8 =$

8. 35

9)  $18 + 1 =$

9. 19

10)  $25 + 3 =$

10. 28