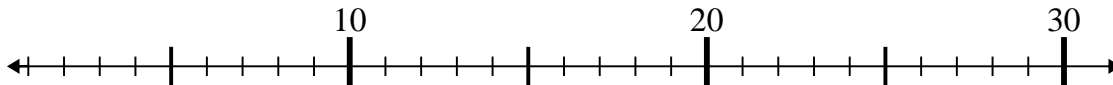




Use the numberlines to solve each problem.

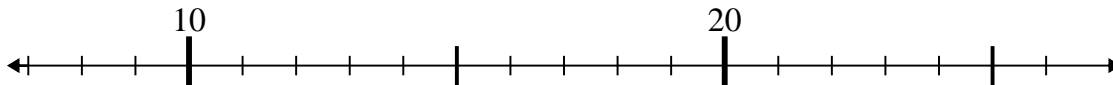
Answers

1) $3 + 17 =$



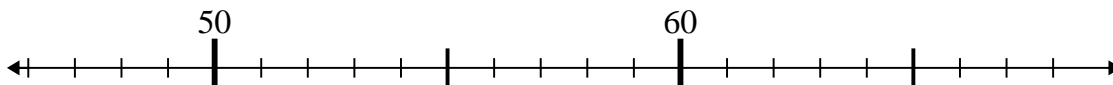
1. _____

2) $14 + 9 =$



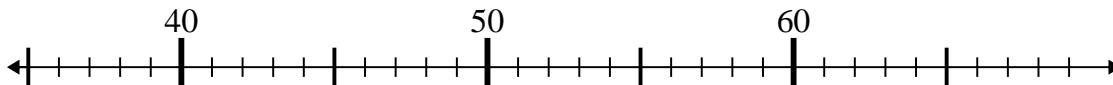
2. _____

3) $59 - 8 =$



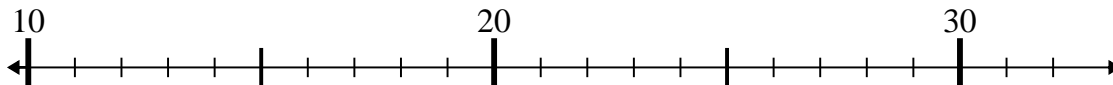
3. _____

4) $43 - 5 =$



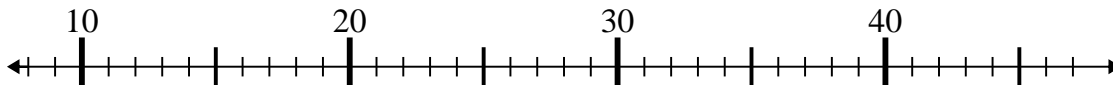
4. _____

5) $26 - 14 =$



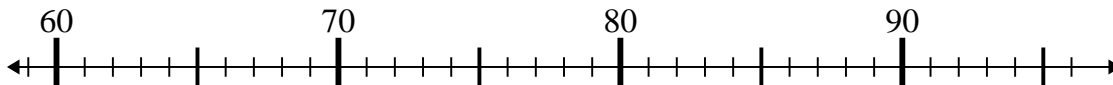
5. _____

6) $15 + 23 =$



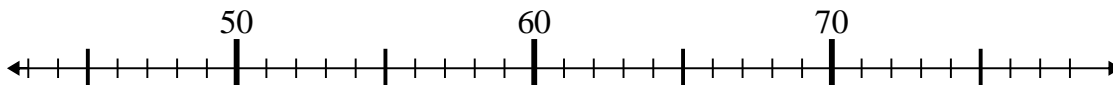
6. _____

7) $91 + 2 =$



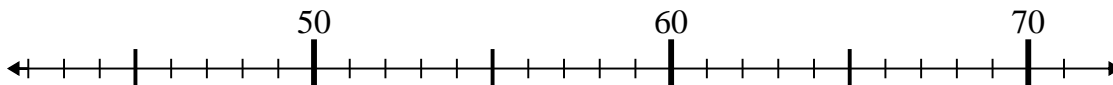
7. _____

8) $47 + 1 =$



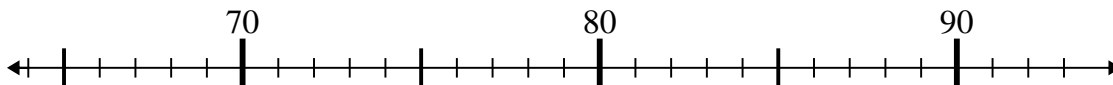
8. _____

9) $71 - 8 =$



9. _____

10) $72 + 16 =$

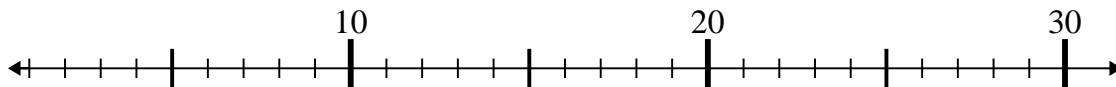


10. _____

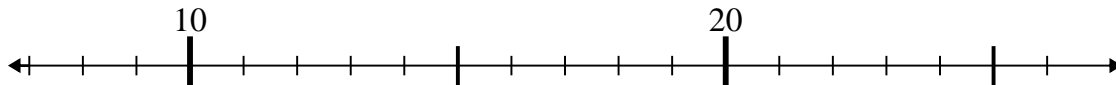


Use the numberlines to solve each problem.

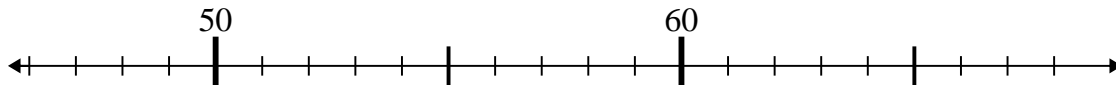
1) $3 + 17 =$



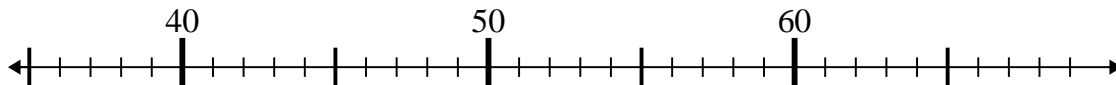
2) $14 + 9 =$



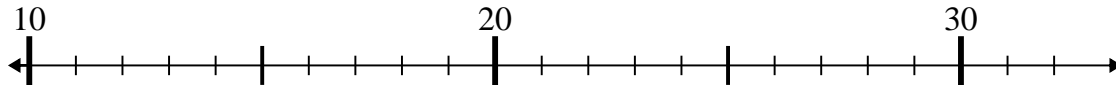
3) $59 - 8 =$



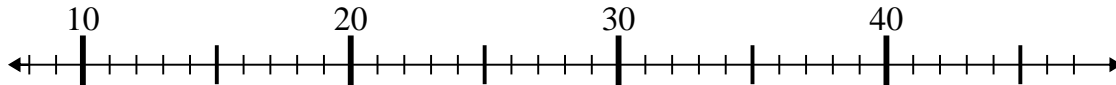
4) $43 - 5 =$



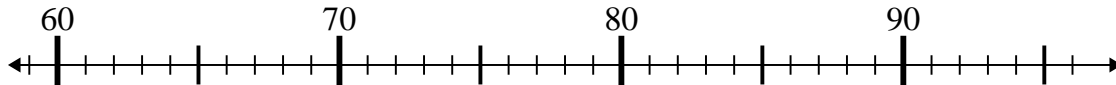
5) $26 - 14 =$



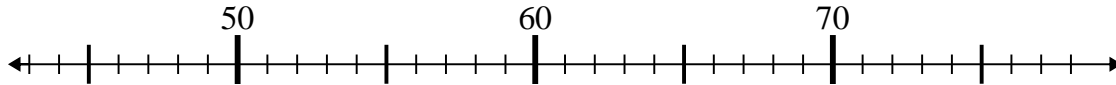
6) $15 + 23 =$



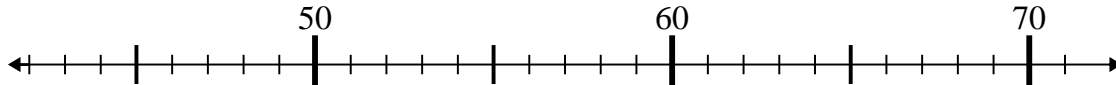
7) $91 + 2 =$



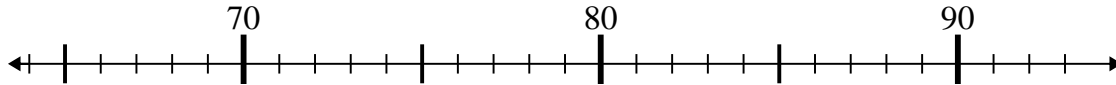
8) $47 + 1 =$



9) $71 - 8 =$



10) $72 + 16 =$

**Answers**1. **20**2. **23**3. **51**4. **38**5. **12**6. **38**7. **93**8. **48**9. **63**10. **88**