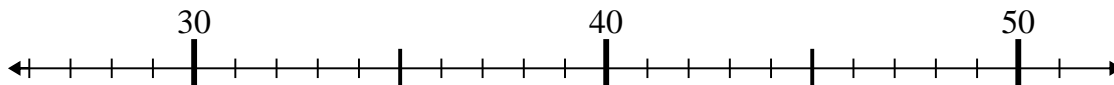




Use the numberlines to solve each problem.

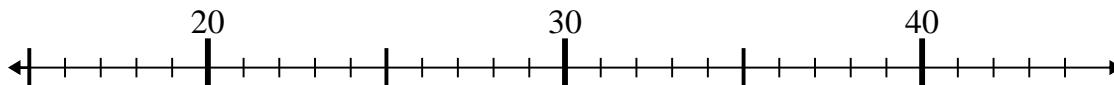
Answers

1) $32 - 5 =$



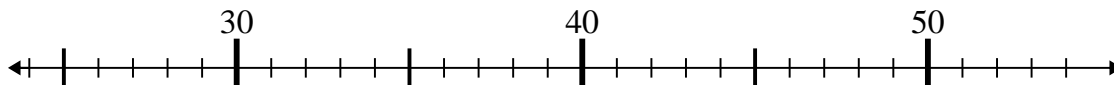
1. _____

2) $16 + 7 =$



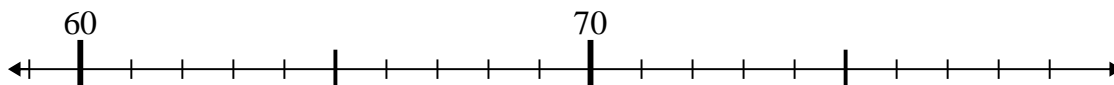
2. _____

3) $25 + 12 =$



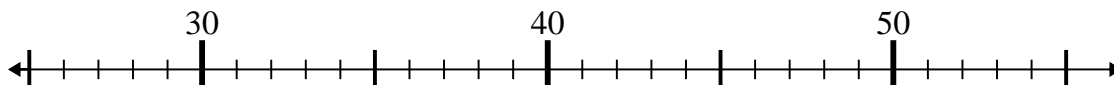
3. _____

4) $75 - 14 =$



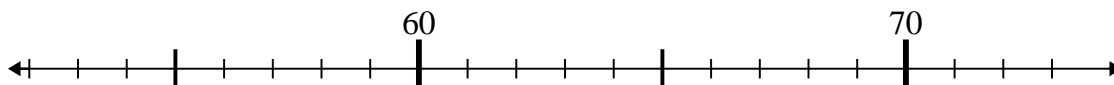
4. _____

5) $28 + 26 =$



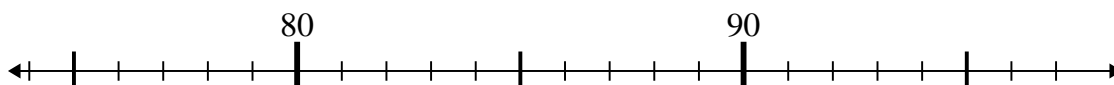
5. _____

6) $65 - 10 =$



6. _____

7) $81 - 2 =$



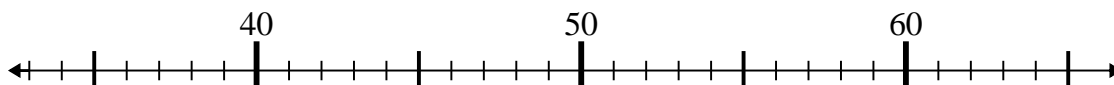
7. _____

8) $95 - 8 =$



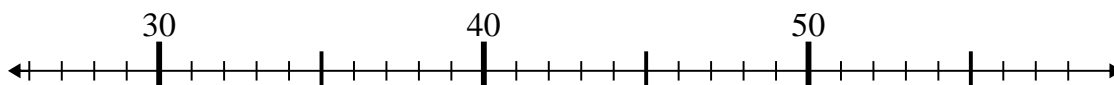
8. _____

9) $48 - 11 =$



9. _____

10) $32 + 18 =$

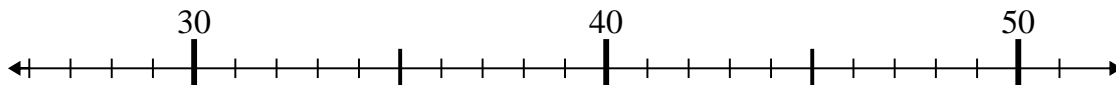


10. _____

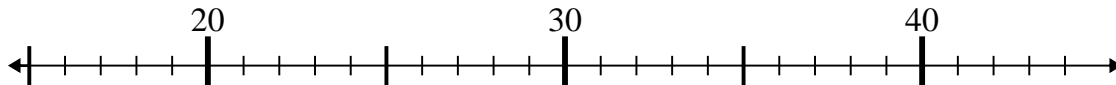


Use the numberlines to solve each problem.

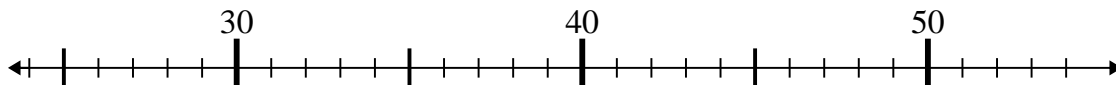
1) $32 - 5 =$



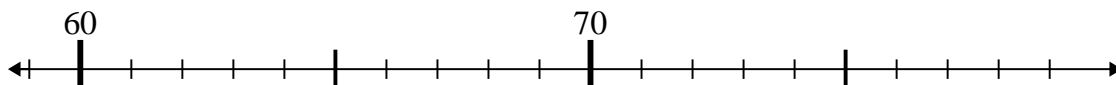
2) $16 + 7 =$



3) $25 + 12 =$



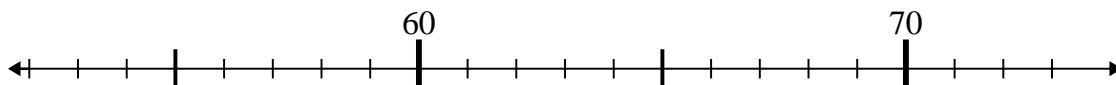
4) $75 - 14 =$



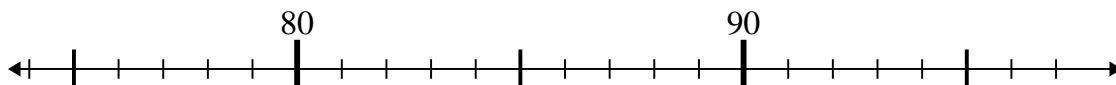
5) $28 + 26 =$



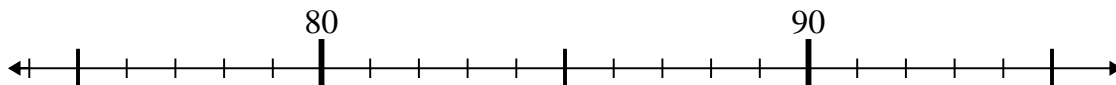
6) $65 - 10 =$



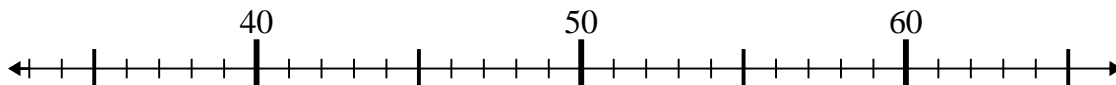
7) $81 - 2 =$



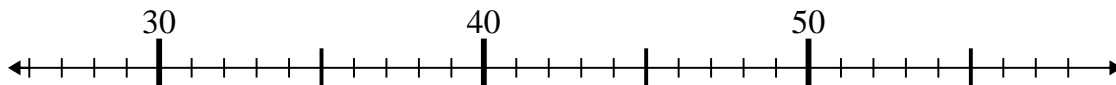
8) $95 - 8 =$



9) $48 - 11 =$



10) $32 + 18 =$

Answers1. **27**2. **23**3. **37**4. **61**5. **54**6. **55**7. **79**8. **87**9. **37**10. **50**