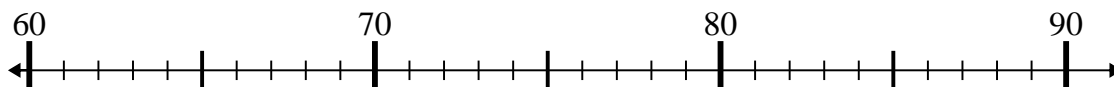




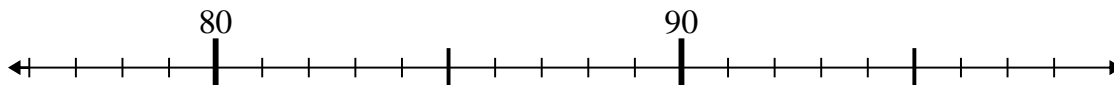
Use the numberlines to solve each problem.

Answers

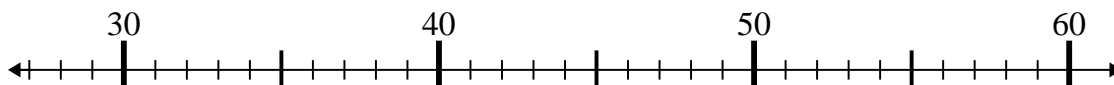
1) $66 + 16 =$



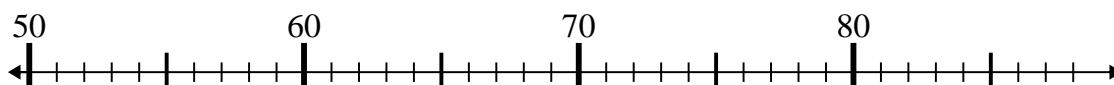
2) $77 + 10 =$



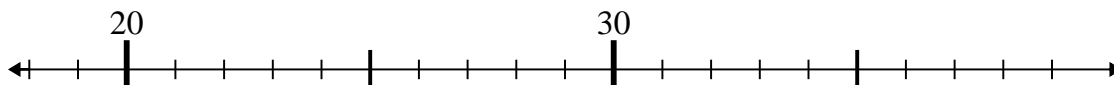
3) $31 + 4 =$



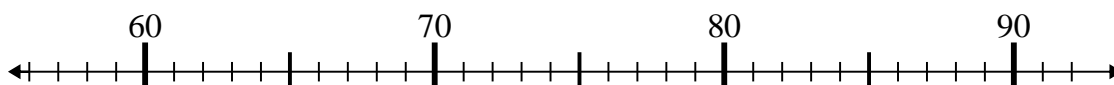
4) $83 - 29 =$



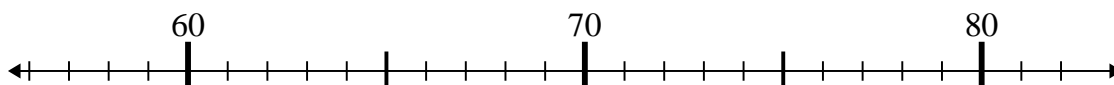
5) $33 + 5 =$



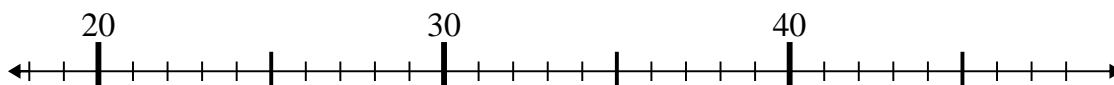
6) $79 - 19 =$



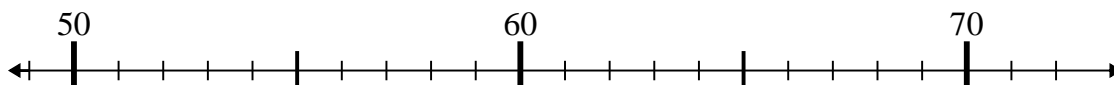
7) $81 - 1 =$



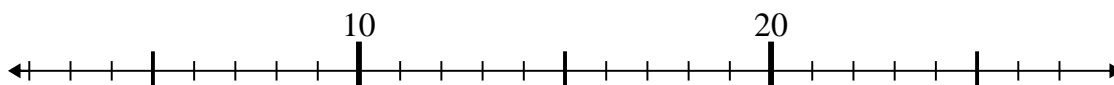
8) $29 + 14 =$



9) $70 - 13 =$



10) $19 - 1 =$

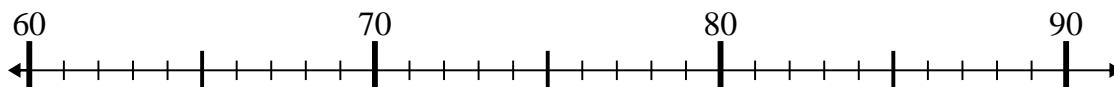


1. _____
2. _____
3. _____
4. _____
5. _____
6. _____
7. _____
8. _____
9. _____
10. _____

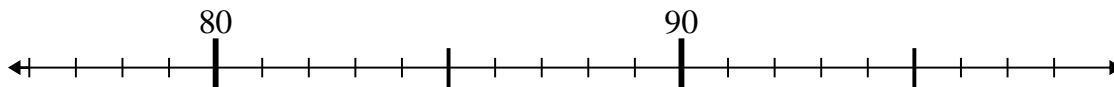


Use the numberlines to solve each problem.

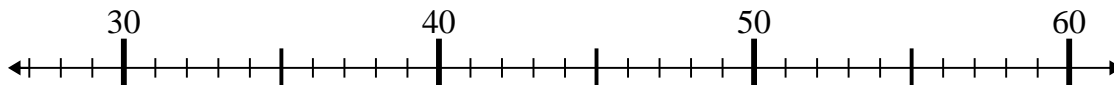
1) $66 + 16 =$



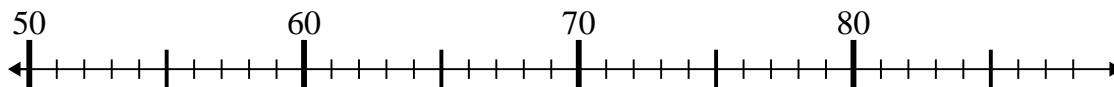
2) $77 + 10 =$



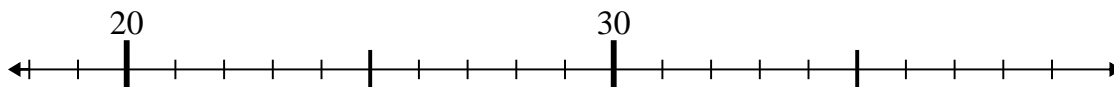
3) $31 + 4 =$



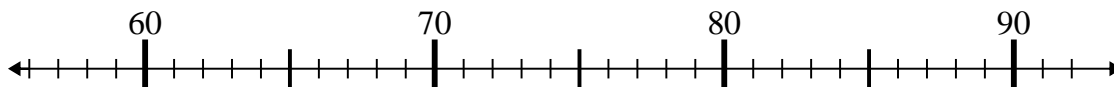
4) $83 - 29 =$



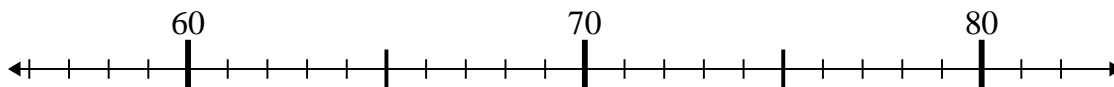
5) $33 + 5 =$



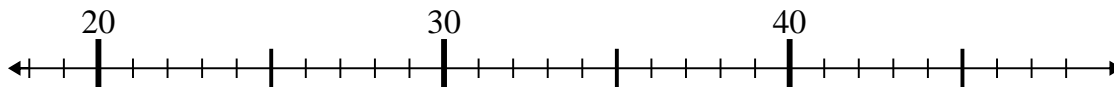
6) $79 - 19 =$



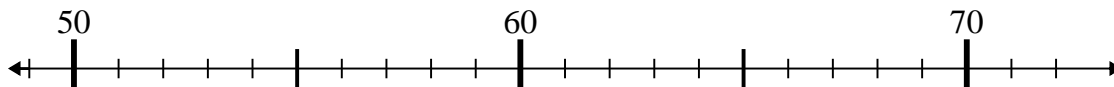
7) $81 - 1 =$



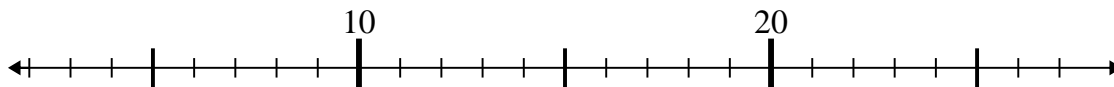
8) $29 + 14 =$



9) $70 - 13 =$



10) $19 - 1 =$

**Answers**1. **82**2. **87**3. **35**4. **54**5. **38**6. **60**7. **80**8. **43**9. **57**10. **18**