



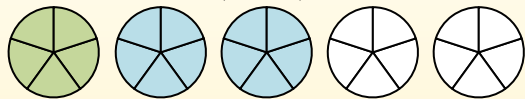
Use the visual model to solve each problem.

Answers

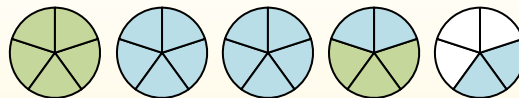
$$1\frac{3}{5} + 2\frac{4}{5} = ?$$



To solve a fraction addition problem one strategy is to shade in the whole amounts first (1 & 2).



Next fill in the fraction amounts ($\frac{3}{5}$ & $\frac{4}{5}$).



When all of the pieces are filled in we can see that $1\frac{3}{5} + 2\frac{4}{5} = 4\frac{2}{5}$

1) $3\frac{3}{4} + 2\frac{3}{4} =$

2) $2\frac{1}{5} + 1\frac{4}{5} =$

3) $2\frac{2}{8} + 3\frac{5}{8} =$

4) $3\frac{2}{3} + 3\frac{1}{3} =$

5) $2\frac{1}{3} + 2\frac{1}{3} =$

6) $2\frac{1}{5} + 3\frac{1}{5} =$

7) $3\frac{1}{3} + 2\frac{1}{3} =$

8) $2\frac{1}{3} + 2\frac{2}{3} =$

9) $2\frac{4}{8} + 2\frac{4}{8} =$

10) $2\frac{4}{10} + 2\frac{5}{10} =$

1. _____

2. _____

3. _____

4. _____

5. _____

6. _____

7. _____

8. _____

9. _____

10. _____



Use the visual model to solve each problem.

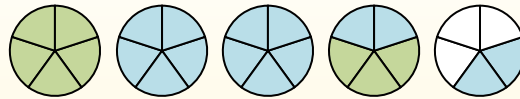
$$1\frac{3}{5} + 2\frac{4}{5} = ?$$



To solve a fraction addition problem one strategy is to shade in the whole amounts first (1 & 2).



Next fill in the fraction amounts ($\frac{3}{5}$ & $\frac{4}{5}$).



When all of the pieces are filled in we can see that $1\frac{3}{5} + 2\frac{4}{5} = 4\frac{2}{5}$

1) $3\frac{3}{4} + 2\frac{3}{4} =$

2) $2\frac{1}{5} + 1\frac{4}{5} =$

3) $2\frac{2}{8} + 3\frac{5}{8} =$

4) $3\frac{2}{3} + 3\frac{1}{3} =$

5) $2\frac{1}{3} + 2\frac{1}{3} =$

6) $2\frac{1}{5} + 3\frac{1}{5} =$

7) $3\frac{1}{3} + 2\frac{1}{3} =$

8) $2\frac{1}{3} + 2\frac{2}{3} =$

9) $2\frac{4}{8} + 2\frac{4}{8} =$

10) $2\frac{4}{10} + 2\frac{5}{10} =$

Answers

1. $6\frac{2}{4}$

2. $4\frac{0}{5}$

3. $5\frac{7}{8}$

4. $7\frac{0}{3}$

5. $4\frac{2}{3}$

6. $5\frac{2}{5}$

7. $5\frac{2}{3}$

8. $5\frac{0}{3}$

9. $5\frac{0}{8}$

10. $4\frac{9}{10}$