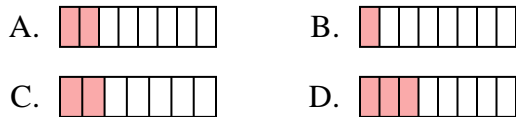
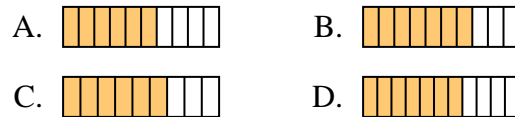


**Determine which choice best answers each question.****Answers**

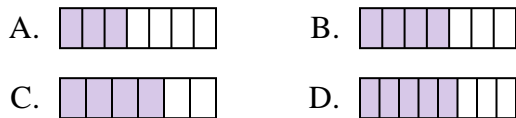
- 1) Which of the shapes below is shaded to represent $\frac{2}{8}$?



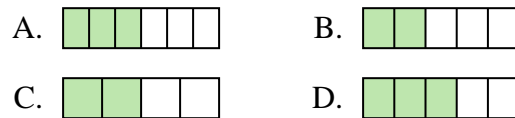
- 2) Which of the shapes below is shaded to represent $\frac{6}{10}$?



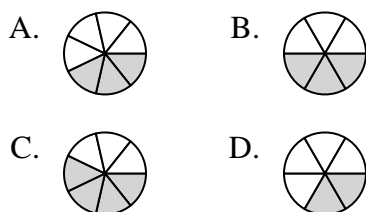
- 3) Which of the shapes below is shaded to represent $\frac{4}{7}$?



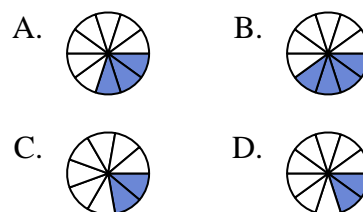
- 4) Which of the shapes below is shaded to represent $\frac{3}{5}$?



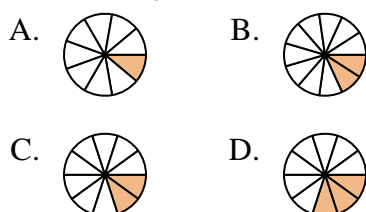
- 5) Which of the shapes below is shaded to represent $\frac{3}{7}$?



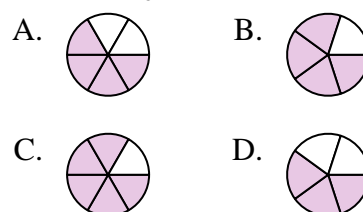
- 6) Which of the shapes below is shaded to represent $\frac{3}{10}$?



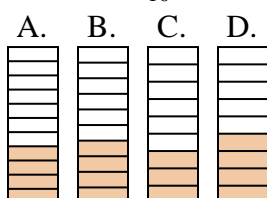
- 7) Which of the shapes below is shaded to represent $\frac{2}{10}$?



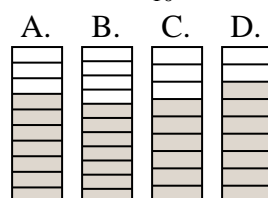
- 8) Which of the shapes below is shaded to represent $\frac{4}{6}$?



- 9) Which of the shapes below is shaded to represent $\frac{4}{10}$?



- 10) Which of the shapes below is shaded to represent $\frac{7}{10}$?



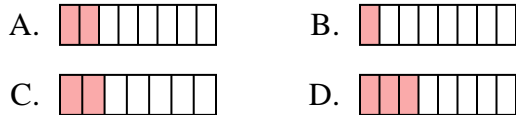
1. _____
2. _____
3. _____
4. _____
5. _____
6. _____
7. _____
8. _____
9. _____
10. _____



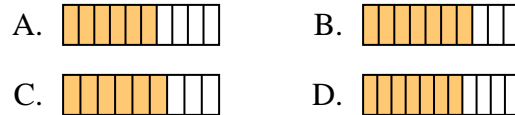
Determine which choice best answers each question.

Answers

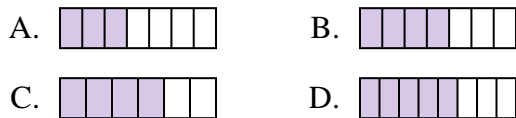
- 1) Which of the shapes below is shaded to represent $\frac{2}{8}$?



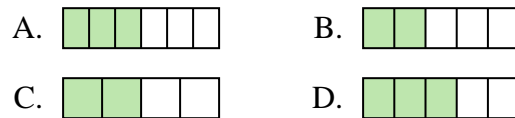
- 2) Which of the shapes below is shaded to represent $\frac{6}{10}$?



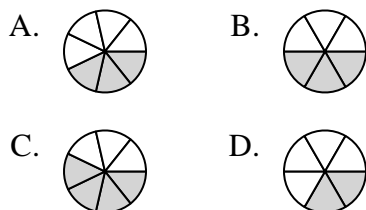
- 3) Which of the shapes below is shaded to represent $\frac{4}{7}$?



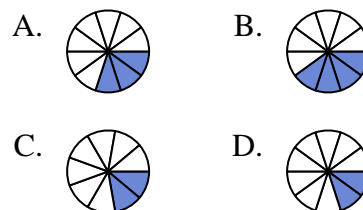
- 4) Which of the shapes below is shaded to represent $\frac{3}{5}$?



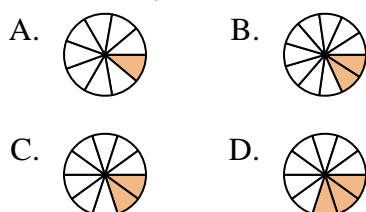
- 5) Which of the shapes below is shaded to represent $\frac{3}{7}$?



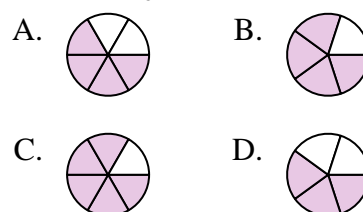
- 6) Which of the shapes below is shaded to represent $\frac{3}{10}$?



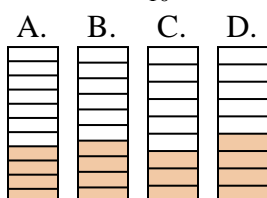
- 7) Which of the shapes below is shaded to represent $\frac{2}{10}$?



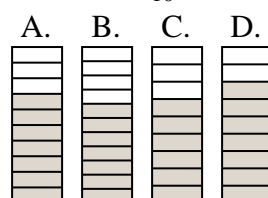
- 8) Which of the shapes below is shaded to represent $\frac{4}{6}$?



- 9) Which of the shapes below is shaded to represent $\frac{4}{10}$?



- 10) Which of the shapes below is shaded to represent $\frac{7}{10}$?



1. **A**
2. **A**
3. **B**
4. **D**
5. **A**
6. **A**
7. **C**
8. **A**
9. **B**
10. **A**