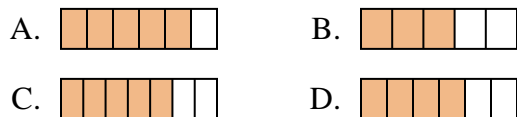




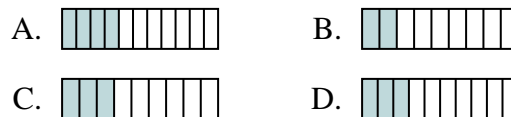
Determine which choice best answers each question.

Answers

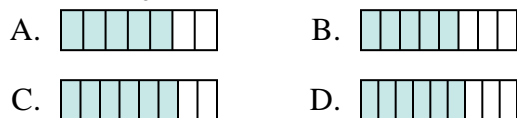
- 1) Which of the shapes below is shaded to represent $\frac{4}{6}$?



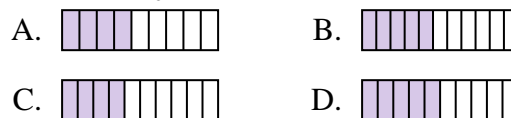
- 2) Which of the shapes below is shaded to represent $\frac{3}{10}$?



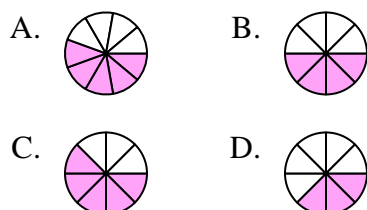
- 3) Which of the shapes below is shaded to represent $\frac{6}{8}$?



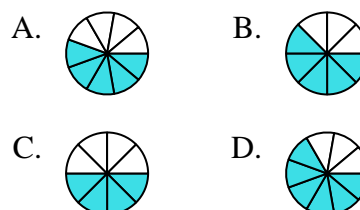
- 4) Which of the shapes below is shaded to represent $\frac{5}{10}$?



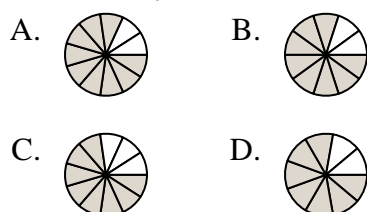
- 5) Which of the shapes below is shaded to represent $\frac{4}{8}$?



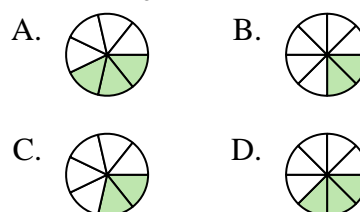
- 6) Which of the shapes below is shaded to represent $\frac{5}{8}$?



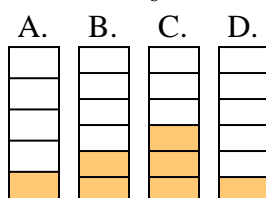
- 7) Which of the shapes below is shaded to represent $\frac{8}{10}$?



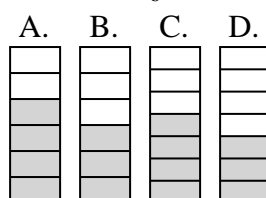
- 8) Which of the shapes below is shaded to represent $\frac{3}{8}$?



- 9) Which of the shapes below is shaded to represent $\frac{2}{6}$?



- 10) Which of the shapes below is shaded to represent $\frac{3}{6}$?



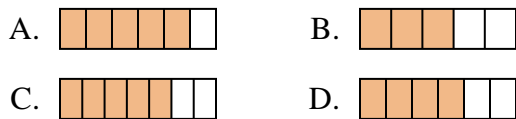
1. _____
2. _____
3. _____
4. _____
5. _____
6. _____
7. _____
8. _____
9. _____
10. _____



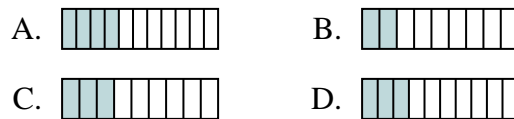
Determine which choice best answers each question.

Answers

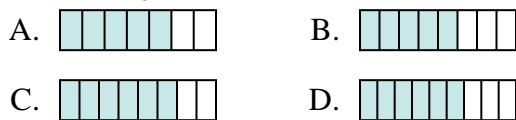
- 1) Which of the shapes below is shaded to represent $\frac{4}{6}$?



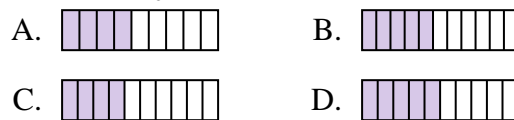
- 2) Which of the shapes below is shaded to represent $\frac{3}{10}$?



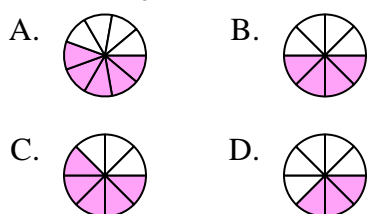
- 3) Which of the shapes below is shaded to represent $\frac{6}{8}$?



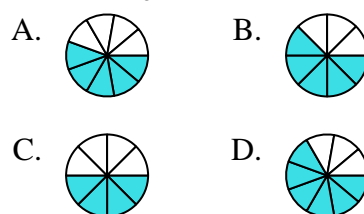
- 4) Which of the shapes below is shaded to represent $\frac{5}{10}$?



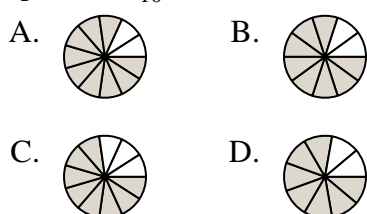
- 5) Which of the shapes below is shaded to represent $\frac{4}{8}$?



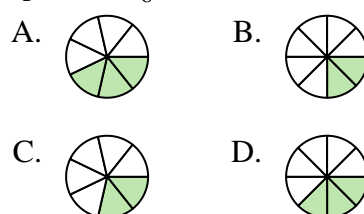
- 6) Which of the shapes below is shaded to represent $\frac{5}{8}$?



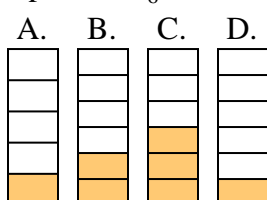
- 7) Which of the shapes below is shaded to represent $\frac{8}{10}$?



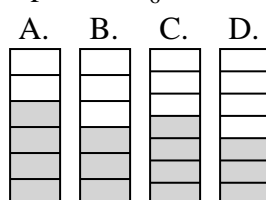
- 8) Which of the shapes below is shaded to represent $\frac{3}{8}$?



- 9) Which of the shapes below is shaded to represent $\frac{2}{6}$?



- 10) Which of the shapes below is shaded to represent $\frac{3}{6}$?



1. **D**
2. **D**
3. **C**
4. **D**
5. **B**
6. **B**
7. **B**
8. **D**
9. **B**
10. **B**