



Solve each problem by marking off the fractions. The first is completed for you.

**Answers****Ex)**  $2 \div \frac{1}{3} = ?$  This is the same as saying: How many  $\frac{1}{3}$  are there in 2 wholes?

1 Whole			1 Whole		

Ex. 6

1. \_\_\_\_\_

**1)**  $3 \div \frac{1}{2} =$

1 Whole		1 Whole		1 Whole	

2. \_\_\_\_\_

3. \_\_\_\_\_

**2)**  $3 \div \frac{1}{5} =$

1 Whole		1 Whole		1 Whole	

4. \_\_\_\_\_

5. \_\_\_\_\_

**3)**  $2 \div \frac{1}{7} =$

1 Whole			1 Whole		

6. \_\_\_\_\_

7. \_\_\_\_\_

**4)**  $4 \div \frac{1}{2} =$

1 Whole		1 Whole		1 Whole		1 Whole	

8. \_\_\_\_\_

9. \_\_\_\_\_

**5)**  $4 \div \frac{1}{7} =$

1 Whole		1 Whole		1 Whole		1 Whole	

**6)**  $5 \div \frac{1}{4} =$

1 Whole		1 Whole		1 Whole		1 Whole		1 Whole	

**7)**  $2 \div \frac{1}{6} =$

1 Whole			1 Whole		

**8)**  $6 \div \frac{1}{4} =$

1 Whole		1 Whole		1 Whole		1 Whole		1 Whole	

**9)**  $3 \div \frac{1}{3} =$

1 Whole		1 Whole		1 Whole	



Solve each problem by marking off the fractions. The first is completed for you.

**Answers**Ex)  $2 \div \frac{1}{3} = ?$  This is the same as saying: How many  $\frac{1}{3}$  are the in 2 wholes?Ex. 6

1 Whole			1 Whole		

1. 61)  $3 \div \frac{1}{2} =$  This is the same as saying: How many  $\frac{1}{2}$  are the in 3 wholes?2. 15

1 Whole		1 Whole		1 Whole	

3. 142)  $3 \div \frac{1}{5} =$  This is the same as saying: How many  $\frac{1}{5}$  are the in 3 wholes?4. 8

1 Whole			1 Whole			1 Whole		

5. 283)  $2 \div \frac{1}{7} =$  This is the same as saying: How many  $\frac{1}{7}$  are the in 2 wholes?6. 20

1 Whole							1 Whole						

7. 124)  $4 \div \frac{1}{2} =$  This is the same as saying: How many  $\frac{1}{2}$  are the in 4 wholes?8. 24

1 Whole		1 Whole		1 Whole		1 Whole	

9. 95)  $4 \div \frac{1}{7} =$  This is the same as saying: How many  $\frac{1}{7}$  are the in 4 wholes?

1 Whole			1 Whole			1 Whole			1 Whole		

6)  $5 \div \frac{1}{4} =$  This is the same as saying: How many  $\frac{1}{4}$  are the in 5 wholes?

1 Whole			1 Whole			1 Whole			1 Whole			1 Whole		

7)  $2 \div \frac{1}{6} =$  This is the same as saying: How many  $\frac{1}{6}$  are the in 2 wholes?

1 Whole					1 Whole				

8)  $6 \div \frac{1}{4} =$  This is the same as saying: How many  $\frac{1}{4}$  are the in 6 wholes?

1 Whole			1 Whole			1 Whole			1 Whole			1 Whole			1 Whole		

9)  $3 \div \frac{1}{3} =$  This is the same as saying: How many  $\frac{1}{3}$  are the in 3 wholes?

1 Whole			1 Whole			1 Whole		



Solve each problem by marking off the fractions. The first is completed for you.

**Answers****Ex)**  $3 \div \frac{1}{2} = ?$  This is the same as saying: How many  $\frac{1}{2}$  are there in 3 wholes?

1 Whole	1 Whole	1 Whole
<div><div></div><div></div></div>	<div><div></div><div></div></div>	<div><div></div><div></div></div>

Ex. 6

1. \_\_\_\_\_

1)  $6 \div \frac{1}{5} =$

1 Whole	1 Whole	1 Whole	1 Whole	1 Whole	1 Whole
<div><div></div><div></div></div>	<div><div></div><div></div></div>	<div><div></div><div></div></div>	<div><div></div><div></div></div>	<div><div></div><div></div></div>	<div><div></div><div></div></div>

2. \_\_\_\_\_

3. \_\_\_\_\_

2)  $5 \div \frac{1}{2} =$

1 Whole	1 Whole	1 Whole	1 Whole	1 Whole
<div><div></div><div></div></div>	<div><div></div><div></div></div>	<div><div></div><div></div></div>	<div><div></div><div></div></div>	<div><div></div><div></div></div>

4. \_\_\_\_\_

5. \_\_\_\_\_

3)  $4 \div \frac{1}{7} =$

1 Whole	1 Whole	1 Whole	1 Whole
<div><div></div><div></div></div>	<div><div></div><div></div></div>	<div><div></div><div></div></div>	<div><div></div><div></div></div>

6. \_\_\_\_\_

7. \_\_\_\_\_

4)  $6 \div \frac{1}{3} =$

1 Whole	1 Whole	1 Whole	1 Whole	1 Whole	1 Whole
<div><div></div><div></div></div>	<div><div></div><div></div></div>	<div><div></div><div></div></div>	<div><div></div><div></div></div>	<div><div></div><div></div></div>	<div><div></div><div></div></div>

8. \_\_\_\_\_

9. \_\_\_\_\_

5)  $2 \div \frac{1}{7} =$

1 Whole	1 Whole
<div><div></div><div></div></div>	<div><div></div><div></div></div>

6)  $2 \div \frac{1}{4} =$

1 Whole	1 Whole
<div><div></div><div></div></div>	<div><div></div><div></div></div>

7)  $2 \div \frac{1}{5} =$

1 Whole	1 Whole
<div><div></div><div></div></div>	<div><div></div><div></div></div>

8)  $5 \div \frac{1}{5} =$

1 Whole	1 Whole	1 Whole	1 Whole	1 Whole
<div><div></div><div></div></div>	<div><div></div><div></div></div>	<div><div></div><div></div></div>	<div><div></div><div></div></div>	<div><div></div><div></div></div>

9)  $5 \div \frac{1}{6} =$

1 Whole	1 Whole	1 Whole	1 Whole	1 Whole
<div><div></div><div></div></div>	<div><div></div><div></div></div>	<div><div></div><div></div></div>	<div><div></div><div></div></div>	<div><div></div><div></div></div>



Solve each problem by marking off the fractions. The first is completed for you.

**Answers**Ex)  $3 \div \frac{1}{2} = ?$  This is the same as saying: How many  $\frac{1}{2}$  are the in 3 wholes?Ex. 6

1 Whole	1 Whole	1 Whole
<div><div></div><div></div><div></div><div></div><div></div><div></div><div></div><div></div><div></div><div></div></div>	<div><div></div><div></div><div></div><div></div><div></div><div></div><div></div><div></div><div></div><div></div></div>	<div><div></div><div></div><div></div><div></div><div></div><div></div><div></div><div></div><div></div><div></div></div>

1. 301)  $6 \div \frac{1}{5} =$  This is the same as saying: How many  $\frac{1}{5}$  are the in 6 wholes?2. 10

1 Whole	1 Whole	1 Whole	1 Whole	1 Whole	1 Whole
<div><div></div><div></div><div></div><div></div><div></div><div></div><div></div><div></div><div></div><div></div></div>	<div><div></div><div></div><div></div><div></div><div></div><div></div><div></div><div></div><div></div><div></div></div>	<div><div></div><div></div><div></div><div></div><div></div><div></div><div></div><div></div><div></div><div></div></div>	<div><div></div><div></div><div></div><div></div><div></div><div></div><div></div><div></div><div></div><div></div></div>	<div><div></div><div></div><div></div><div></div><div></div><div></div><div></div><div></div><div></div><div></div></div>	<div><div></div><div></div><div></div><div></div><div></div><div></div><div></div><div></div><div></div><div></div></div>

3. 282)  $5 \div \frac{1}{2} =$  This is the same as saying: How many  $\frac{1}{2}$  are the in 5 wholes?4. 18

1 Whole	1 Whole	1 Whole	1 Whole	1 Whole
<div><div></div><div></div><div></div><div></div><div></div><div></div><div></div><div></div><div></div><div></div></div>	<div><div></div><div></div><div></div><div></div><div></div><div></div><div></div><div></div><div></div><div></div></div>	<div><div></div><div></div><div></div><div></div><div></div><div></div><div></div><div></div><div></div><div></div></div>	<div><div></div><div></div><div></div><div></div><div></div><div></div><div></div><div></div><div></div><div></div></div>	<div><div></div><div></div><div></div><div></div><div></div><div></div><div></div><div></div><div></div><div></div></div>

5. 143)  $4 \div \frac{1}{7} =$  This is the same as saying: How many  $\frac{1}{7}$  are the in 4 wholes?6. 8

1 Whole	1 Whole	1 Whole	1 Whole
<div><div></div><div></div><div></div><div></div><div></div><div></div><div></div><div></div><div></div><div></div></div>	<div><div></div><div></div><div></div><div></div><div></div><div></div><div></div><div></div><div></div><div></div></div>	<div><div></div><div></div><div></div><div></div><div></div><div></div><div></div><div></div><div></div><div></div></div>	<div><div></div><div></div><div></div><div></div><div></div><div></div><div></div><div></div><div></div><div></div></div>

7. 104)  $6 \div \frac{1}{3} =$  This is the same as saying: How many  $\frac{1}{3}$  are the in 6 wholes?8. 25

1 Whole	1 Whole	1 Whole	1 Whole	1 Whole	1 Whole
<div><div></div><div></div><div></div><div></div><div></div><div></div><div></div><div></div><div></div><div></div></div>	<div><div></div><div></div><div></div><div></div><div></div><div></div><div></div><div></div><div></div><div></div></div>	<div><div></div><div></div><div></div><div></div><div></div><div></div><div></div><div></div><div></div><div></div></div>	<div><div></div><div></div><div></div><div></div><div></div><div></div><div></div><div></div><div></div><div></div></div>	<div><div></div><div></div><div></div><div></div><div></div><div></div><div></div><div></div><div></div><div></div></div>	<div><div></div><div></div><div></div><div></div><div></div><div></div><div></div><div></div><div></div><div></div></div>

9. 305)  $2 \div \frac{1}{7} =$  This is the same as saying: How many  $\frac{1}{7}$  are the in 2 wholes?

1 Whole	1 Whole
<div><div></div><div></div><div></div><div></div><div></div><div></div><div></div><div></div><div></div><div></div></div>	<div><div></div><div></div><div></div><div></div><div></div><div></div><div></div><div></div><div></div><div></div></div>

6)  $2 \div \frac{1}{4} =$  This is the same as saying: How many  $\frac{1}{4}$  are the in 2 wholes?

1 Whole	1 Whole
<div><div></div><div></div><div></div><div></div><div></div><div></div><div></div><div></div><div></div><div></div></div>	<div><div></div><div></div><div></div><div></div><div></div><div></div><div></div><div></div><div></div><div></div></div>

7)  $2 \div \frac{1}{5} =$  This is the same as saying: How many  $\frac{1}{5}$  are the in 2 wholes?

1 Whole	1 Whole
<div><div></div><div></div><div></div><div></div><div></div><div></div><div></div><div></div><div></div><div></div></div>	<div><div></div><div></div><div></div><div></div><div></div><div></div><div></div><div></div><div></div><div></div></div>

8)  $5 \div \frac{1}{5} =$  This is the same as saying: How many  $\frac{1}{5}$  are the in 5 wholes?

1 Whole	1 Whole	1 Whole	1 Whole	1 Whole
<div><div></div><div></div><div></div><div></div><div></div><div></div><div></div><div></div><div></div><div></div></div>	<div><div></div><div></div><div></div><div></div><div></div><div></div><div></div><div></div><div></div><div></div></div>	<div><div></div><div></div><div></div><div></div><div></div><div></div><div></div><div></div><div></div><div></div></div>	<div><div></div><div></div><div></div><div></div><div></div><div></div><div></div><div></div><div></div><div></div></div>	<div><div></div><div></div><div></div><div></div><div></div><div></div><div></div><div></div><div></div><div></div></div>

9)  $5 \div \frac{1}{6} =$  This is the same as saying: How many  $\frac{1}{6}$  are the in 5 wholes?

1 Whole	1 Whole	1 Whole	1 Whole	1 Whole
<div><div></div><div></div><div></div><div></div><div></div><div></div><div></div><div></div><div></div><div></div></div>	<div><div></div><div></div><div></div><div></div><div></div><div></div><div></div><div></div><div></div><div></div></div>	<div><div></div><div></div><div></div><div></div><div></div><div></div><div></div><div></div><div></div><div></div></div>	<div><div></div><div></div><div></div><div></div><div></div><div></div><div></div><div></div><div></div><div></div></div>	<div><div></div><div></div><div></div><div></div><div></div><div></div><div></div><div></div><div></div><div></div></div>



Solve each problem by marking off the fractions. The first is completed for you.

**Answers****Ex)**  $3 \div \frac{1}{5} = ?$  This is the same as saying: How many  $\frac{1}{5}$  are there in 3 wholes?

1 Whole					1 Whole					1 Whole				

Ex. **15**

1. \_\_\_\_\_

2. \_\_\_\_\_

3. \_\_\_\_\_

4. \_\_\_\_\_

5. \_\_\_\_\_

6. \_\_\_\_\_

7. \_\_\_\_\_

8. \_\_\_\_\_

9. \_\_\_\_\_

1)  $4 \div \frac{1}{4} =$

1 Whole				1 Whole				1 Whole				1 Whole			

2)  $2 \div \frac{1}{3} =$

1 Whole						1 Whole					

3)  $3 \div \frac{1}{3} =$

1 Whole					1 Whole					1 Whole				

4)  $3 \div \frac{1}{4} =$

1 Whole				1 Whole				1 Whole			

5)  $2 \div \frac{1}{6} =$

1 Whole			1 Whole		

6)  $6 \div \frac{1}{2} =$

1 Whole		1 Whole		1 Whole		1 Whole		1 Whole		1 Whole	

7)  $5 \div \frac{1}{6} =$

1 Whole			1 Whole			1 Whole			1 Whole		

8)  $6 \div \frac{1}{4} =$

1 Whole		1 Whole		1 Whole		1 Whole		1 Whole		1 Whole	

9)  $5 \div \frac{1}{3} =$

1 Whole			1 Whole			1 Whole			1 Whole		



Solve each problem by marking off the fractions. The first is completed for you.

**Answers**Ex)  $3 \div \frac{1}{5} = ?$  This is the same as saying: How many  $\frac{1}{5}$  are the in 3 wholes?Ex. **15**

1 Whole					1 Whole					1 Whole				

1. **16**1)  $4 \div \frac{1}{4} =$  This is the same as saying: How many  $\frac{1}{4}$  are the in 4 wholes?2. **6**

1 Whole				1 Whole				1 Whole				1 Whole			

3. **9**2)  $2 \div \frac{1}{3} =$  This is the same as saying: How many  $\frac{1}{3}$  are the in 2 wholes?4. **12**

1 Whole						1 Whole					

5. **12**3)  $3 \div \frac{1}{3} =$  This is the same as saying: How many  $\frac{1}{3}$  are the in 3 wholes?6. **12**

1 Whole				1 Whole				1 Whole			

7. **30**4)  $3 \div \frac{1}{4} =$  This is the same as saying: How many  $\frac{1}{4}$  are the in 3 wholes?8. **24**

1 Whole				1 Whole				1 Whole			

9. **15**5)  $2 \div \frac{1}{6} =$  This is the same as saying: How many  $\frac{1}{6}$  are the in 2 wholes?

1 Whole						1 Whole					

6)  $6 \div \frac{1}{2} =$  This is the same as saying: How many  $\frac{1}{2}$  are the in 6 wholes?

1 Whole	1 Whole	1 Whole	1 Whole	1 Whole	1 Whole

7)  $5 \div \frac{1}{6} =$  This is the same as saying: How many  $\frac{1}{6}$  are the in 5 wholes?

1 Whole						1 Whole						1 Whole						1 Whole						1 Whole						

8)  $6 \div \frac{1}{4} =$  This is the same as saying: How many  $\frac{1}{4}$  are the in 6 wholes?

1 Whole	1 Whole	1 Whole	1 Whole	1 Whole	1 Whole
<div><div></div><div></div><div></div><div></div></div>	<div><div></div><div></div><div></div><div></div></div>	<div><div></div><div></div><div></div><div></div></div>	<div><div></div><div></div><div></div><div></div></div>	<div><div></div><div></div><div></div><div></div></div>	<div><div></div><div></div><div></div><div></div></div>

9)  $5 \div \frac{1}{3} =$  This is the same as saying: How many  $\frac{1}{3}$  are the in 5 wholes?

1 Whole				1 Whole				1 Whole				1 Whole				1 Whole			



Solve each problem by marking off the fractions. The first is completed for you.

**Answers****Ex)**  $4 \div \frac{1}{5} = ?$  This is the same as saying: How many  $\frac{1}{5}$  are there in 4 wholes?

1 Whole					1 Whole					1 Whole					1 Whole				

Ex. 20

1. \_\_\_\_\_

2. \_\_\_\_\_

3. \_\_\_\_\_

4. \_\_\_\_\_

5. \_\_\_\_\_

6. \_\_\_\_\_

7. \_\_\_\_\_

8. \_\_\_\_\_

9. \_\_\_\_\_

1)  $3 \div \frac{1}{3} =$

1 Whole					1 Whole					1 Whole				

2)  $5 \div \frac{1}{5} =$

1 Whole					1 Whole					1 Whole					1 Whole				

3)  $3 \div \frac{1}{2} =$

1 Whole					1 Whole					1 Whole				

4)  $6 \div \frac{1}{5} =$

1 Whole					1 Whole					1 Whole					1 Whole				

5)  $2 \div \frac{1}{6} =$

1 Whole										1 Whole									

6)  $4 \div \frac{1}{2} =$

1 Whole					1 Whole					1 Whole					1 Whole				

7)  $2 \div \frac{1}{4} =$

1 Whole										1 Whole									

8)  $6 \div \frac{1}{7} =$

1 Whole					1 Whole					1 Whole					1 Whole				

9)  $3 \div \frac{1}{7} =$

1 Whole					1 Whole					1 Whole				



Solve each problem by marking off the fractions. The first is completed for you.

**Answers**Ex)  $4 \div \frac{1}{5} = ?$  This is the same as saying: How many  $\frac{1}{5}$  are the in 4 wholes?Ex. **20**

1 Whole					1 Whole					1 Whole					1 Whole				

1. **9**1)  $3 \div \frac{1}{3} =$  This is the same as saying: How many  $\frac{1}{3}$  are the in 3 wholes?2. **25**

1 Whole			1 Whole			1 Whole		

3. **6**2)  $5 \div \frac{1}{5} =$  This is the same as saying: How many  $\frac{1}{5}$  are the in 5 wholes?4. **30**

1 Whole					1 Whole					1 Whole					1 Whole				

5. **12**3)  $3 \div \frac{1}{2} =$  This is the same as saying: How many  $\frac{1}{2}$  are the in 3 wholes?6. **8**

1 Whole				1 Whole				1 Whole			

7. **8**4)  $6 \div \frac{1}{5} =$  This is the same as saying: How many  $\frac{1}{5}$  are the in 6 wholes?8. **42**

1 Whole					1 Whole					1 Whole					1 Whole				

9. **21**5)  $2 \div \frac{1}{6} =$  This is the same as saying: How many  $\frac{1}{6}$  are the in 2 wholes?

1 Whole						1 Whole					

6)  $4 \div \frac{1}{2} =$  This is the same as saying: How many  $\frac{1}{2}$  are the in 4 wholes?

1 Whole			1 Whole			1 Whole			1 Whole		

7)  $2 \div \frac{1}{4} =$  This is the same as saying: How many  $\frac{1}{4}$  are the in 2 wholes?

1 Whole				1 Whole			

8)  $6 \div \frac{1}{7} =$  This is the same as saying: How many  $\frac{1}{7}$  are the in 6 wholes?

1 Whole							1 Whole							1 Whole						

9)  $3 \div \frac{1}{7} =$  This is the same as saying: How many  $\frac{1}{7}$  are the in 3 wholes?

1 Whole							1 Whole							1 Whole						





Solve each problem by marking off the fractions. The first is completed for you.

**Answers****Ex)**  $3 \div \frac{1}{4} = ?$  This is the same as saying: How many  $\frac{1}{4}$  are there in 3 wholes?Ex. 12

1 Whole				1 Whole				1 Whole			

1. \_\_\_\_\_

**1)**  $4 \div \frac{1}{4} =$

2. \_\_\_\_\_

1 Whole				1 Whole				1 Whole			

3. \_\_\_\_\_

**2)**  $6 \div \frac{1}{7} =$

4. \_\_\_\_\_

1 Whole		1 Whole		1 Whole		1 Whole		1 Whole		1 Whole	

5. \_\_\_\_\_

**3)**  $6 \div \frac{1}{3} =$

6. \_\_\_\_\_

1 Whole		1 Whole		1 Whole		1 Whole		1 Whole		1 Whole	

7. \_\_\_\_\_

**4)**  $6 \div \frac{1}{2} =$

8. \_\_\_\_\_

1 Whole		1 Whole		1 Whole		1 Whole		1 Whole		1 Whole	

9. \_\_\_\_\_

**5)**  $3 \div \frac{1}{6} =$

1 Whole		1 Whole		1 Whole	

**6)**  $5 \div \frac{1}{2} =$

1 Whole		1 Whole		1 Whole		1 Whole		1 Whole	

**7)**  $2 \div \frac{1}{3} =$

1 Whole		1 Whole	

**8)**  $3 \div \frac{1}{3} =$

1 Whole		1 Whole		1 Whole	

**9)**  $4 \div \frac{1}{5} =$

1 Whole		1 Whole		1 Whole		1 Whole	



Solve each problem by marking off the fractions. The first is completed for you.

**Answers**Ex)  $3 \div \frac{1}{4} = ?$  This is the same as saying: How many  $\frac{1}{4}$  are the in 3 wholes?Ex. **12**

1 Whole				1 Whole				1 Whole			

1. **16**1)  $4 \div \frac{1}{4} =$  This is the same as saying: How many  $\frac{1}{4}$  are the in 4 wholes?2. **42**

1 Whole				1 Whole				1 Whole				1 Whole			

3. **18**2)  $6 \div \frac{1}{7} =$  This is the same as saying: How many  $\frac{1}{7}$  are the in 6 wholes?4. **12**

1 Whole				1 Whole				1 Whole				1 Whole				1 Whole			

5. **18**3)  $6 \div \frac{1}{3} =$  This is the same as saying: How many  $\frac{1}{3}$  are the in 6 wholes?6. **10**

1 Whole				1 Whole				1 Whole				1 Whole				1 Whole			

7. **6**4)  $6 \div \frac{1}{2} =$  This is the same as saying: How many  $\frac{1}{2}$  are the in 6 wholes?8. **9**

1 Whole				1 Whole				1 Whole				1 Whole				1 Whole			

9. **20**5)  $3 \div \frac{1}{6} =$  This is the same as saying: How many  $\frac{1}{6}$  are the in 3 wholes?

1 Whole				1 Whole				1 Whole			

6)  $5 \div \frac{1}{2} =$  This is the same as saying: How many  $\frac{1}{2}$  are the in 5 wholes?

1 Whole				1 Whole				1 Whole				1 Whole				1 Whole			

7)  $2 \div \frac{1}{3} =$  This is the same as saying: How many  $\frac{1}{3}$  are the in 2 wholes?

1 Whole				1 Whole			

8)  $3 \div \frac{1}{3} =$  This is the same as saying: How many  $\frac{1}{3}$  are the in 3 wholes?

1 Whole				1 Whole				1 Whole			

9)  $4 \div \frac{1}{5} =$  This is the same as saying: How many  $\frac{1}{5}$  are the in 4 wholes?

1 Whole				1 Whole				1 Whole				1 Whole			



Solve each problem by marking off the fractions. The first is completed for you.

**Answers****Ex)**  $6 \div \frac{1}{6} = ?$  This is the same as saying: How many  $\frac{1}{6}$  are there in 6 wholes?Ex. **36**

1 Whole	1 Whole	1 Whole	1 Whole	1 Whole	1 Whole
<div><div></div><div></div><div></div><div></div><div></div><div></div></div>	<div><div></div><div></div><div></div><div></div><div></div><div></div></div>	<div><div></div><div></div><div></div><div></div><div></div><div></div></div>	<div><div></div><div></div><div></div><div></div><div></div><div></div></div>	<div><div></div><div></div><div></div><div></div><div></div><div></div></div>	<div><div></div><div></div><div></div><div></div><div></div><div></div></div>

1. \_\_\_\_\_

**1)**  $3 \div \frac{1}{6} =$

2. \_\_\_\_\_

1 Whole	1 Whole	1 Whole
<div><div></div><div></div><div></div><div></div><div></div><div></div></div>	<div><div></div><div></div><div></div><div></div><div></div><div></div></div>	<div><div></div><div></div><div></div><div></div><div></div><div></div></div>

3. \_\_\_\_\_

**2)**  $6 \div \frac{1}{4} =$

4. \_\_\_\_\_

1 Whole	1 Whole	1 Whole	1 Whole	1 Whole	1 Whole
<div><div></div><div></div><div></div><div></div><div></div><div></div></div>	<div><div></div><div></div><div></div><div></div><div></div><div></div></div>	<div><div></div><div></div><div></div><div></div><div></div><div></div></div>	<div><div></div><div></div><div></div><div></div><div></div><div></div></div>	<div><div></div><div></div><div></div><div></div><div></div><div></div></div>	<div><div></div><div></div><div></div><div></div><div></div><div></div></div>

5. \_\_\_\_\_

**3)**  $4 \div \frac{1}{2} =$

6. \_\_\_\_\_

1 Whole	1 Whole	1 Whole	1 Whole
<div><div></div><div></div><div></div><div></div><div></div><div></div></div>	<div><div></div><div></div><div></div><div></div><div></div><div></div></div>	<div><div></div><div></div><div></div><div></div><div></div><div></div></div>	<div><div></div><div></div><div></div><div></div><div></div><div></div></div>

7. \_\_\_\_\_

**4)**  $2 \div \frac{1}{5} =$

8. \_\_\_\_\_

1 Whole	1 Whole
<div><div></div><div></div><div></div><div></div><div></div><div></div></div>	<div><div></div><div></div><div></div><div></div><div></div><div></div></div>

9. \_\_\_\_\_

**5)**  $5 \div \frac{1}{5} =$

1 Whole	1 Whole	1 Whole	1 Whole	1 Whole
<div><div></div><div></div><div></div><div></div><div></div><div></div></div>	<div><div></div><div></div><div></div><div></div><div></div><div></div></div>	<div><div></div><div></div><div></div><div></div><div></div><div></div></div>	<div><div></div><div></div><div></div><div></div><div></div><div></div></div>	<div><div></div><div></div><div></div><div></div><div></div><div></div></div>

**6)**  $3 \div \frac{1}{5} =$

1 Whole	1 Whole	1 Whole
<div><div></div><div></div><div></div><div></div><div></div><div></div></div>	<div><div></div><div></div><div></div><div></div><div></div><div></div></div>	<div><div></div><div></div><div></div><div></div><div></div><div></div></div>

**7)**  $2 \div \frac{1}{7} =$

1 Whole	1 Whole
<div><div></div><div></div><div></div><div></div><div></div><div></div></div>	<div><div></div><div></div><div></div><div></div><div></div><div></div></div>

**8)**  $6 \div \frac{1}{7} =$

1 Whole	1 Whole	1 Whole	1 Whole	1 Whole	1 Whole
<div><div></div><div></div><div></div><div></div><div></div><div></div></div>	<div><div></div><div></div><div></div><div></div><div></div><div></div></div>	<div><div></div><div></div><div></div><div></div><div></div><div></div></div>	<div><div></div><div></div><div></div><div></div><div></div><div></div></div>	<div><div></div><div></div><div></div><div></div><div></div><div></div></div>	<div><div></div><div></div><div></div><div></div><div></div><div></div></div>

**9)**  $6 \div \frac{1}{3} =$

1 Whole	1 Whole	1 Whole	1 Whole	1 Whole	1 Whole
<div><div></div><div></div><div></div><div></div><div></div><div></div></div>	<div><div></div><div></div><div></div><div></div><div></div><div></div></div>	<div><div></div><div></div><div></div><div></div><div></div><div></div></div>	<div><div></div><div></div><div></div><div></div><div></div><div></div></div>	<div><div></div><div></div><div></div><div></div><div></div><div></div></div>	<div><div></div><div></div><div></div><div></div><div></div><div></div></div>



Solve each problem by marking off the fractions. The first is completed for you.

**Answers**Ex)  $6 \div \frac{1}{6} = ?$  This is the same as saying: How many  $\frac{1}{6}$  are the in 6 wholes?Ex. **36**

1 Whole	1 Whole	1 Whole	1 Whole	1 Whole	1 Whole
<div><div></div><div></div><div></div><div></div><div></div><div></div></div>	<div><div></div><div></div><div></div><div></div><div></div><div></div></div>	<div><div></div><div></div><div></div><div></div><div></div><div></div></div>	<div><div></div><div></div><div></div><div></div><div></div><div></div></div>	<div><div></div><div></div><div></div><div></div><div></div><div></div></div>	<div><div></div><div></div><div></div><div></div><div></div><div></div></div>

1. **18**1)  $3 \div \frac{1}{6} =$  This is the same as saying: How many  $\frac{1}{6}$  are the in 3 wholes?2. **24**

1 Whole	1 Whole	1 Whole
<div><div></div><div></div><div></div><div></div><div></div><div></div></div>	<div><div></div><div></div><div></div><div></div><div></div><div></div></div>	<div><div></div><div></div><div></div><div></div><div></div><div></div></div>

3. **8**2)  $6 \div \frac{1}{4} =$  This is the same as saying: How many  $\frac{1}{4}$  are the in 6 wholes?4. **10**

1 Whole	1 Whole	1 Whole	1 Whole	1 Whole	1 Whole
<div><div></div><div></div><div></div><div></div></div>	<div><div></div><div></div><div></div><div></div></div>	<div><div></div><div></div><div></div><div></div></div>	<div><div></div><div></div><div></div><div></div></div>	<div><div></div><div></div><div></div><div></div></div>	<div><div></div><div></div><div></div><div></div></div>

5. **25**3)  $4 \div \frac{1}{2} =$  This is the same as saying: How many  $\frac{1}{2}$  are the in 4 wholes?6. **15**

1 Whole	1 Whole	1 Whole	1 Whole
<div><div></div><div></div></div>	<div><div></div><div></div></div>	<div><div></div><div></div></div>	<div><div></div><div></div></div>

7. **14**4)  $2 \div \frac{1}{5} =$  This is the same as saying: How many  $\frac{1}{5}$  are the in 2 wholes?8. **42**

1 Whole	1 Whole
<div><div></div><div></div><div></div><div></div><div></div></div>	<div><div></div><div></div><div></div><div></div><div></div></div>

9. **18**5)  $5 \div \frac{1}{5} =$  This is the same as saying: How many  $\frac{1}{5}$  are the in 5 wholes?

1 Whole	1 Whole	1 Whole	1 Whole	1 Whole
<div><div></div><div></div><div></div><div></div><div></div></div>	<div><div></div><div></div><div></div><div></div><div></div></div>	<div><div></div><div></div><div></div><div></div><div></div></div>	<div><div></div><div></div><div></div><div></div><div></div></div>	<div><div></div><div></div><div></div><div></div><div></div></div>

6)  $3 \div \frac{1}{5} =$  This is the same as saying: How many  $\frac{1}{5}$  are the in 3 wholes?

1 Whole	1 Whole	1 Whole
<div><div></div><div></div><div></div><div></div><div></div></div>	<div><div></div><div></div><div></div><div></div><div></div></div>	<div><div></div><div></div><div></div><div></div><div></div></div>

7)  $2 \div \frac{1}{7} =$  This is the same as saying: How many  $\frac{1}{7}$  are the in 2 wholes?

1 Whole	1 Whole
<div><div></div><div></div><div></div><div></div><div></div><div></div><div></div></div>	<div><div></div><div></div><div></div><div></div><div></div><div></div><div></div></div>

8)  $6 \div \frac{1}{7} =$  This is the same as saying: How many  $\frac{1}{7}$  are the in 6 wholes?

1 Whole	1 Whole	1 Whole	1 Whole	1 Whole	1 Whole
<div><div></div><div></div><div></div><div></div><div></div><div></div></div>	<div><div></div><div></div><div></div><div></div><div></div><div></div></div>	<div><div></div><div></div><div></div><div></div><div></div><div></div></div>	<div><div></div><div></div><div></div><div></div><div></div><div></div></div>	<div><div></div><div></div><div></div><div></div><div></div><div></div></div>	<div><div></div><div></div><div></div><div></div><div></div><div></div></div>

9)  $6 \div \frac{1}{3} =$  This is the same as saying: How many  $\frac{1}{3}$  are the in 6 wholes?

1 Whole	1 Whole	1 Whole	1 Whole	1 Whole	1 Whole
<div><div></div><div></div><div></div></div>	<div><div></div><div></div><div></div></div>	<div><div></div><div></div><div></div></div>	<div><div></div><div></div><div></div></div>	<div><div></div><div></div><div></div></div>	<div><div></div><div></div><div></div></div>



Solve each problem by marking off the fractions. The first is completed for you.

**Answers****Ex)**  $3 \div \frac{1}{4} = ?$  This is the same as saying: How many  $\frac{1}{4}$  are there in 3 wholes?

1 Whole				1 Whole				1 Whole			

Ex. 12

1. \_\_\_\_\_

2. \_\_\_\_\_

3. \_\_\_\_\_

4. \_\_\_\_\_

5. \_\_\_\_\_

6. \_\_\_\_\_

7. \_\_\_\_\_

8. \_\_\_\_\_

9. \_\_\_\_\_

1)  $5 \div \frac{1}{6} =$

1 Whole			1 Whole			1 Whole			1 Whole			1 Whole		

2)  $5 \div \frac{1}{2} =$

1 Whole		1 Whole		1 Whole		1 Whole		1 Whole	

3)  $5 \div \frac{1}{5} =$

1 Whole		1 Whole		1 Whole		1 Whole		1 Whole	

4)  $3 \div \frac{1}{2} =$

1 Whole			1 Whole			1 Whole		

5)  $2 \div \frac{1}{2} =$

1 Whole		1 Whole	

6)  $6 \div \frac{1}{7} =$

1 Whole		1 Whole		1 Whole		1 Whole		1 Whole		1 Whole	

7)  $4 \div \frac{1}{4} =$

1 Whole		1 Whole		1 Whole		1 Whole	

8)  $6 \div \frac{1}{6} =$

1 Whole		1 Whole		1 Whole		1 Whole		1 Whole		1 Whole	

9)  $3 \div \frac{1}{3} =$

1 Whole			1 Whole			1 Whole		



Solve each problem by marking off the fractions. The first is completed for you.

**Answers****Ex)**  $3 \div \frac{1}{4} = ?$  This is the same as saying: How many  $\frac{1}{4}$  are the in 3 wholes?Ex. 12

1 Whole				1 Whole				1 Whole			

1. 301)  $5 \div \frac{1}{6} =$  This is the same as saying: How many  $\frac{1}{6}$  are the in 5 wholes?2. 10

1 Whole				1 Whole				1 Whole				1 Whole				1 Whole			

3. 252)  $5 \div \frac{1}{2} =$  This is the same as saying: How many  $\frac{1}{2}$  are the in 5 wholes?4. 6

1 Whole		1 Whole		1 Whole		1 Whole		1 Whole	

5. 43)  $5 \div \frac{1}{5} =$  This is the same as saying: How many  $\frac{1}{5}$  are the in 5 wholes?6. 42

1 Whole				1 Whole				1 Whole				1 Whole				1 Whole			

7. 164)  $3 \div \frac{1}{2} =$  This is the same as saying: How many  $\frac{1}{2}$  are the in 3 wholes?8. 36

1 Whole		1 Whole		1 Whole	

9. 95)  $2 \div \frac{1}{2} =$  This is the same as saying: How many  $\frac{1}{2}$  are the in 2 wholes?

1 Whole		1 Whole	

6)  $6 \div \frac{1}{7} =$  This is the same as saying: How many  $\frac{1}{7}$  are the in 6 wholes?

1 Whole				1 Whole				1 Whole				1 Whole				1 Whole			

7)  $4 \div \frac{1}{4} =$  This is the same as saying: How many  $\frac{1}{4}$  are the in 4 wholes?

1 Whole				1 Whole				1 Whole				1 Whole			

8)  $6 \div \frac{1}{6} =$  This is the same as saying: How many  $\frac{1}{6}$  are the in 6 wholes?

1 Whole				1 Whole				1 Whole				1 Whole				1 Whole			

9)  $3 \div \frac{1}{3} =$  This is the same as saying: How many  $\frac{1}{3}$  are the in 3 wholes?

1 Whole			1 Whole			1 Whole		



Solve each problem by marking off the fractions. The first is completed for you.

**Answers****Ex)**  $4 \div \frac{1}{4} = ?$  This is the same as saying: How many  $\frac{1}{4}$  are there in 4 wholes?Ex. **16**

1 Whole				1 Whole				1 Whole				1 Whole			

1. \_\_\_\_\_

1)  $3 \div \frac{1}{4} =$

2. \_\_\_\_\_

1 Whole				1 Whole				1 Whole			

3. \_\_\_\_\_

2)  $4 \div \frac{1}{7} =$

4. \_\_\_\_\_

1 Whole			1 Whole			1 Whole			1 Whole		

5. \_\_\_\_\_

3)  $6 \div \frac{1}{7} =$

6. \_\_\_\_\_

1 Whole		1 Whole		1 Whole		1 Whole		1 Whole		1 Whole	

7. \_\_\_\_\_

4)  $5 \div \frac{1}{7} =$

8. \_\_\_\_\_

1 Whole		1 Whole		1 Whole		1 Whole		1 Whole	

9. \_\_\_\_\_

5)  $5 \div \frac{1}{2} =$

1 Whole		1 Whole		1 Whole		1 Whole		1 Whole	

6)  $3 \div \frac{1}{3} =$

1 Whole		1 Whole		1 Whole	

7)  $3 \div \frac{1}{7} =$

1 Whole			1 Whole			1 Whole		

8)  $5 \div \frac{1}{5} =$

1 Whole		1 Whole		1 Whole		1 Whole		1 Whole	

9)  $4 \div \frac{1}{6} =$

1 Whole			1 Whole			1 Whole			1 Whole		



Solve each problem by marking off the fractions. The first is completed for you.

**Answers**Ex)  $4 \div \frac{1}{4} = ?$  This is the same as saying: How many  $\frac{1}{4}$  are the in 4 wholes?Ex. **16**

1 Whole				1 Whole				1 Whole				1 Whole			

1. **12**1)  $3 \div \frac{1}{4} =$  This is the same as saying: How many  $\frac{1}{4}$  are the in 3 wholes?2. **28**

1 Whole				1 Whole				1 Whole			

3. **42**2)  $4 \div \frac{1}{7} =$  This is the same as saying: How many  $\frac{1}{7}$  are the in 4 wholes?4. **35**

1 Whole				1 Whole				1 Whole				1 Whole			

5. **10**3)  $6 \div \frac{1}{7} =$  This is the same as saying: How many  $\frac{1}{7}$  are the in 6 wholes?6. **9**

1 Whole				1 Whole				1 Whole				1 Whole				1 Whole			

7. **21**4)  $5 \div \frac{1}{7} =$  This is the same as saying: How many  $\frac{1}{7}$  are the in 5 wholes?8. **25**

1 Whole				1 Whole				1 Whole				1 Whole				1 Whole			

9. **24**5)  $5 \div \frac{1}{2} =$  This is the same as saying: How many  $\frac{1}{2}$  are the in 5 wholes?

1 Whole		1 Whole		1 Whole		1 Whole		1 Whole	

6)  $3 \div \frac{1}{3} =$  This is the same as saying: How many  $\frac{1}{3}$  are the in 3 wholes?

1 Whole			1 Whole			1 Whole		

7)  $3 \div \frac{1}{7} =$  This is the same as saying: How many  $\frac{1}{7}$  are the in 3 wholes?

1 Whole				1 Whole				1 Whole			

8)  $5 \div \frac{1}{5} =$  This is the same as saying: How many  $\frac{1}{5}$  are the in 5 wholes?

1 Whole				1 Whole				1 Whole				1 Whole			

9)  $4 \div \frac{1}{6} =$  This is the same as saying: How many  $\frac{1}{6}$  are the in 4 wholes?

1 Whole				1 Whole				1 Whole				1 Whole			





Solve each problem by marking off the fractions. The first is completed for you.

**Answers****Ex)**  $3 \div \frac{1}{5} = ?$  This is the same as saying: How many  $\frac{1}{5}$  are there in 3 wholes?Ex. **15**

1 Whole					1 Whole					1 Whole				

1. \_\_\_\_\_

1)  $5 \div \frac{1}{5} =$

2. \_\_\_\_\_

1 Whole	1 Whole	1 Whole	1 Whole	1 Whole

3. \_\_\_\_\_

2)  $2 \div \frac{1}{3} =$

4. \_\_\_\_\_

1 Whole	1 Whole

5. \_\_\_\_\_

3)  $4 \div \frac{1}{7} =$

6. \_\_\_\_\_

1 Whole	1 Whole	1 Whole	1 Whole

7. \_\_\_\_\_

4)  $5 \div \frac{1}{6} =$

8. \_\_\_\_\_

1 Whole	1 Whole	1 Whole	1 Whole	1 Whole

9. \_\_\_\_\_

5)  $2 \div \frac{1}{7} =$

1 Whole	1 Whole

6)  $4 \div \frac{1}{4} =$

1 Whole	1 Whole	1 Whole	1 Whole

7)  $3 \div \frac{1}{6} =$

1 Whole	1 Whole	1 Whole

8)  $3 \div \frac{1}{4} =$

1 Whole	1 Whole	1 Whole

9)  $5 \div \frac{1}{3} =$

1 Whole	1 Whole	1 Whole	1 Whole	1 Whole



Solve each problem by marking off the fractions. The first is completed for you.

**Answers**Ex)  $3 \div \frac{1}{5} = ?$  This is the same as saying: How many  $\frac{1}{5}$  are the in 3 wholes?Ex. 15

1 Whole					1 Whole					1 Whole				

1. 251)  $5 \div \frac{1}{5} =$  This is the same as saying: How many  $\frac{1}{5}$  are the in 5 wholes?2. 6

1 Whole					1 Whole					1 Whole					1 Whole				

3. 282)  $2 \div \frac{1}{3} =$  This is the same as saying: How many  $\frac{1}{3}$  are the in 2 wholes?4. 30

1 Whole					1 Whole				

5. 143)  $4 \div \frac{1}{7} =$  This is the same as saying: How many  $\frac{1}{7}$  are the in 4 wholes?6. 16

1 Whole					1 Whole					1 Whole					1 Whole				

7. 184)  $5 \div \frac{1}{6} =$  This is the same as saying: How many  $\frac{1}{6}$  are the in 5 wholes?8. 12

1 Whole					1 Whole					1 Whole					1 Whole				

9. 155)  $2 \div \frac{1}{7} =$  This is the same as saying: How many  $\frac{1}{7}$  are the in 2 wholes?

1 Whole					1 Whole				

6)  $4 \div \frac{1}{4} =$  This is the same as saying: How many  $\frac{1}{4}$  are the in 4 wholes?

1 Whole					1 Whole					1 Whole					1 Whole				

7)  $3 \div \frac{1}{6} =$  This is the same as saying: How many  $\frac{1}{6}$  are the in 3 wholes?

1 Whole					1 Whole					1 Whole				

8)  $3 \div \frac{1}{4} =$  This is the same as saying: How many  $\frac{1}{4}$  are the in 3 wholes?

1 Whole					1 Whole					1 Whole				

9)  $5 \div \frac{1}{3} =$  This is the same as saying: How many  $\frac{1}{3}$  are the in 5 wholes?

1 Whole					1 Whole					1 Whole					1 Whole				



Solve each problem by marking off the fractions. The first is completed for you.

**Answers****Ex)**  $2 \div \frac{1}{6} = ?$  This is the same as saying: How many  $\frac{1}{6}$  are there in 2 wholes?

1 Whole						1 Whole					

Ex. 12

1. \_\_\_\_\_

2. \_\_\_\_\_

3. \_\_\_\_\_

4. \_\_\_\_\_

5. \_\_\_\_\_

6. \_\_\_\_\_

7. \_\_\_\_\_

8. \_\_\_\_\_

9. \_\_\_\_\_

1)  $5 \div \frac{1}{3} =$

1 Whole	1 Whole	1 Whole	1 Whole	1 Whole

2)  $5 \div \frac{1}{5} =$

1 Whole	1 Whole	1 Whole	1 Whole	1 Whole

3)  $3 \div \frac{1}{5} =$

1 Whole	1 Whole	1 Whole

4)  $4 \div \frac{1}{7} =$

1 Whole	1 Whole	1 Whole	1 Whole

5)  $2 \div \frac{1}{7} =$

1 Whole	1 Whole

6)  $5 \div \frac{1}{4} =$

1 Whole	1 Whole	1 Whole	1 Whole	1 Whole

7)  $4 \div \frac{1}{3} =$

1 Whole	1 Whole	1 Whole	1 Whole

8)  $4 \div \frac{1}{4} =$


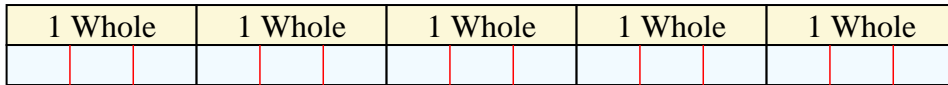
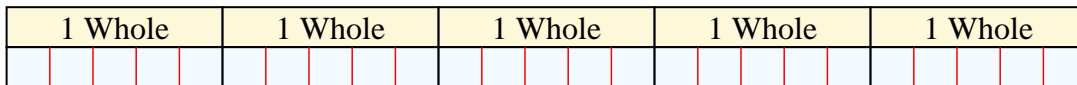
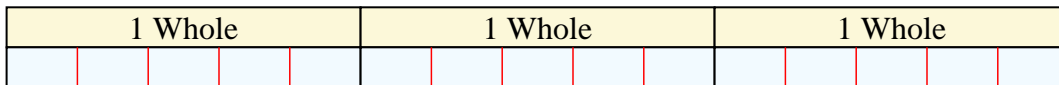
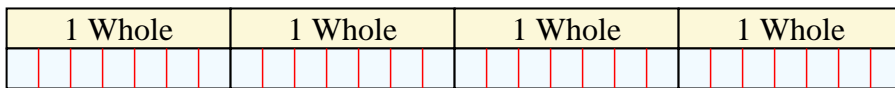

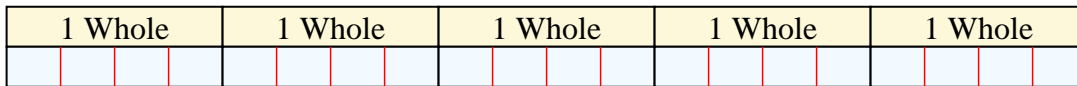


1 Whole	1 Whole	1 Whole	1 Whole

9)  $3 \div \frac{1}{3} =$

1 Whole	1 Whole	1 Whole



Solve each problem by marking off the fractions. The first is completed for you.

**Answers****Ex)**  $2 \div \frac{1}{6} = ?$  This is the same as saying: How many  $\frac{1}{6}$  are the in 2 wholes?Ex. 121. 151)  $5 \div \frac{1}{3} =$  This is the same as saying: How many  $\frac{1}{3}$  are the in 5 wholes?2. 253. 152)  $5 \div \frac{1}{5} =$  This is the same as saying: How many  $\frac{1}{5}$  are the in 5 wholes?4. 285. 143)  $3 \div \frac{1}{5} =$  This is the same as saying: How many  $\frac{1}{5}$  are the in 3 wholes?6. 207. 124)  $4 \div \frac{1}{7} =$  This is the same as saying: How many  $\frac{1}{7}$  are the in 4 wholes?8. 169. 95)  $2 \div \frac{1}{7} =$  This is the same as saying: How many  $\frac{1}{7}$  are the in 2 wholes?6)  $5 \div \frac{1}{4} =$  This is the same as saying: How many  $\frac{1}{4}$  are the in 5 wholes?7)  $4 \div \frac{1}{3} =$  This is the same as saying: How many  $\frac{1}{3}$  are the in 4 wholes?8)  $4 \div \frac{1}{4} =$  This is the same as saying: How many  $\frac{1}{4}$  are the in 4 wholes?9)  $3 \div \frac{1}{3} =$  This is the same as saying: How many  $\frac{1}{3}$  are the in 3 wholes?