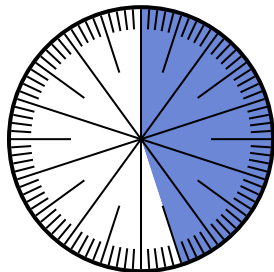


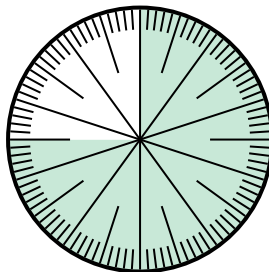


Solve each problem.

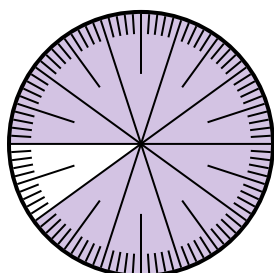
- 1) Express the un-shaded portion as a decimal of the whole.



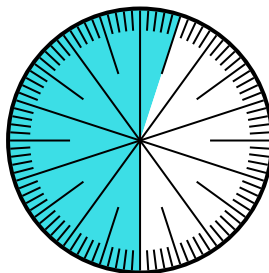
- 2) Express the un-shaded portion as a fraction of the whole with a 100 as the denominator.



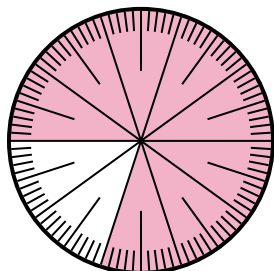
- 3) Express the un-shaded portion as a fraction of the whole with a 100 as the denominator.




- 4) Express the shaded portion as a fraction of the whole with a 100 as the denominator.




- 5) Express the shaded portion as a fraction of the whole with a 100 as the denominator.



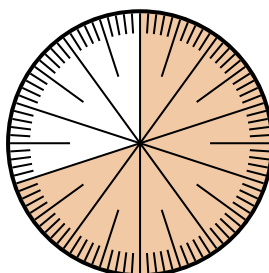
- 6) Express the shaded portion as a decimal of the whole.



- 7) Express the shaded portion as a fraction of the whole with a 100 as the denominator.



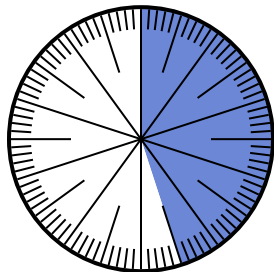
- 8) Express the shaded portion as a fraction of the whole with a 100 as the denominator.

**Answers**

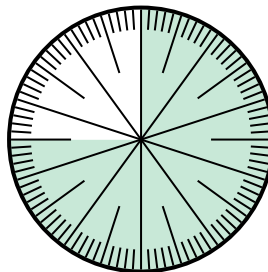
1. _____
2. _____
3. _____
4. _____
5. _____
6. _____
7. _____
8. _____

**Solve each problem.**

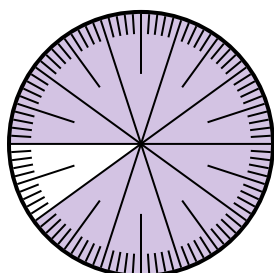
- 1) Express the un-shaded portion as a decimal of the whole.



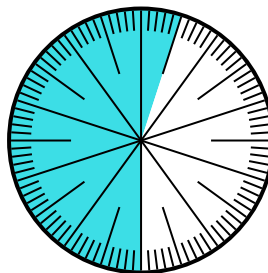
- 2) Express the un-shaded portion as a fraction of the whole with a 100 as the denominator.



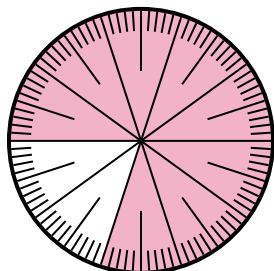
- 3) Express the un-shaded portion as a fraction of the whole with a 100 as the denominator.




- 4) Express the shaded portion as a fraction of the whole with a 100 as the denominator.



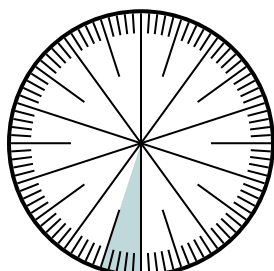
- 5) Express the shaded portion as a fraction of the whole with a 100 as the denominator.



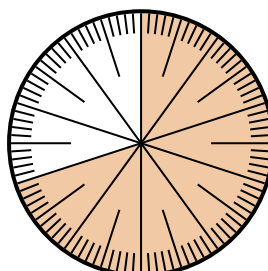
- 6) Express the shaded portion as a decimal of the whole.



- 7) Express the shaded portion as a fraction of the whole with a 100 as the denominator.



- 8) Express the shaded portion as a fraction of the whole with a 100 as the denominator.

**Answers**1. **0.55**2. **$\frac{45}{100}$** 3. **$\frac{55}{100}$** 4. **$\frac{55}{100}$** 5. **$\frac{80}{100}$** 6. **0.8**7. **$\frac{5}{100}$** 8. **$\frac{70}{100}$**