


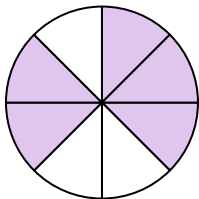


Write the shaded amount in word form.

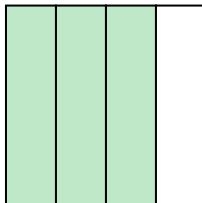
Ex)




1)




2)




3)



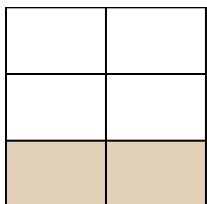
4)




5)



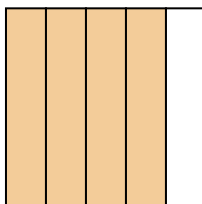
6)



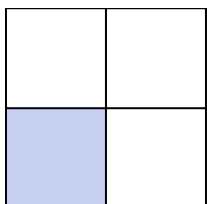
7)




8)




9)



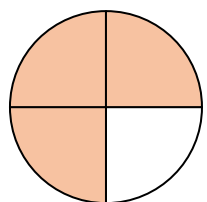
10)



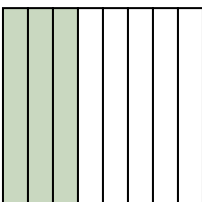
11)




12)



13)



14)

**Answers**

Ex.

one-eighth

1. _____

2. _____

3. _____

4. _____

5. _____

6. _____

7. _____

8. _____

9. _____

10. _____

11. _____

12. _____


13. _____

14. _____

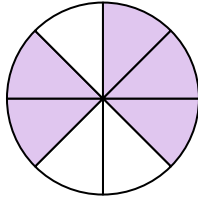


Write the shaded amount in word form.


Ex)




1)




2)




3)



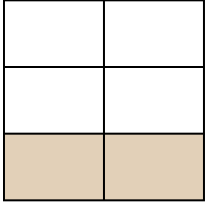
4)




5)



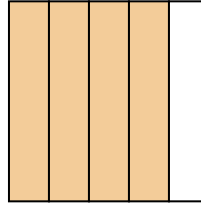
6)



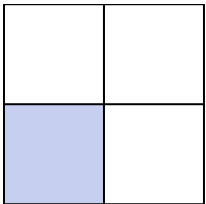
7)




8)




9)



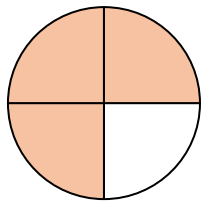
10)



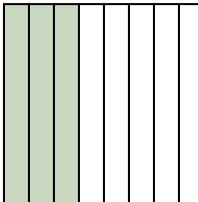
11)




12)



13)



14)

**Answers**

Ex.

one-eighth

1.

five-eighths

2.

three-fourths

3.

two-fifths

4.

one-half

5.

one-third

6.

two-fifths

7.

one-half

8.

four-fifths

9.

one-third

10.

one-half

11.

three-fourths

12.

three-fourths

13.

three-eighths

14.

one-third