

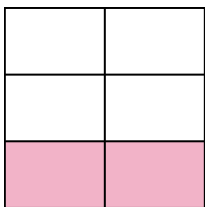


Write the shaded amount in word form.

Ex)



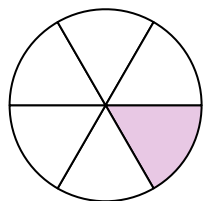
1)




2)



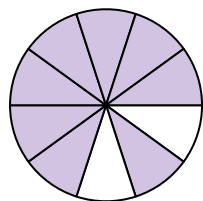
3)



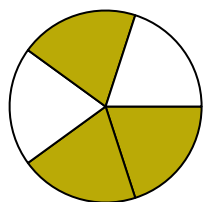
4)




5)



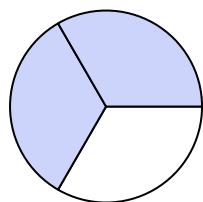
6)



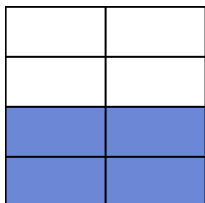
7)




8)




9)



10)




11)



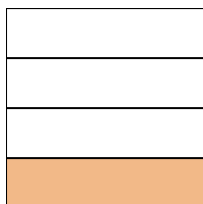
12)



13)



14)

**Answers**

Ex.

one-half

1.

2.

3.

4.

5.

6.

7.

8.

9.

10.

11.

12.

13.

14.

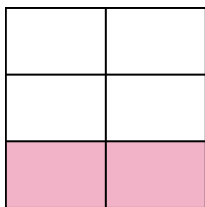


Write the shaded amount in word form.

Ex)



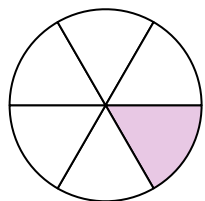
1)



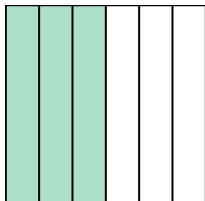
2)



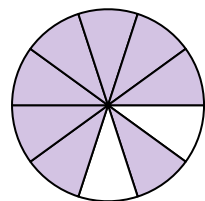
3)



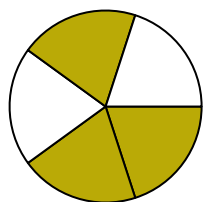
4)




5)



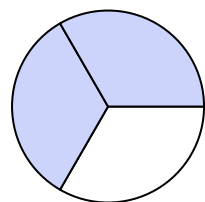
6)



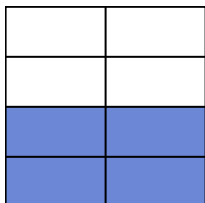
7)



8)




9)



10)




11)



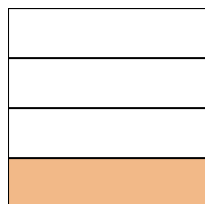
12)



13)



14)

**Answers**

Ex.

one-half

1.

two-fifths

2.

two-ninths

3.

one-sixth

4.

three-sixths

5.

eight-tenths

6.

three-fifths

7.

three-fourths

8.

two-thirds

9.

four-sevenths

10.

one-tenth

11.

two-thirds

12.

four-eighths

13.

one-half

14.

one-fourth