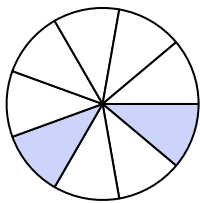





Write the shaded amount in word form.

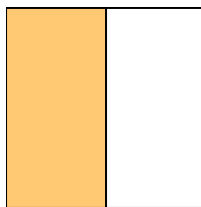
Ex)



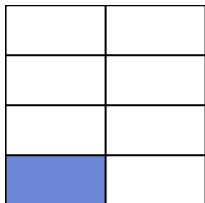
1)



2)



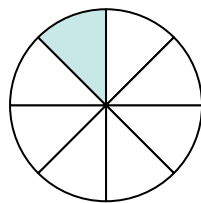
3)



4)




5)




6)



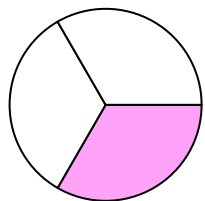
7)



8)



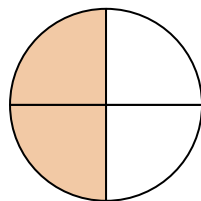
9)



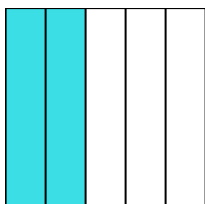
10)



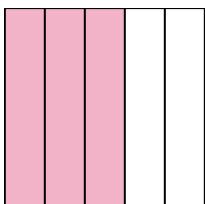
11)



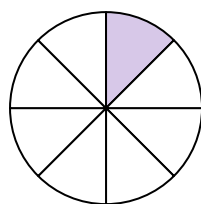
12)



13)



14)

**Answers**Ex. two-ninths

1. _____

2. _____

3. _____

4. _____

5. _____

6. _____

7. _____

8. _____

9. _____

10. _____

11. _____

12. _____

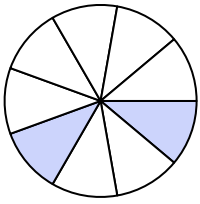
13. _____

14. _____




Write the shaded amount in word form.


Ex)



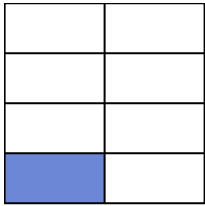
1)




2)



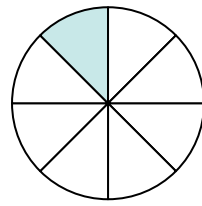
3)



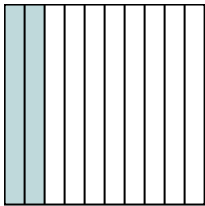
4)




5)



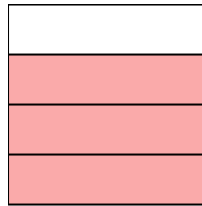
6)



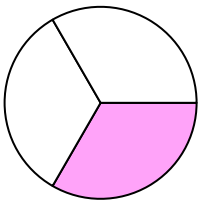
7)



8)



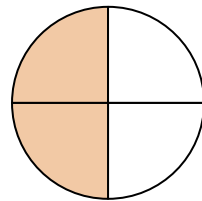
9)



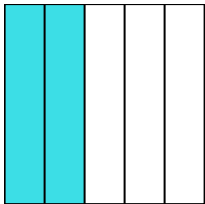
10)



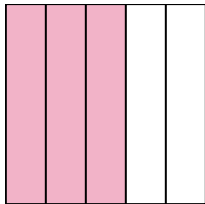
11)



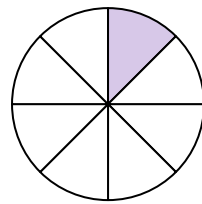
12)



13)



14)

**Answers**Ex. two-ninths1. nine-tenths2. one-half3. one-seventh4. seven-ninths5. one-eighth6. two-tenths7. four-sixths8. three-fourths9. one-third10. one-seventh11. two-fourths12. two-fifths13. three-fifths14. one-eighth