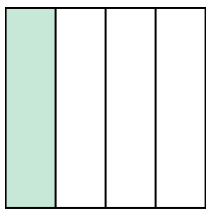





Write the shaded amount in word form.

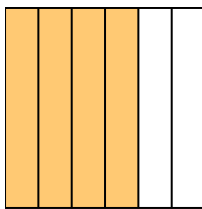
Ex)



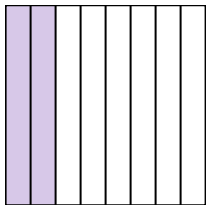
1)




2)



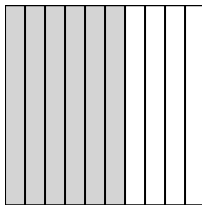
3)



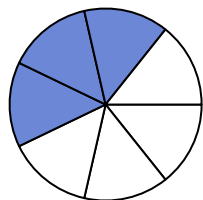
4)



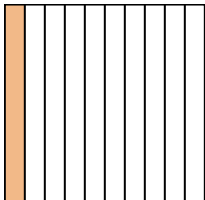
5)



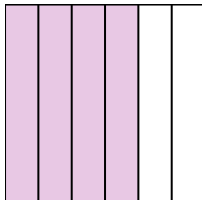
6)



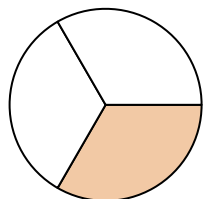
7)




8)



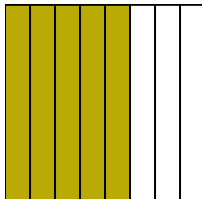
9)



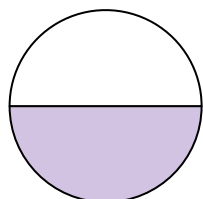
10)



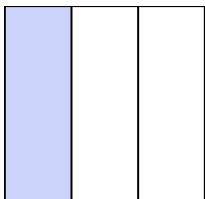
11)



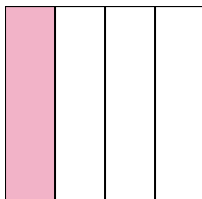
12)



13)



14)

**Answers**

Ex.

one-fourth

1.

2.

3.

4.

5.

6.

7.

8.

9.

10.

11.

12.

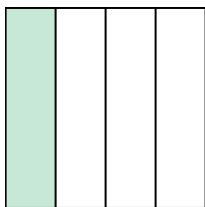
13.

14.




Write the shaded amount in word form.

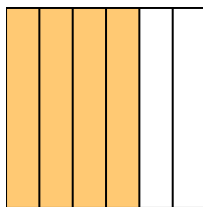
Ex)



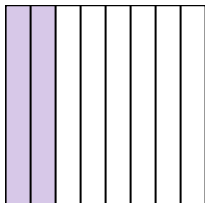
1)




2)



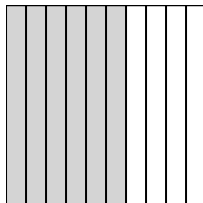
3)



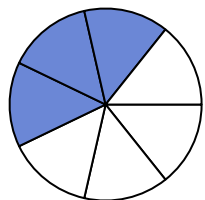
4)



5)



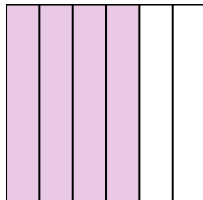
6)



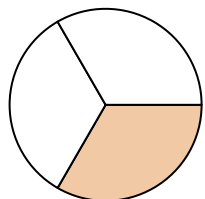
7)




8)



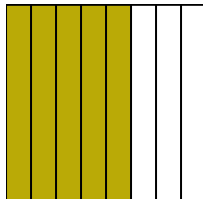
9)



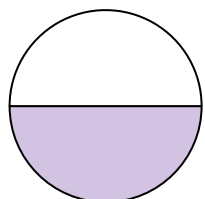
10)



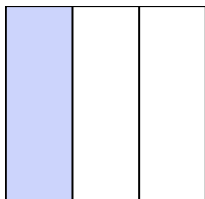
11)



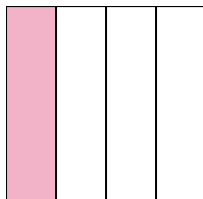
12)



13)



14)

**Answers**

Ex.

one-fourth

1.

two-fifths

2.

four-sixths

3.

two-eighths

4.

seven-ninths

5.

six-tenths

6.

three-sevenths

7.

one-tenth

8.

four-sixths

9.

one-third

10.

one-half

11.

five-eighths

12.

one-half

13.

one-third

14.

one-fourth