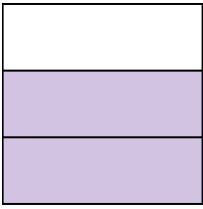





Write the shaded amount in word form.


Ex)




1)




2)



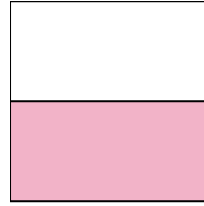
3)



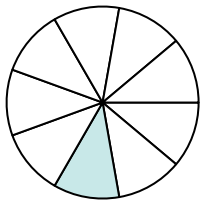
4)



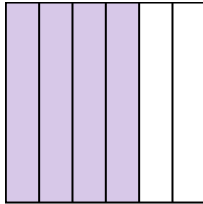
5)




6)



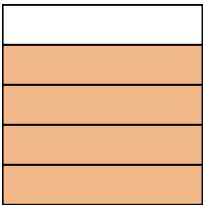
7)



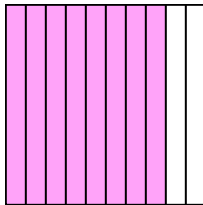
8)



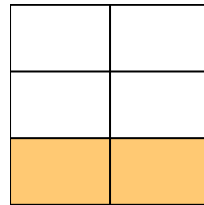
9)



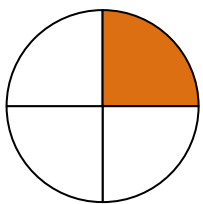
10)



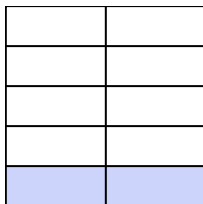
11)



12)



13)



14)

**Answers**Ex. **two-thirds**

1. _____

2. _____

3. _____

4. _____

5. _____

6. _____

7. _____

8. _____

9. _____

10. _____

11. _____

12. _____

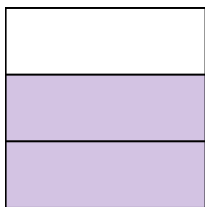
13. _____

14. _____



Write the shaded amount in word form.

Ex)




1)




2)




3)



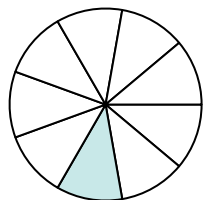
4)



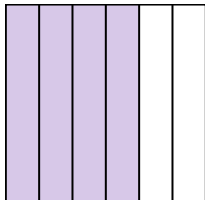
5)




6)




7)



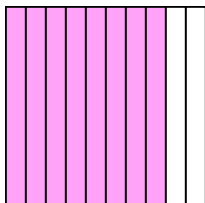
8)



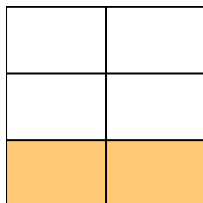
9)



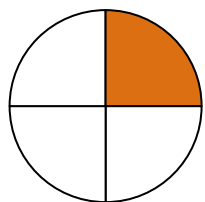
10)



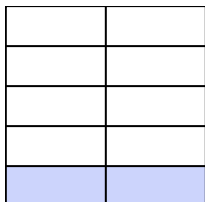
11)



12)



13)



14)

**Answers**

Ex.

two-thirds

1.

two-fourths

2.

three-sevenths

3.

one-third

4.

one-half

5.

one-half

6.

one-ninth

7.

four-sixths

8.

seven-eighths

9.

four-fifths

10.

eight-tenths

11.

two-fifths

12.

one-fourth

13.

two-ninths

14.

one-sixth