


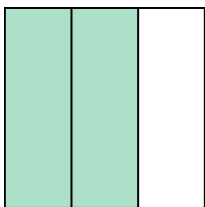


Write the shaded amount in word form.

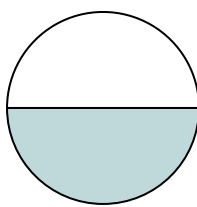
Ex)



1)



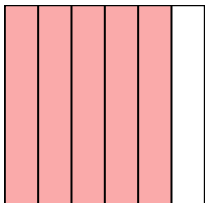
2)




3)



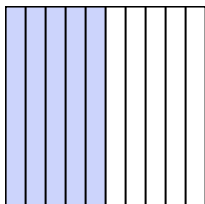
4)



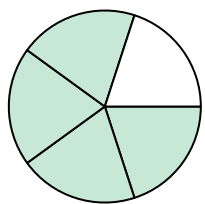
5)



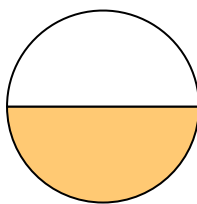
6)



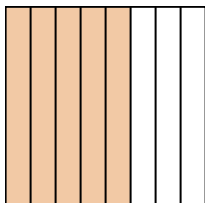
7)




8)




9)




10)




11)



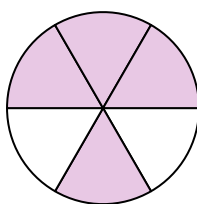
12)



13)



14)

**Answers**

Ex.

**one-third**

1.

2.

3.

4.

5.

6.

7.

8.

9.

10.

11.

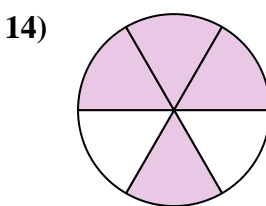
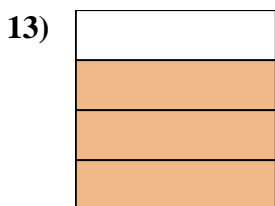
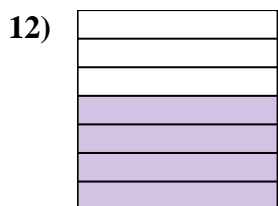


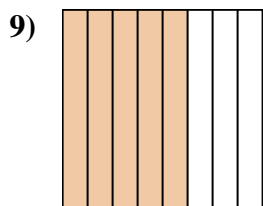
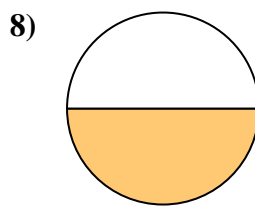
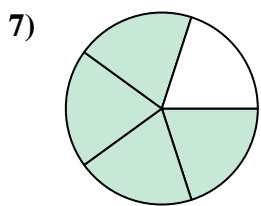
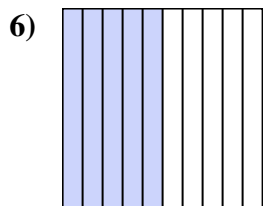
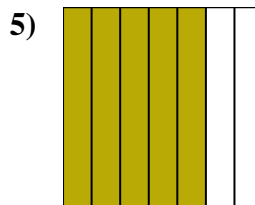
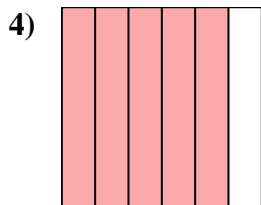
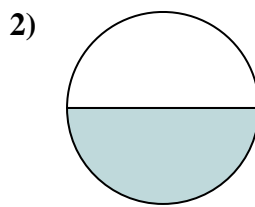
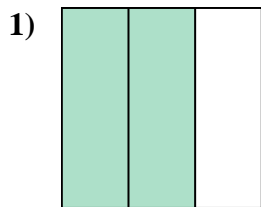
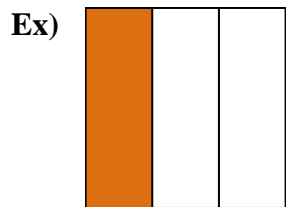
12.

13.

14.



Write the shaded amount in word form.

**Answers**Ex. one-third1. two-thirds2. one-half3. one-fifth4. five-sixths5. five-sevenths6. five-tenths7. four-fifths8. one-half9. five-eighths10. two-fourths11. one-eighth12. four-sevenths13. three-fourths14. four-sixths