


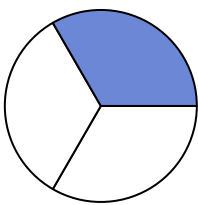


Write the shaded amount in word form.

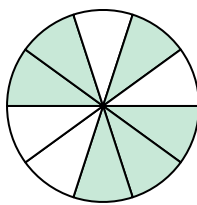
Ex)



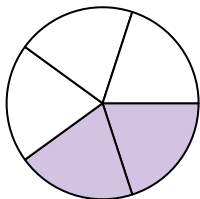
1)



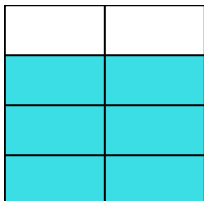
2)




3)



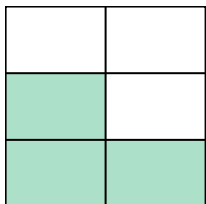
4)



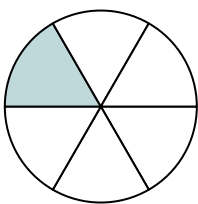
5)



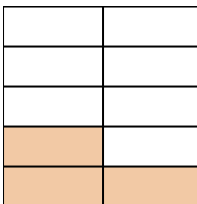
6)



7)



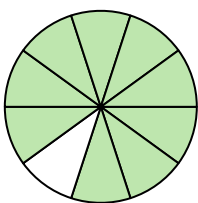
8)




9)



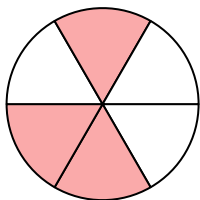
10)



11)



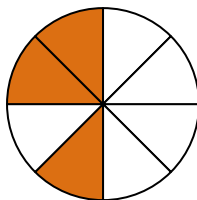
12)



13)



14)

**Answers**Ex. five-eighths

1. _____

2. _____

3. _____

4. _____

5. _____

6. _____

7. _____

8. _____

9. _____

10. _____

11. _____

12. _____


13. _____

14. _____

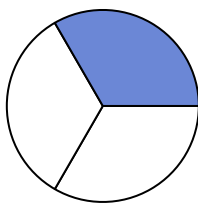


Write the shaded amount in word form.

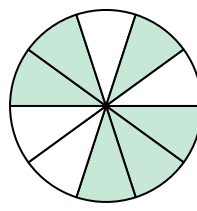
Ex)



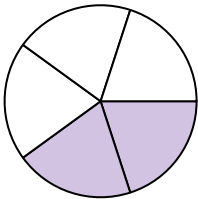
1)



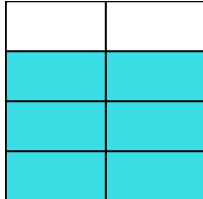
2)




3)



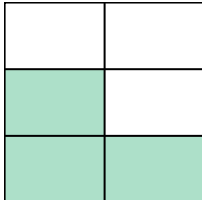
4)



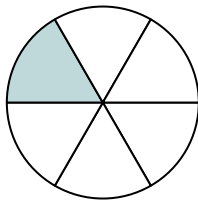
5)



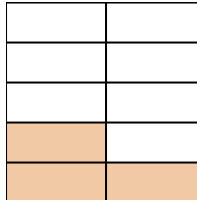
6)




7)



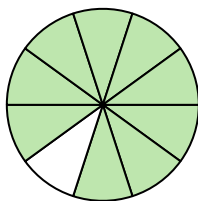
8)




9)



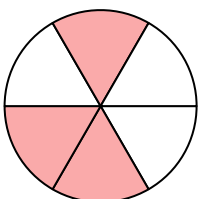
10)



11)



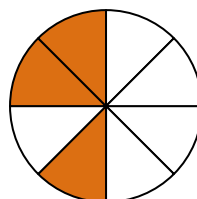
12)



13)



14)

**Answers**Ex. **five-eighths**1. **one-third**2. **six-tenths**3. **two-fifths**4. **six-sevenths**5. **three-sevenths**6. **three-fifths**7. **one-sixth**8. **three-ninths**9. **two-fourths**10. **nine-tenths**11. **three-fourths**12. **three-sixths**13. **one-half**14. **three-eighths**