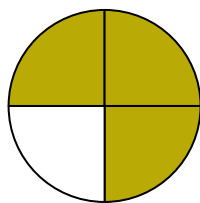





Write the shaded amount in word form.

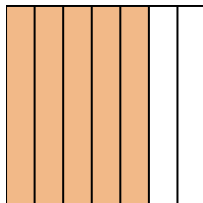
Ex)




1)



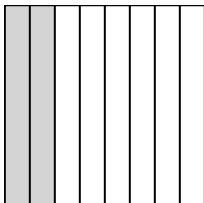
2)



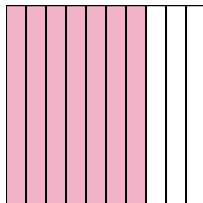
3)



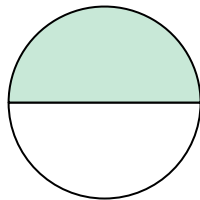
4)




5)



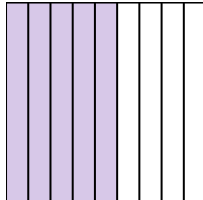
6)




7)




8)



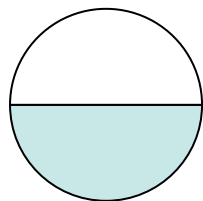
9)



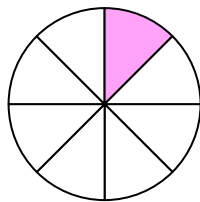
10)



11)



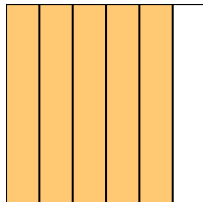
12)



13)



14)

**Answers**Ex. three-fourths

1. \_\_\_\_\_

2. \_\_\_\_\_

3. \_\_\_\_\_

4. \_\_\_\_\_

5. \_\_\_\_\_

6. \_\_\_\_\_

7. \_\_\_\_\_

8. \_\_\_\_\_

9. \_\_\_\_\_

10. \_\_\_\_\_

11. \_\_\_\_\_

12. \_\_\_\_\_

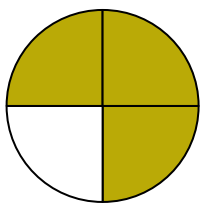
13. \_\_\_\_\_

14. \_\_\_\_\_




Write the shaded amount in word form.

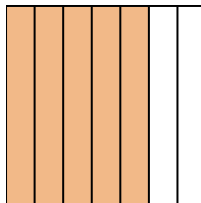
Ex)




1)



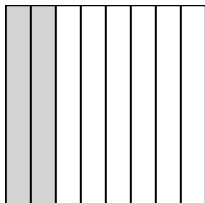
2)



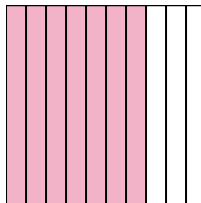
3)



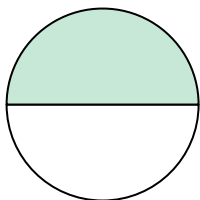
4)




5)



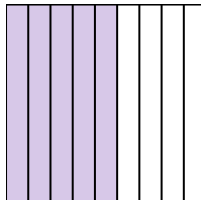
6)




7)



8)



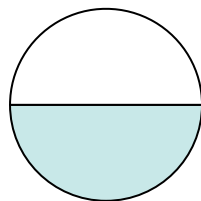
9)



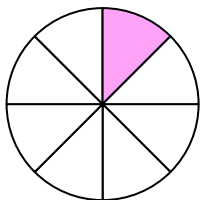
10)



11)



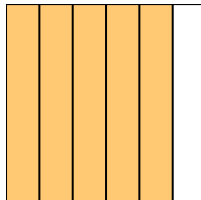
12)



13)



14)

**Answers**Ex. three-fourths1. one-fourth2. five-sevenths3. four-ninths4. two-eighths5. seven-tenths6. one-half7. one-fifth8. five-ninths9. two-fifths10. one-third11. one-half12. one-eighth13. two-tenths14. five-sixths