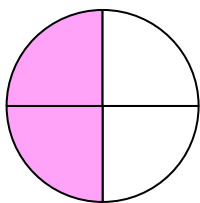


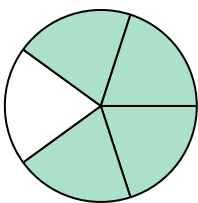


Write the shaded amount in word form.

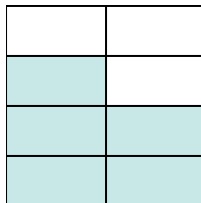
Ex)



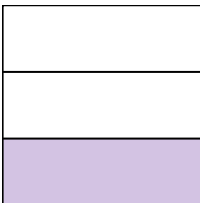
1)



2)



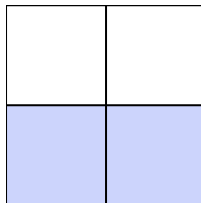
3)



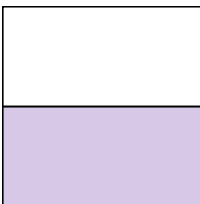
4)



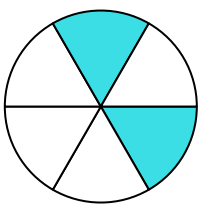
5)



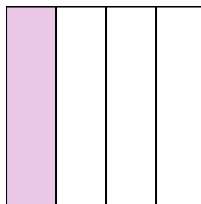
6)




7)



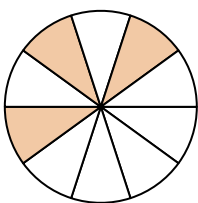
8)



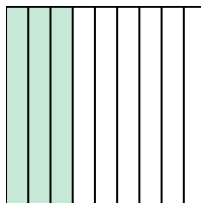
9)



10)



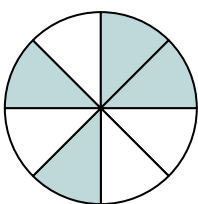
11)




12)



13)



14)

**Answers**Ex. two-fourths

1. \_\_\_\_\_

2. \_\_\_\_\_

3. \_\_\_\_\_

4. \_\_\_\_\_

5. \_\_\_\_\_

6. \_\_\_\_\_

7. \_\_\_\_\_

8. \_\_\_\_\_

9. \_\_\_\_\_

10. \_\_\_\_\_

11. \_\_\_\_\_

12. \_\_\_\_\_

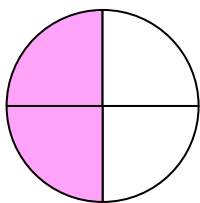
13. \_\_\_\_\_

14. \_\_\_\_\_

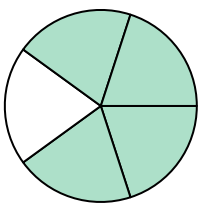


Write the shaded amount in word form.

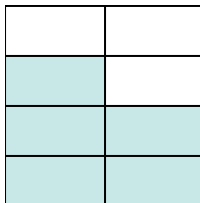
Ex)



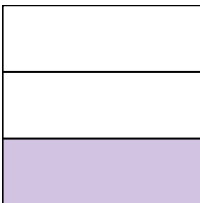
1)



2)



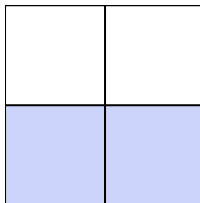
3)



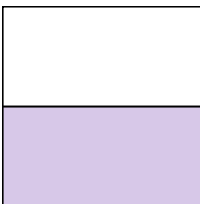
4)



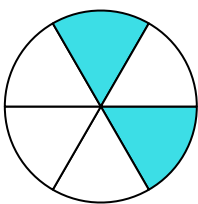
5)



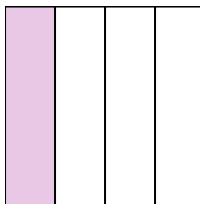
6)



7)



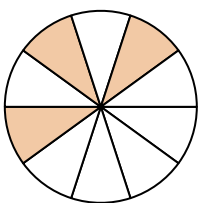
8)



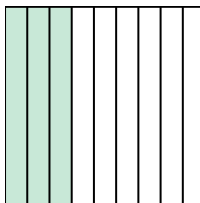
9)



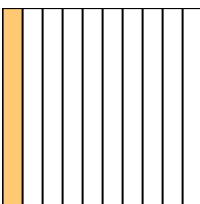
10)



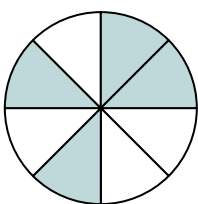
11)




12)



13)



14)

**Answers**Ex. two-fourths1. four-fifths2. five-sevenths3. one-third4. three-ninths5. two-thirds6. one-half7. two-sixths8. one-fourth9. one-half10. three-tenths11. three-ninths12. one-tenth13. four-eighths14. five-eighths