


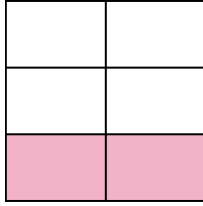


Write the shaded amount in word form.

Ex)



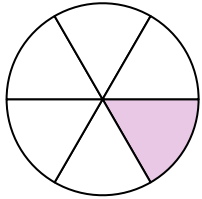
1)




2)



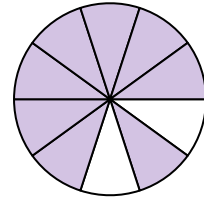
3)



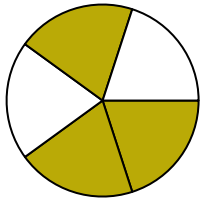
4)




5)



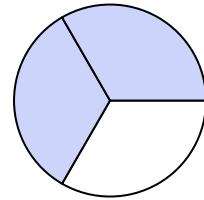
6)



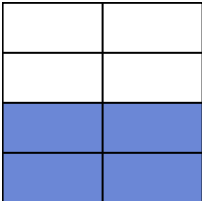
7)



8)




9)



10)




11)



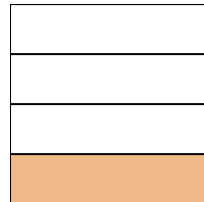
12)



13)



14)



**Answers**

Ex. **one-half**

1. \_\_\_\_\_

2. \_\_\_\_\_

3. \_\_\_\_\_

4. \_\_\_\_\_

5. \_\_\_\_\_

6. \_\_\_\_\_

7. \_\_\_\_\_

8. \_\_\_\_\_

9. \_\_\_\_\_

10. \_\_\_\_\_

11. \_\_\_\_\_

12. \_\_\_\_\_

13. \_\_\_\_\_

14. \_\_\_\_\_

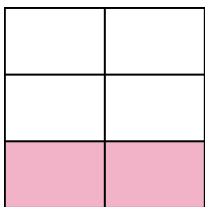


Write the shaded amount in word form.

Ex)



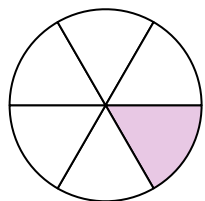
1)




2)



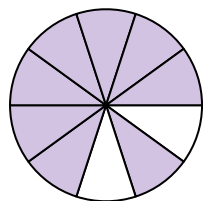
3)



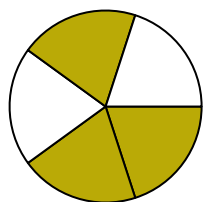
4)




5)



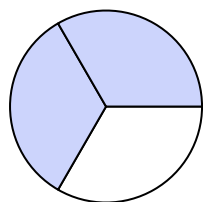
6)



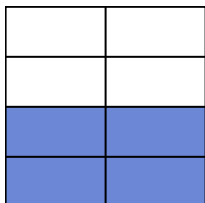
7)



8)




9)



10)




11)



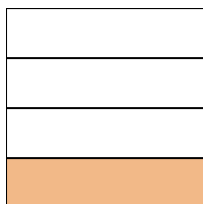
12)



13)



14)

**Answers**

Ex.

**one-half**

1.

**two-fifths**

2.

**two-ninths**

3.

**one-sixth**

4.

**three-sixths**

5.

**eight-tenths**

6.

**three-fifths**

7.

**three-fourths**

8.

**two-thirds**

9.

**four-sevenths**

10.

**one-tenth**

11.

**two-thirds**

12.

**four-eighths**

13.

**one-half**

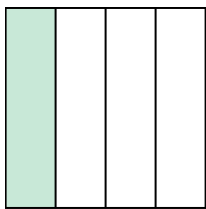
14.

**one-fourth**




Write the shaded amount in word form.

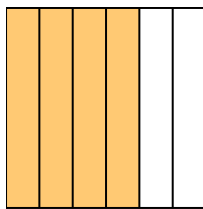
Ex)



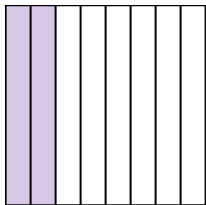
1)




2)



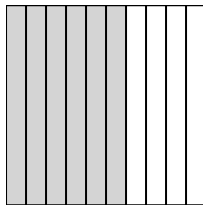
3)



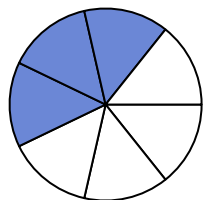
4)



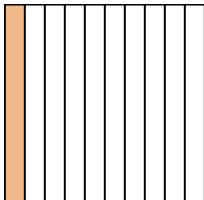
5)



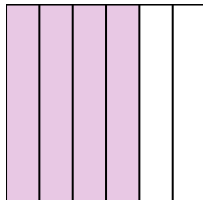
6)



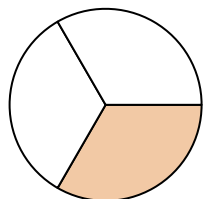
7)




8)



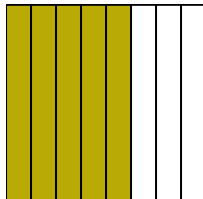
9)



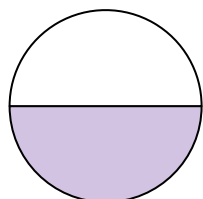
10)



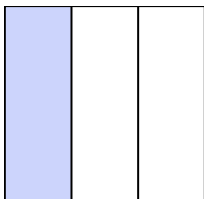
11)



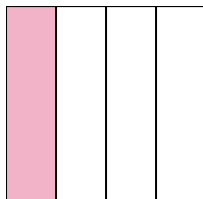
12)



13)



14)

**Answers**

Ex.

**one-fourth**

1.

2.

3.

4.

5.

6.

7.

8.

9.

10.

11.

12.

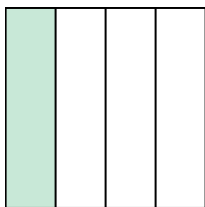
13.

14.




Write the shaded amount in word form.

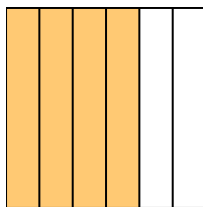
Ex)



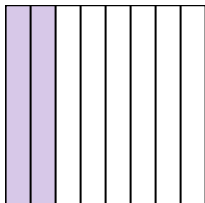
1)




2)



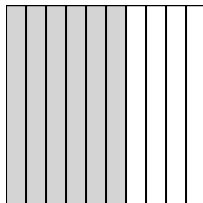
3)



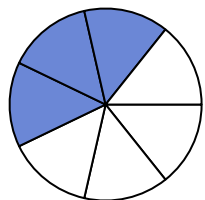
4)



5)



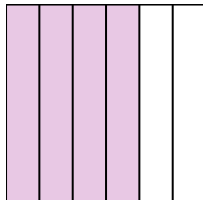
6)



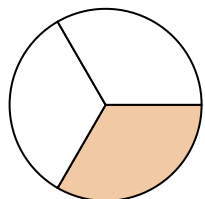
7)




8)



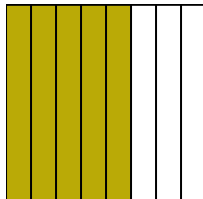
9)



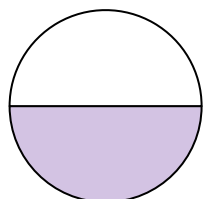
10)



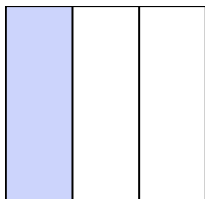
11)



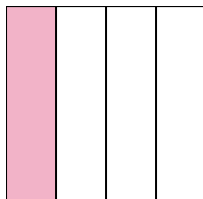
12)



13)



14)

**Answers**

Ex.

**one-fourth**

1.

**two-fifths**

2.

**four-sixths**

3.

**two-eighths**

4.

**seven-ninths**

5.

**six-tenths**

6.

**three-sevenths**

7.

**one-tenth**

8.

**four-sixths**

9.

**one-third**

10.

**one-half**

11.

**five-eighths**

12.

**one-half**

13.

**one-third**


14.

**one-fourth**

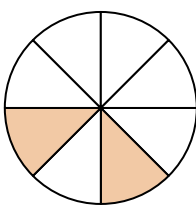


Write the shaded amount in word form.

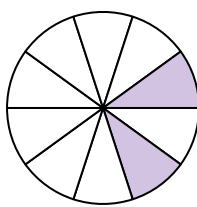
Ex)




1)




2)



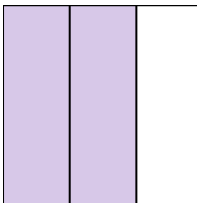
3)



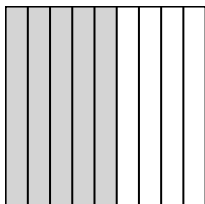
4)



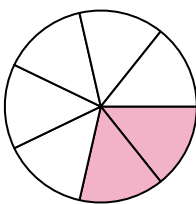
5)




6)



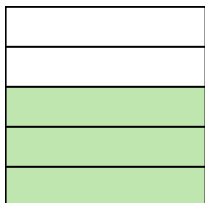
7)




8)




9)




10)




11)



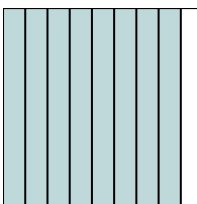
12)



13)



14)

**Answers**Ex. seven-eighths

1. \_\_\_\_\_

2. \_\_\_\_\_

3. \_\_\_\_\_

4. \_\_\_\_\_

5. \_\_\_\_\_

6. \_\_\_\_\_

7. \_\_\_\_\_

8. \_\_\_\_\_

9. \_\_\_\_\_

10. \_\_\_\_\_

11. \_\_\_\_\_

12. \_\_\_\_\_


13. \_\_\_\_\_

14. \_\_\_\_\_

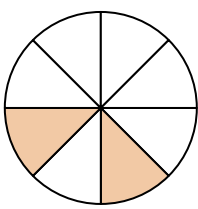


Write the shaded amount in word form.

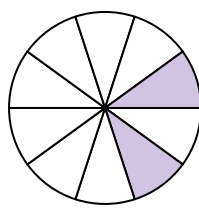
Ex)



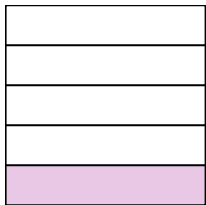
1)




2)



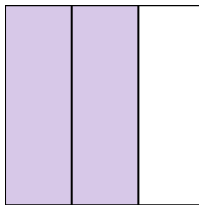
3)



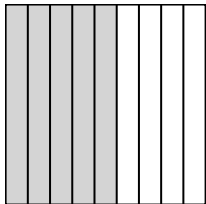
4)



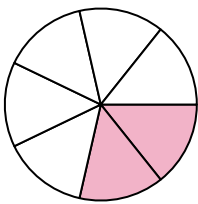
5)




6)




7)




8)




9)




10)




11)



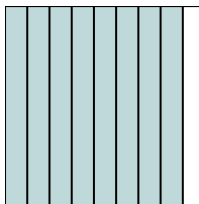
12)



13)



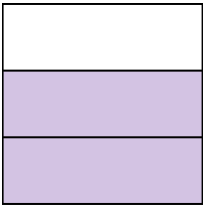
14)

**Answers**Ex. **seven-eighths**1. **two-eighths**2. **two-tenths**3. **one-fifth**4. **one-half**5. **two-thirds**6. **five-ninths**7. **two-sevenths**8. **one-third**9. **three-fifths**10. **two-fourths**11. **five-sixths**12. **eight-tenths**13. **two-sixths**14. **eight-ninths**




Write the shaded amount in word form.

Ex)




1)




2)



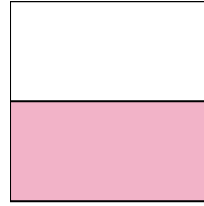
3)



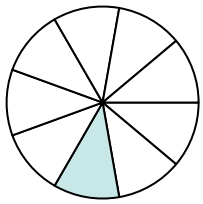
4)



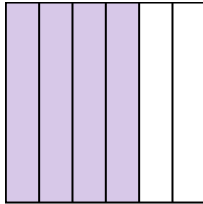
5)




6)



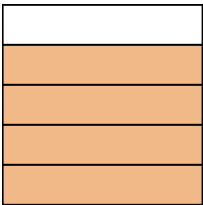
7)



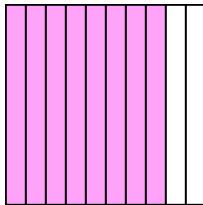
8)



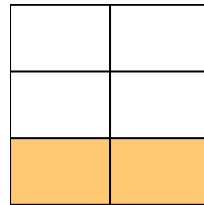
9)



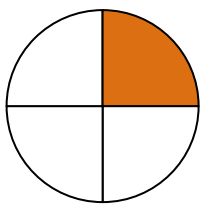
10)



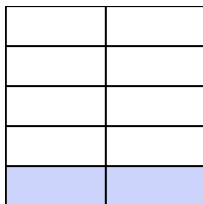
11)




12)



13)



14)

**Answers**Ex. **two-thirds**

1. \_\_\_\_\_

2. \_\_\_\_\_

3. \_\_\_\_\_

4. \_\_\_\_\_

5. \_\_\_\_\_

6. \_\_\_\_\_

7. \_\_\_\_\_

8. \_\_\_\_\_

9. \_\_\_\_\_

10. \_\_\_\_\_

11. \_\_\_\_\_

12. \_\_\_\_\_

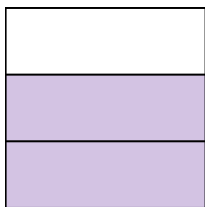
13. \_\_\_\_\_

14. \_\_\_\_\_



Write the shaded amount in word form.


Ex)




1)




2)




3)



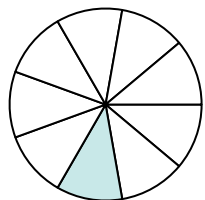
4)



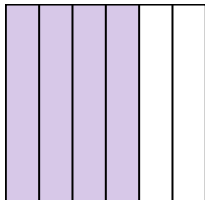
5)




6)




7)



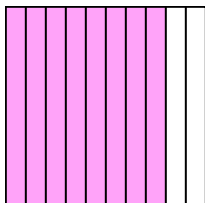
8)



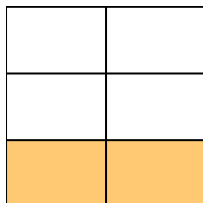
9)



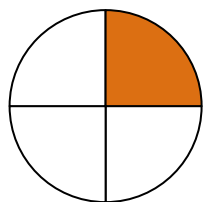
10)



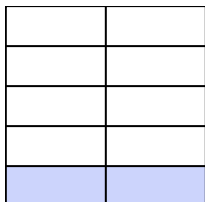
11)



12)



13)



14)


**Answers**Ex. **two-thirds**1. **two-fourths**2. **three-sevenths**3. **one-third**4. **one-half**5. **one-half**6. **one-ninth**7. **four-sixths**8. **seven-eighths**9. **four-fifths**10. **eight-tenths**11. **two-fifths**12. **one-fourth**13. **two-ninths**14. **one-sixth**



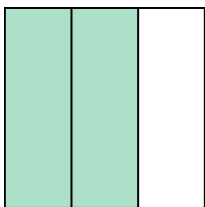


Write the shaded amount in word form.

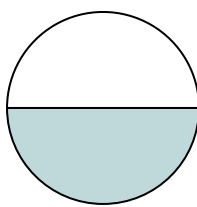
Ex)



1)



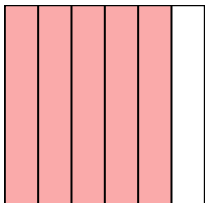
2)




3)



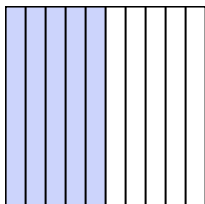
4)



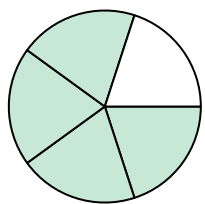
5)



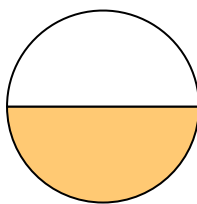
6)



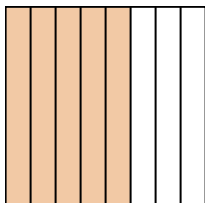
7)




8)




9)




10)




11)



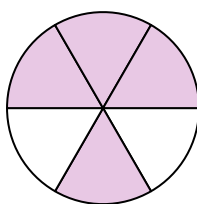
12)



13)



14)

**Answers**

Ex.

**one-third**

1.

2.

3.

4.

5.

6.

7.

8.

9.

10.

11.

12.


13.

14.

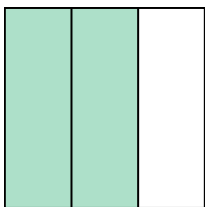


Write the shaded amount in word form.

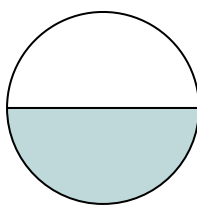
Ex)



1)



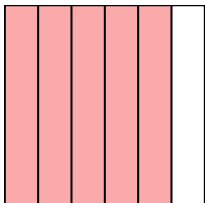
2)




3)



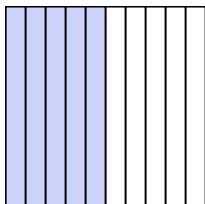
4)



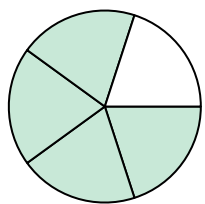
5)



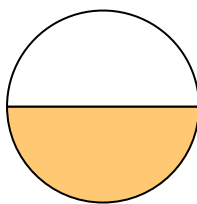
6)



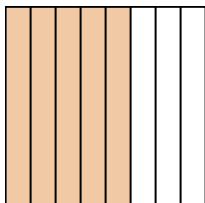
7)




8)




9)




10)




11)



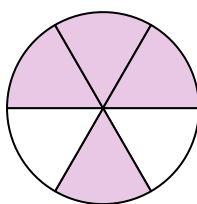
12)



13)



14)

**Answers**

Ex.

**one-third**

1.

**two-thirds**

2.

**one-half**

3.

**one-fifth**

4.

**five-sixths**

5.

**five-sevenths**

6.

**five-tenths**

7.

**four-fifths**

8.

**one-half**

9.

**five-eighths**

10.

**two-fourths**

11.

**one-eighth**

12.

**four-sevenths**

13.

**three-fourths**


14.

**four-sixths**

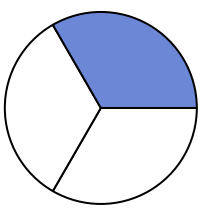


Write the shaded amount in word form.

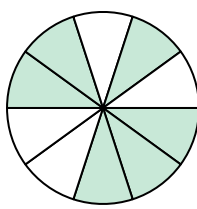
Ex)



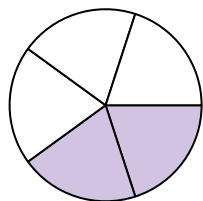
1)



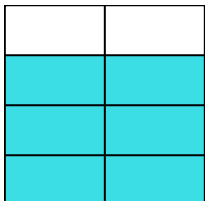
2)



3)



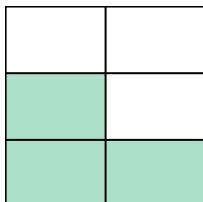
4)



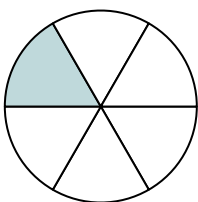
5)



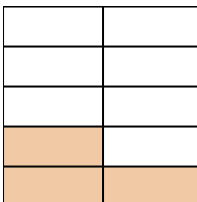
6)




7)



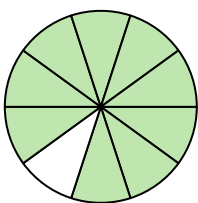
8)




9)



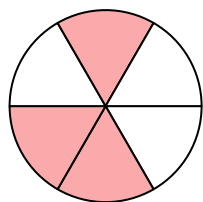
10)




11)



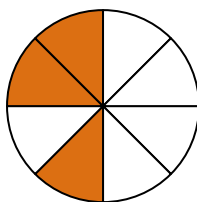
12)



13)



14)

**Answers**Ex. five-eighths

1. \_\_\_\_\_

2. \_\_\_\_\_

3. \_\_\_\_\_

4. \_\_\_\_\_

5. \_\_\_\_\_

6. \_\_\_\_\_

7. \_\_\_\_\_

8. \_\_\_\_\_

9. \_\_\_\_\_

10. \_\_\_\_\_

11. \_\_\_\_\_

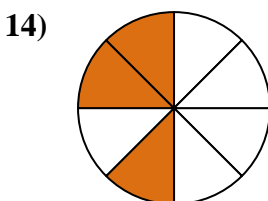
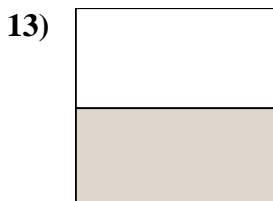
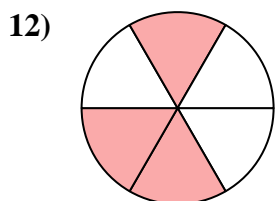
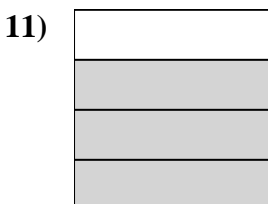
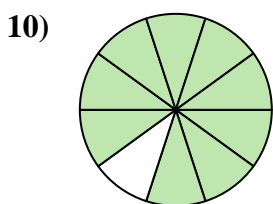
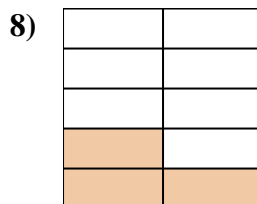
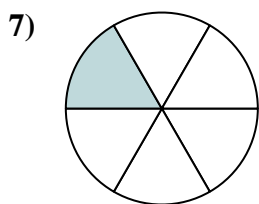
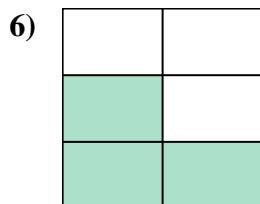
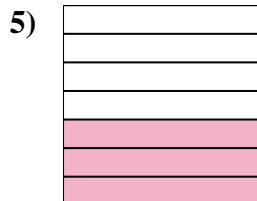
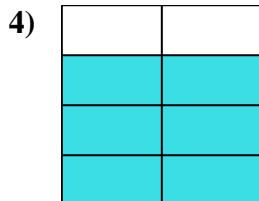
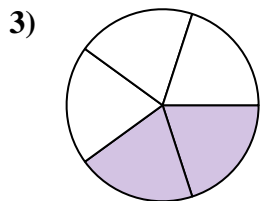
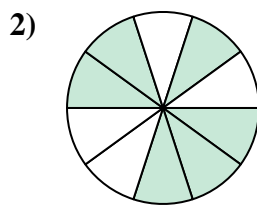
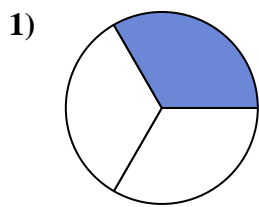
12. \_\_\_\_\_

13. \_\_\_\_\_

14. \_\_\_\_\_



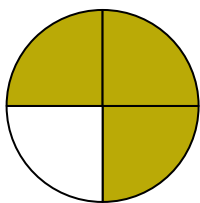
Write the shaded amount in word form.

**Answers**Ex. **five-eighths**1. **one-third**2. **six-tenths**3. **two-fifths**4. **six-sevenths**5. **three-sevenths**6. **three-fifths**7. **one-sixth**8. **three-ninths**9. **two-fourths**10. **nine-tenths**11. **three-fourths**12. **three-sixths**13. **one-half**14. **three-eighths**




Write the shaded amount in word form.

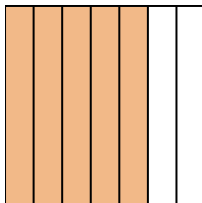
Ex)




1)



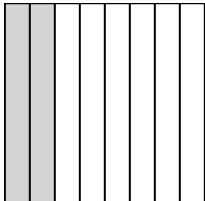
2)




3)



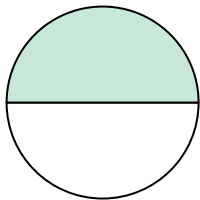
4)




5)



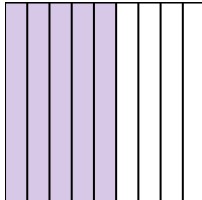
6)




7)




8)



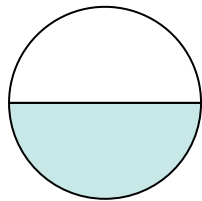
9)



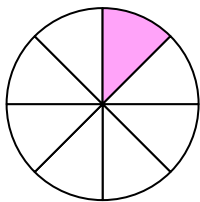
10)



11)



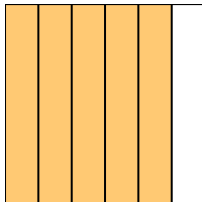
12)



13)



14)

**Answers**Ex. three-fourths

1. \_\_\_\_\_

2. \_\_\_\_\_

3. \_\_\_\_\_

4. \_\_\_\_\_

5. \_\_\_\_\_

6. \_\_\_\_\_

7. \_\_\_\_\_

8. \_\_\_\_\_

9. \_\_\_\_\_

10. \_\_\_\_\_

11. \_\_\_\_\_

12. \_\_\_\_\_

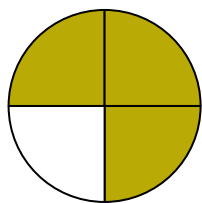
13. \_\_\_\_\_

14. \_\_\_\_\_




Write the shaded amount in word form.

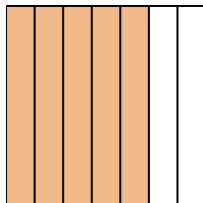
Ex)




1)



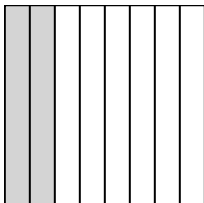
2)



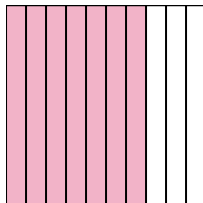
3)



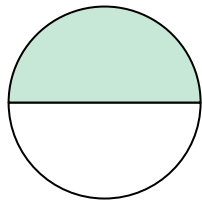
4)




5)



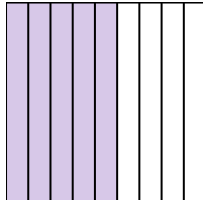
6)




7)




8)



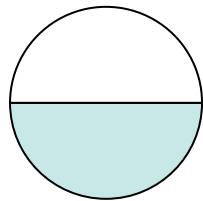
9)



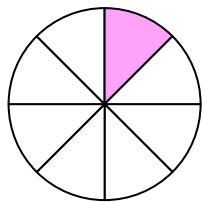
10)



11)



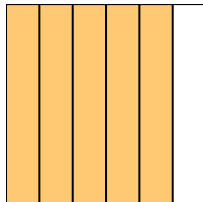
12)



13)



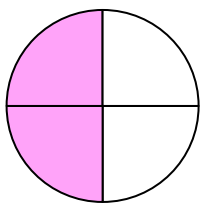
14)

**Answers**Ex. three-fourths1. one-fourth2. five-sevenths3. four-ninths4. two-eighths5. seven-tenths6. one-half7. one-fifth8. five-ninths9. two-fifths10. one-third11. one-half12. one-eighth13. two-tenths14. five-sixths

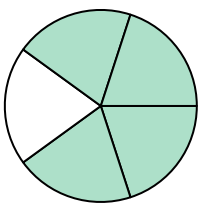


Write the shaded amount in word form.

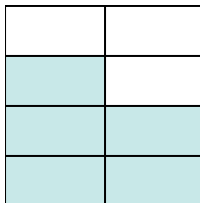
Ex)



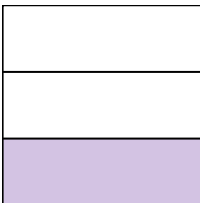
1)



2)



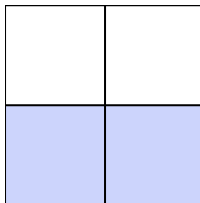
3)



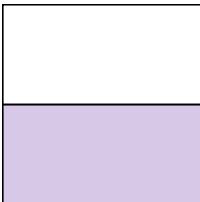
4)



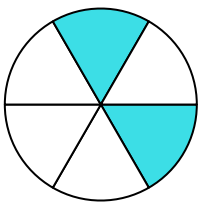
5)



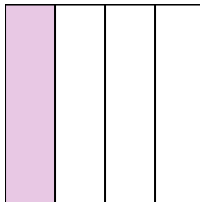
6)



7)



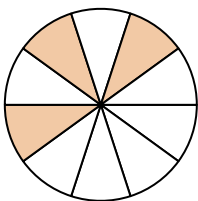
8)



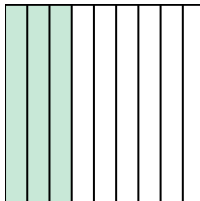
9)



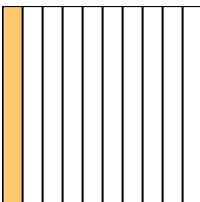
10)



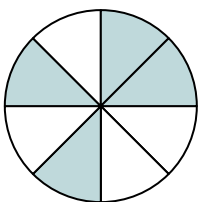
11)




12)



13)



14)

**Answers**Ex. two-fourths

1. \_\_\_\_\_

2. \_\_\_\_\_

3. \_\_\_\_\_

4. \_\_\_\_\_

5. \_\_\_\_\_

6. \_\_\_\_\_

7. \_\_\_\_\_

8. \_\_\_\_\_

9. \_\_\_\_\_

10. \_\_\_\_\_

11. \_\_\_\_\_

12. \_\_\_\_\_

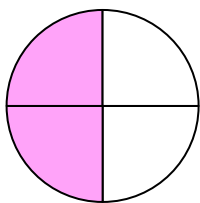
13. \_\_\_\_\_

14. \_\_\_\_\_

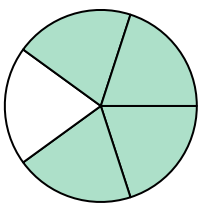


Write the shaded amount in word form.

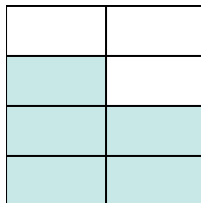
Ex)



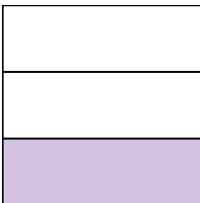
1)



2)



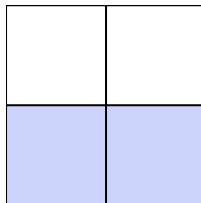
3)



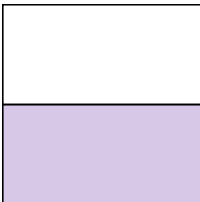
4)



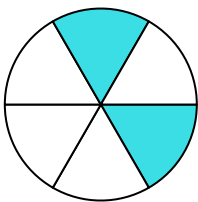
5)



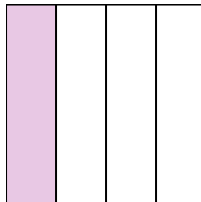
6)




7)



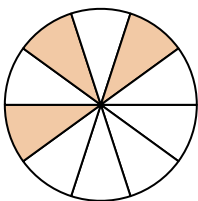
8)



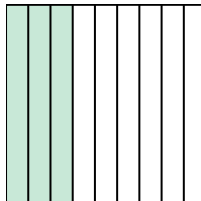
9)



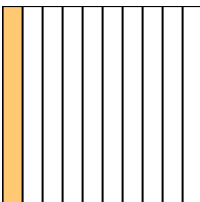
10)



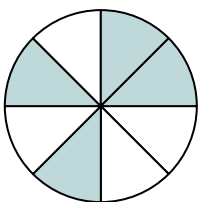
11)




12)



13)



14)


**Answers**Ex. two-fourths1. four-fifths2. five-sevenths3. one-third4. three-ninths5. two-thirds6. one-half7. two-sixths8. one-fourth9. one-half10. three-tenths11. three-ninths12. one-tenth13. four-eighths14. five-eighths






Write the shaded amount in word form.

Ex)



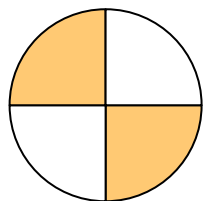
1)



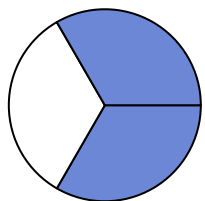
2)




3)



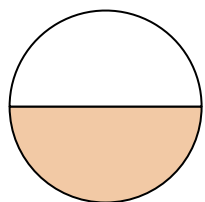
4)



5)



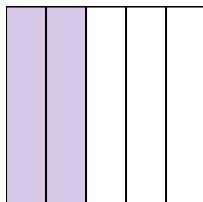
6)




7)




8)



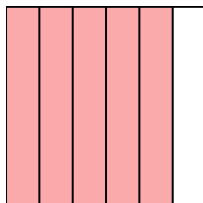
9)




10)



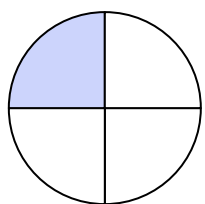
11)



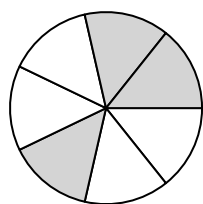
12)



13)



14)

**Answers**

Ex.

**one-half**

1.

2.

3.

4.

5.

6.

7.

8.

9.

10.

11.

12.


13.

14.




Write the shaded amount in word form.

Ex)



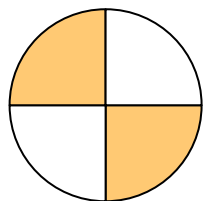
1)



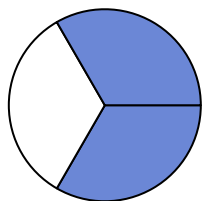
2)




3)



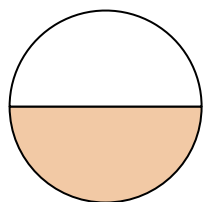
4)



5)



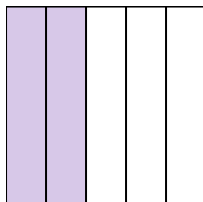
6)




7)




8)



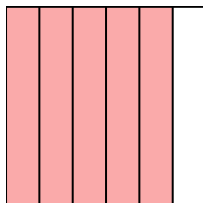
9)




10)



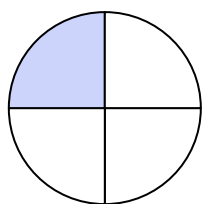
11)



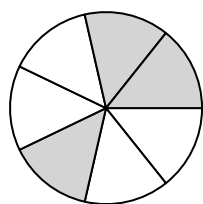
12)



13)



14)

**Answers**

Ex.

**one-half**

1.

**two-fifths**

2.

**five-tenths**

3.

**two-fourths**

4.

**two-thirds**

5.

**five-sevenths**

6.

**one-half**

7.

**four-eighths**

8.

**two-fifths**

9.

**two-thirds**

10.

**one-ninth**

11.

**five-sixths**

12.

**three-sixths**

13.

**one-fourth**

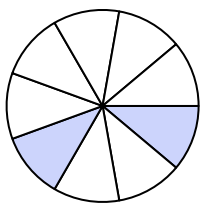
14.

**three-sevenths**




Write the shaded amount in word form.


Ex)



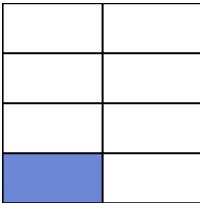
1)




2)



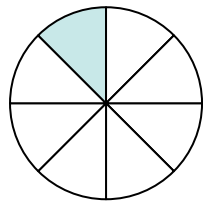
3)




4)




5)




6)



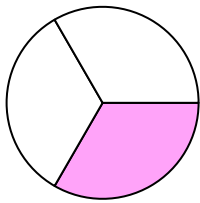
7)



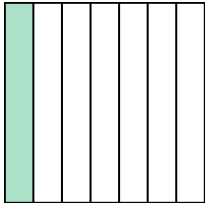
8)



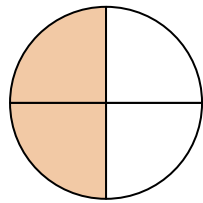
9)



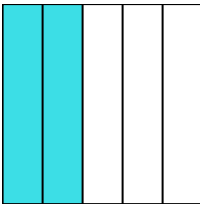
10)



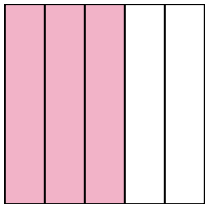
11)



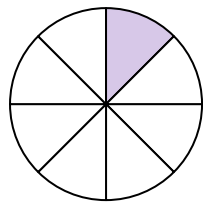
12)



13)



14)

**Answers**Ex. two-ninths

1. \_\_\_\_\_

2. \_\_\_\_\_

3. \_\_\_\_\_

4. \_\_\_\_\_

5. \_\_\_\_\_

6. \_\_\_\_\_

7. \_\_\_\_\_

8. \_\_\_\_\_

9. \_\_\_\_\_

10. \_\_\_\_\_

11. \_\_\_\_\_

12. \_\_\_\_\_

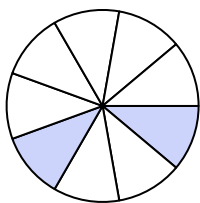
13. \_\_\_\_\_

14. \_\_\_\_\_




Write the shaded amount in word form.

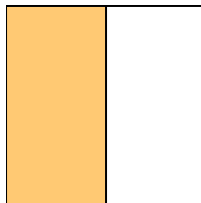
Ex)



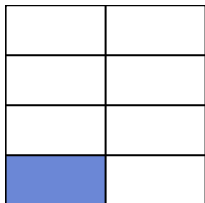
1)




2)



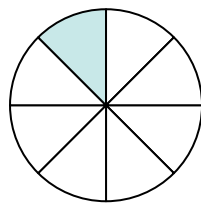
3)




4)




5)




6)



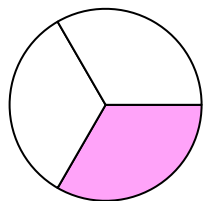
7)



8)



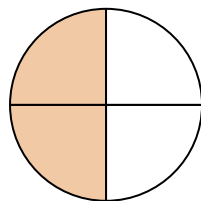
9)



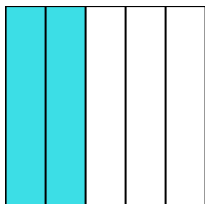
10)



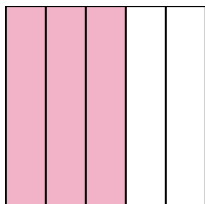
11)



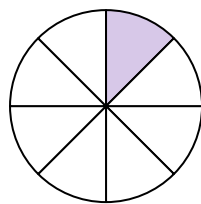
12)



13)



14)

**Answers**

Ex.

**two-ninths**

1.

**nine-tenths**

2.

**one-half**

3.

**one-seventh**

4.

**seven-ninths**

5.

**one-eighth**

6.

**two-tenths**

7.

**four-sixths**

8.

**three-fourths**

9.

**one-third**

10.

**one-seventh**

11.

**two-fourths**

12.

**two-fifths**

13.

**three-fifths**

14.

**one-eighth**