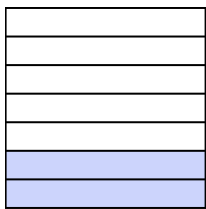





Write the shaded amount in word form.

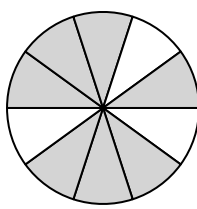
Ex)



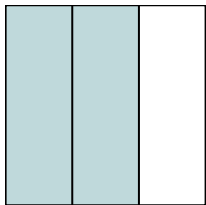
1)



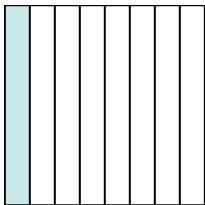
2)



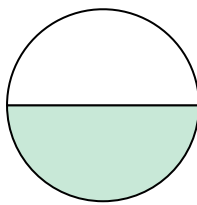
3)



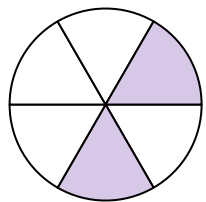
4)



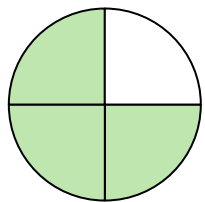
5)



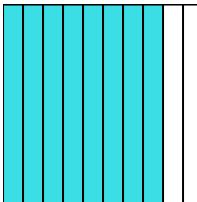
6)




7)



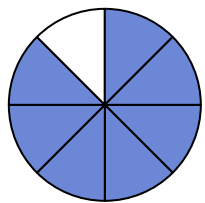
8)



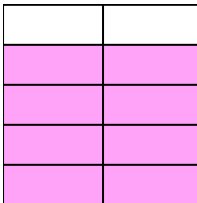
9)



10)



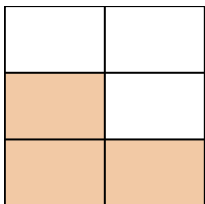
11)




12)



13)



14)

**Answers**Ex. two-sevenths

1. _____

2. _____

3. _____

4. _____

5. _____

6. _____

7. _____

8. _____

9. _____

10. _____

11. _____

12. _____


13. _____

14. _____




Write the shaded amount in word form.

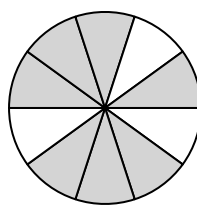
Ex)



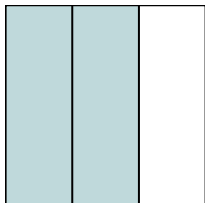
1)



2)



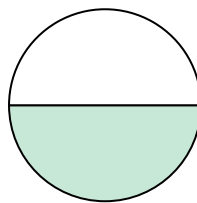
3)



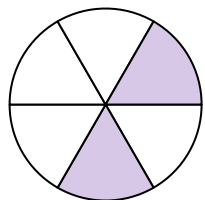
4)



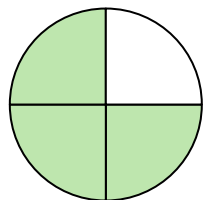
5)



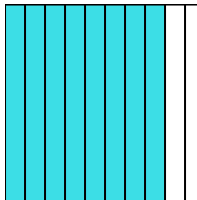
6)




7)



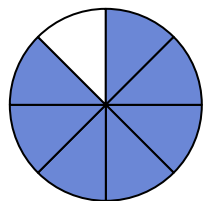
8)



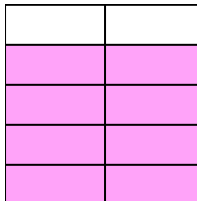
9)




10)



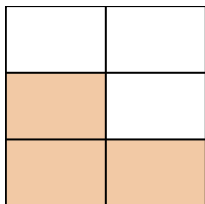
11)




12)



13)



14)

**Answers**Ex. two-sevenths1. six-sevenths2. seven-tenths3. two-thirds4. one-eighth5. one-half6. two-sixths7. three-fourths8. eight-tenths9. two-sixths10. seven-eighths11. eight-ninths12. two-fifths13. three-fifths14. two-thirds